


When towing a trailer on a public road,
what is illegal
to transport in the trailer?

- A) Passengers
- B) Explosives
- C) Firearms
- D) Flammable materials

9< Enter - See the answer #

9.当拖车在公路上时，在拖车中运什么是违法的？ (A) 旅客





This driver
is signalling his
intention to:

- A) turn left
- B) turn right
- C) slow or stop
- D) reverse

11< Enter - See the answer # - - - -

.11 该司机正在示意他要 C 减速或停车




In the diagram,
the driver
is signalling his
intention to:

- A) slow down
- B) stop
- C) turn left
- D) turn right

12< Enter - See the answer # - - - -

.12 该司机正在示意他要 D 右转




This driver
is signalling his
intention to:

- A) slow down
- B) stop
- C) turn right
- D) turn left

13< Enter - See the answer # - - - -

.13 该司机正在示意他要 D 左转

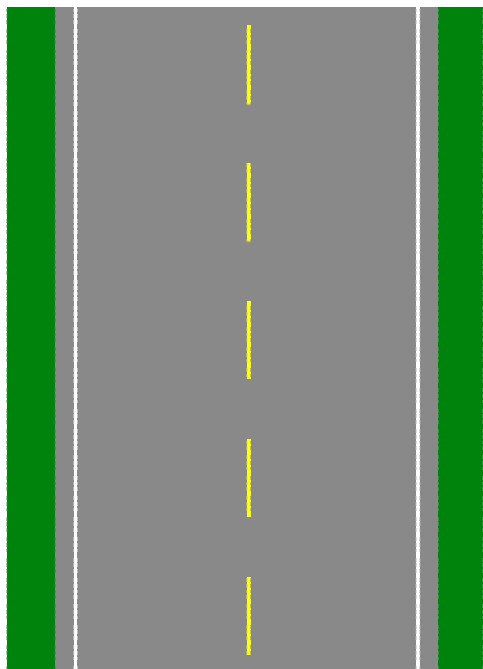


In the diagram,
the motorcyclist
is signalling
his intention to:

- A) slow down
- B) stop
- C) turn left
- D) turn right

14< Enter - See the answer # - - - -

.14 该摩托车手正在示意他要 D 右转

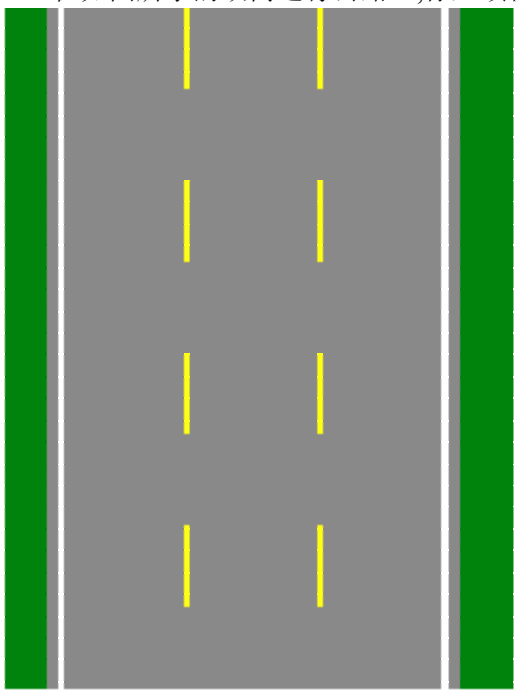


On a two-way traffic roadway,
as shown in the diagram,
you must use the right-hand lane except when:

- A) preparing to turn left
- B) checking your blind spot
- C) passing another vehicle or avoiding an obstacle
- D) checking traffic behind you

15 < Enter - See the answer #

.15 在如图所示的双向通行公路上,你必须使用右侧的公路,除非你要 C 超车或躲避障碍

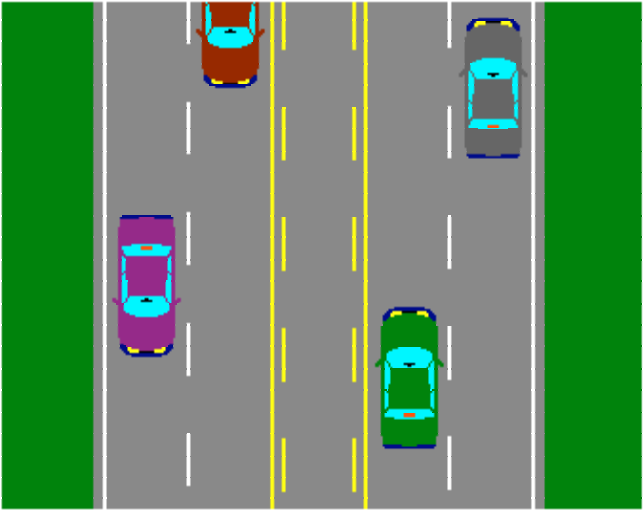


On a two-way roadway with three lanes of traffic,
as shown in the diagram,
the center lane is reserved for:

- A) passing and turning left from both directions
- B) emergency vehicles only
- C) emergency stops
- D) driving straight ahead

16 < Enter - See the answer #

.16 在如图所示的有三条车道的双向通行公路上,中间的车道是用来 A 双向的左转或超车

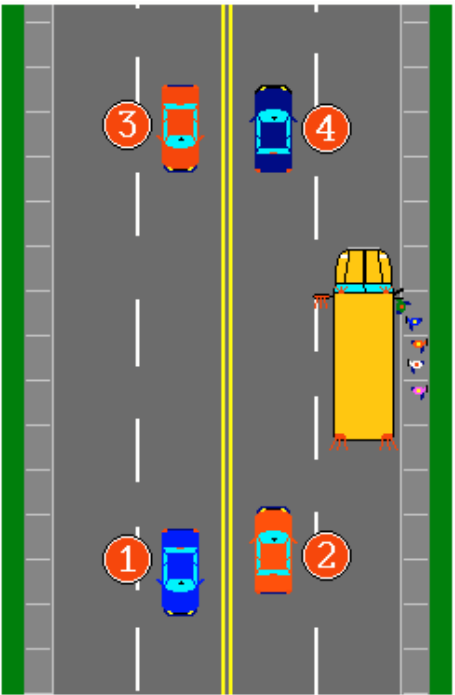


On a five lane,
two-way traffic
roadway,
as illustrated,
the center lane is
reserved for:

- A) reserved
bus lane
- B) slow moving
vehicles
- C) turning left
from both
directions
- D) emergency
vehicles

17< Enter - See the answer #

.17 在如图所示的有五条车道的双向通行公路上，中间的车道是用来 A 双向的左转

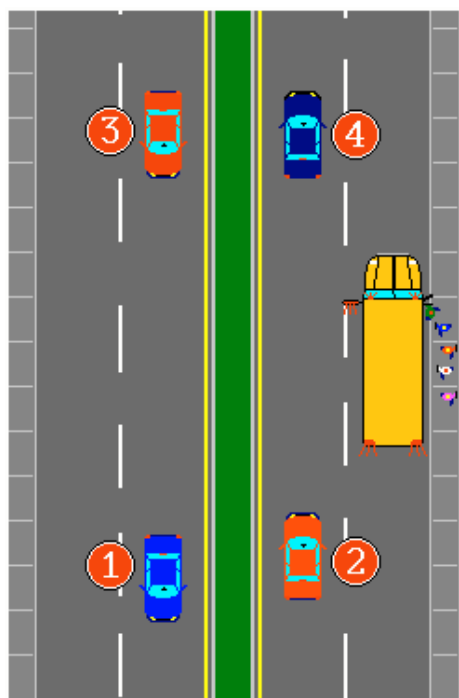


The school bus
has stopped with its
red signals flashing.
Which vehicle(s)
must come to a stop?

- A) Vehicle 2
- B) Vehicles 2 and 3
- C) Vehicles 2 and 4
- D) Vehicles 1, 2 and 3

18< Enter - See the answer #

.18 校车停车并且红灯闪烁，哪个车必须停下来？ B 车 2 和车 3



A school bus
is stopped with
red signals flashing.

Which vehicle(s)
must come to a stop?

- A) Vehicles 1 and 2
- B) Vehicles 2 and 3
- C) Vehicle 2
- D) Vehicles 3 and 4

19< Enter - See the answer # - - - -

.19 校车停车并且红灯闪烁, 哪个车必须停下来? C 车 2

Which document(s)
must you carry with you
when driving on a public roadway?

- A) Your driver's licence
- B) The registration certificate,
your driver's licence and
your birth certificate
- C) Proof of insurance
- D) Your driver's licence, the
registration certificate
and proof of insurance

20< Enter - See the answer # - - - -

.20 当在公路上行车时,你必须带那些文件? D 你的驾照, 注册证明和保险证明

The Highway Safety Code provides for
the suspension
of a learner's permit
after the learner's dossier
accumulates:

- A) 15 demerit points
- B) 10 demerit points
- C) 4 demerit points
- D) 1 demerit point

21< Enter - See the answer # - - - -

.21 公路安全法规规定, 学习者档案累计多少时,学习者的准学证会被暂停 C 记过 4 分

The Highway Safety Code provides
for the suspension of a learner's permit
when 4 demerit points or more
accumulate in the learner's dossier.
Each suspension will be for:

- A) 3 months
- B) 6 months
- C) 9 months
- D) 12 months

22< Enter - See the answer # - - - -

.22 公路安全法规规定, 学习者档案累计记过 4 分时,学习者的准学证会被暂停.每次暂停 A 3 个月

When you possess a learner's permit,
the Highway Safety Code
prohibits you from driving
after you have consumed
any alcoholic beverage whatsoever.

The penalty
for any infraction is:

- A) 4 demerit points
- B) a 3 month suspension
- C) a fine of 300\$ to 600\$
- D) all of the above

23< Enter - See the answer # - - - -

.23 当你获得准学证时,公路安全法规规定,禁止你饮用任何酒精饮料后驾车,如若违反,处罚是 (D)
A 记过4分 B 3个月暂停 C 300元到600元的罚金 D 以上所有

Any driver,
holding a learner's permit,
who is found to have
any alcohol whatsoever in their blood,
will have their learner's permit
suspended on-the-spot
for a period of:

- A) 5 days for a first offence
- B) 15 days for a first offence
- C) 30 days for a first offence
- D) 3 months for a first offence

24< Enter - See the answer # - - - -

.24 任何持有准学证的司机,被警察查出在血液中含酒精,会被当场暂停准学证多久 B 第一次违反者 15 天

Any driver,
who holds a learner's permit,
stopped by a police officer with any
alcohol whatsoever in their blood
will have their learner's permit
suspended on-the-spot for
a period of:

- A) 3 months for a repeat offence
- B) 10 days for a repeat offence
- C) 30 days for a repeat offence
- D) 60 days for a repeat offence

25< Enter - See the answer # - - - -

.25 任何持有准学证的司机, 被警察查出在血液中含酒精, 会被当场暂停准学证多久 C 再次违反者 30 天

A police officer requests that you
submit to a breathalyzer test.
If you have a learner's permit,
what penalty is prescribed by
the Highway Safety Code
if you refuse to take the test?

- A) You will be charged with
Driving While Impaired
- B) A severe warning
- C) You will be required
to take the test
- D) Your learner's permit will
be suspended for 3 months

26< Enter - See the answer # - - - -

.26 如果你持有准学证, 当警察要求你接受酒精测定时, 如果你拒绝, 公路安全法规规定你将受到何处罚?

D 你的准学证将被暂停 3 个月

Having fulfilled all of the
requirements for obtaining your
first automobile driver's licence,
if you are under 25 years of age,
you will be issued:

- A) a driver's licence that will
be valid for 2 years
- B) a probationary licence that is
valid for 2 years or until you
turn 25 (whichever occurs first)
- C) a learner's licence that will
be valid for 1 year
- D) a restricted licence that will
be valid for 3 months

27< Enter - See the answer #

.27 在第一次申请驾照时,完成所有的要求之后,如果你不满 25 岁, 你将获得: B 一个有效期 2 年或有效期至你 25 岁的试用驾照(是哪个在先为准)

The Highway Safety Code provides for
the suspension of a novice driver's
probationary licence
after the driver's dossier accumulates:

- A) 15 demerit points
- B) 10 demerit points
- C) 4 demerit points
- D) 1 demerit point

28< Enter - See the answer #

.28 公路安全法规规定, 在司机的档案累计到多少时, 新手的试用驾照会被暂停 C 记过 4 分

Each time the
«Société De L'Assurance Automobile
Du Québec»

suspends a probationary licence

because the novice driver
has accumulated
4 points or more ...

- A) all demerit points are written off the driver's record
- B) a maximum of 5 points are written off the driver's record
- C) all demerit points from the latest infraction remain on the driver's record
- D) demerit points exceeding 4 remain for 2 years from the date when found guilty or the fine was paid

29< Enter - See the answer #

.29 每次魁省汽车安全委员会因为新司机累计 4 分或更多而暂停其试用驾照时, D 记过超过 4 分的从违规之日或付罚金之日起记录保留 2 年

The Highway Safety Code provides for
the suspension of a probationary licence
when a novice driver accumulates
4 demerit points or more.

Each suspension will be for:

- A) 12 months
- B) 9 months
- C) 6 months
- D) 3 months

30< Enter - See the answer #

..30 公路安全法规规定, 新司机累计记过 4 分或以上, 暂停其试用驾照的时间是 D 3 个月

When you have a probationary licence,
the Highway Safety Code
prohibits you from driving
after you have consumed
any alcoholic beverage whatsoever.

The penalty
for any infraction is:

- A) 4 demerit points
- B) a 3 month suspension
- C) a fine of 300\$ to 600\$
- D) all of the above

31< Enter - See the answer #

.31 当你有一个试用驾照,公路安全法规禁止你在饮用任何的酒精饮料后驾车,如若违反处罚是
A 记过 4 分 B 3 个月暂停 C 300 元到 600 元的罚金 D 以上所有

Any driver,
holding a probationary licence,
who is found to have
any alcohol whatsoever in their blood,
will have their probationary licence
suspended on-the-spot for
a period of:

- A) 5 days for a first offence
- B) 15 days for a first offence
- C) 30 days for a first offence
- D) 3 months for a first offence

Manual P.4.7

■ . . .

.32 任何持有试用驾照的司机如果被发现血液中含有酒精,他的试用驾照将会被当场暂停.暂停时间为 B
初次违反 15 天

Any driver,
who holds a probationary licence,
stopped by a police officer with any
alcohol whatsoever in their blood
will have their licence suspended
on-the-spot
for a period of:

- A) 3 months for a repeat offence
- B) 10 days for a repeat offence
- C) 30 days for a repeat offence
- D) 60 days for a repeat offence

33< Enter - See the answer #

.33 任何持有试用驾照的司机如果被发现血液中含有酒精，他的试用驾照将会被当场暂停。暂停时间为 C 再次违反 30 天

A police officer requests that you
submit to a breathalyzer test.
If you have a probationary licence,
what penalty is prescribed by
the Highway Safety Code
if you refuse to take the test?

- A) You will be charged with
Driving While Impaired
- B) A severe warning
- C) You will be required
to take the test
- D) Your licence will be
suspended for 3 months

34< Enter - See the answer #

.34 如果你持有试用驾照，当警察要求你接受酒精测定时，如果你拒绝，公路安全法规规定你将受到何处罚？

D 你的试用驾照将被暂停 3 个月

Having fulfilled all of the requirements for obtaining your first automobile driver's licence, if you are 25 years of age or older, you will be issued:

- A) a probationary licence that will be valid for 2 years
- B) a class 5 driver's licence
- C) a restricted licence that will be valid for 3 months
- D) a class 4 driver's licence

35< Enter - See the answer # - - - -

.35 在第一次申请驾照时,完成所有的要求之后,如果你大于 25 岁,你将获得: B 5 类驾照

Lending your driver's licence to someone else is:

- A) permitted in cases of emergency
- B) permitted if that person can drive safely
- C) inadvisable and illegal
- D) possible only if that person already has a driver's licence, but forgot it at home

36< Enter - See the answer # - - - -

.36 将你的驾照借给他人, C 是不明智和违法的

**A driver's licence
is normally valid for:**

- A) 6 months
- B) 12 months
- C) 24 months
- D) 36 months

37< Enter - See the answer #

.37 司机驾照通常有效期是 C 24 个月

**The law
requires you to have
your driver's licence with you:**

- A) when driving a vehicle
on a public highway or
accompanying a learner
- B) only when driving a truck
- C) when you are 18 years
of age or older
- D) at all times

38< Enter - See the answer #

.38 法律要求你在何时将驾照带在身上 A 当你在公路上驾车或陪伴学习者时

You must notify the
«S.A.A.Q.»
of a change of address:

- A) within 30 days of the change of address
- B) 30 days before the change of address
- C) when you renew your driver's licence
- D) the same day you move

39< Enter - See the answer #

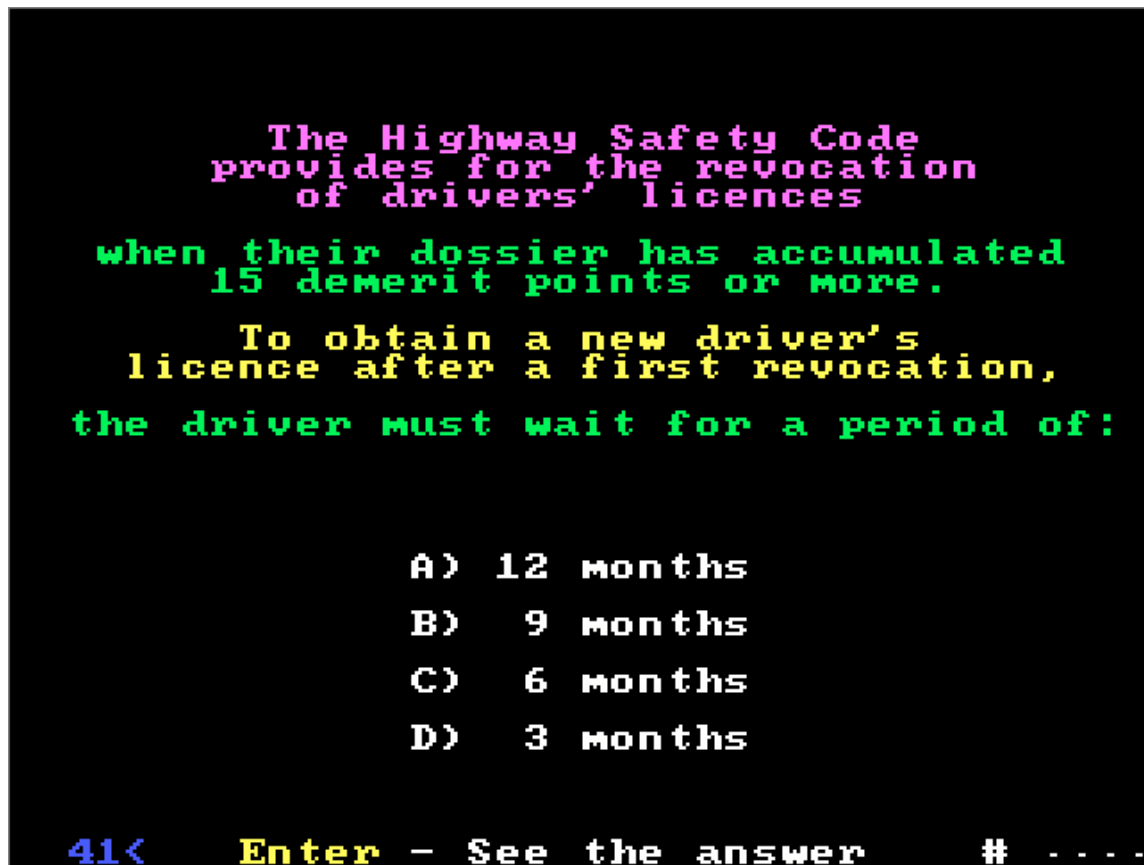
.39 当住址变更时,你必须通知 SAAQ A 在住址变更的 30 天内

According
to the Highway Safety Code,
when must you renew
your driver's licence?

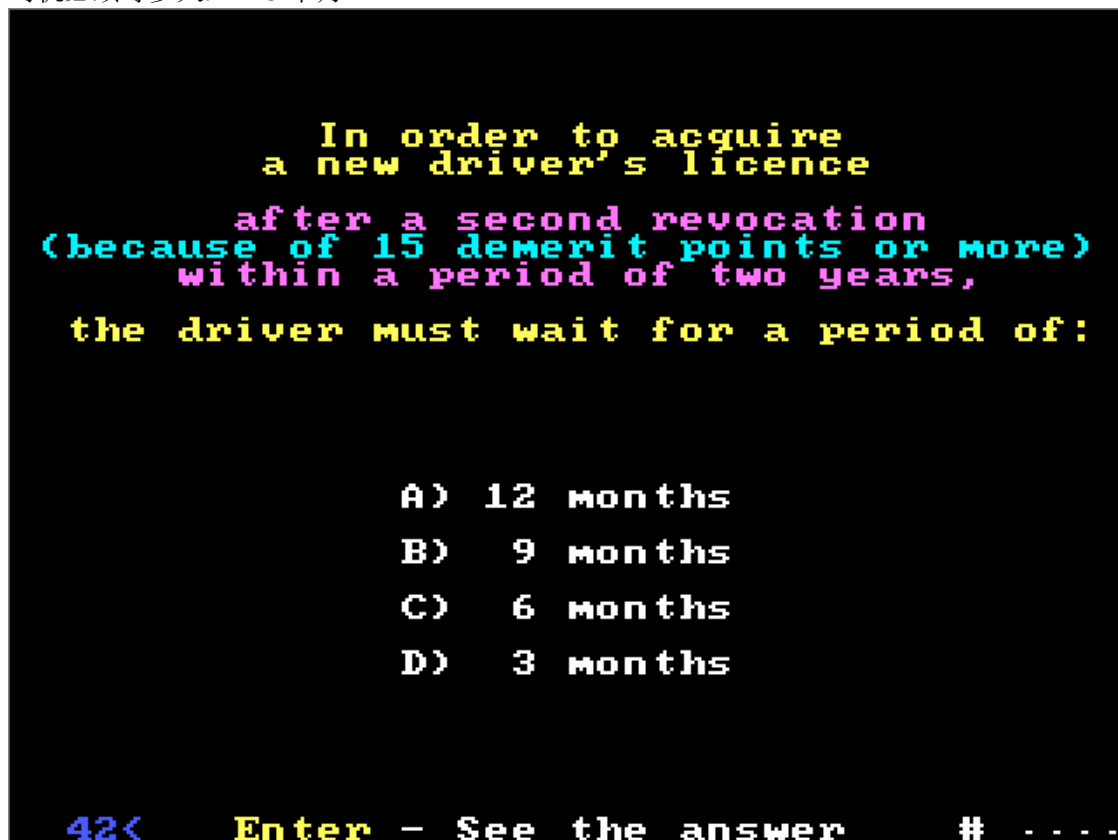
- A) Every second birthday, calculated from your date of birth
- B) On the last day of the month depending on the initial of your family name
- C) The end of February
- D) Every year on your birthday

40< Enter - See the answer #

.40 按照公路安全法规,你何时必须更新你的驾照 A 从你的生日计算,每到第二个生日时



.41 公路安全法规规定当档案累计记过 15 分或以上时，驾照会被撤回，在首次驾照被撤后为了得到新驾照，司机必须等多久。 D 3 个月



.42 在两年内的第二次驾照被撤回后(因为记过 15 分或更多)，为了获得新的驾照，司机必须等多久 C 6 个月

Each time the
«Société De L'Assurance Automobile
Du Québec»
revokes a driver's licence
because of the accumulation of points
(15 demerit points or more) ...

- A) all demerit points are written off the driver's record
- B) a maximum of 12 points are written off the driver's record
- C) demerit points exceeding 15 remain on the driver's record
- D) all demerit points from the latest infraction remain on the driver's record

43< Enter - See the answer #

.43 每次由于累计记过 15 分或更多, 魁省汽车安全委员会撤回司机的驾照后, C 超过 15 分的记过分保留在司机的记录上

When are demerit points
written off a driver's record?

- A) 2 years after the date of conviction or payment of the fine
- B) Upon renewal of the driver's licence
- C) All points are written off every second year
- D) At the end of every year

44< Enter - See the answer #

.44 何时记过分可以从司机的记录中消除 A 从定罪或付罚金之日起 2 年

After a revocation
for your first accumulation
of 15 demerit points,
can you obtain a restricted licence
in order to drive for
the purpose of earning your
livelihood?

- A) No restricted licence is possible
- B) Yes, for the full period of the revocation
- C) No, except for a revocation because of impaired driving
- D) Yes, for a 3 month period during working hours only

45< Enter - See the answer #

.45 在你的累积记过超过 15 分而被撤回驾照后, 为了维持生计你可否申请一个受限的驾照 D 可以, 有效期 3 个月, 只能在工作时间

Can you obtain a restricted licence
to drive for
the purpose of earning your livelihood
after a second revocation within
a period of two years?

- A) No, a restricted licence will not be issued
- B) Yes, for the full period of the revocation
- C) No, except for a revocation because of impaired driving
- D) Yes, for a 3 month period during working hours only

46< Enter - See the answer #

.46 在 2 年内的第二次驾照被撤回后, 为了维持生计你可否申请一个受限的驾照 A. 不可以发给你受限驾照.

Which of the following violations
may lead to the
revocation of your driver's licence?

- A) Failure to stop at
a stop sign
- B) Failure to stop at
a red traffic light
- C) Racing for a wager
or bet
- D) Hit and run

47< Enter - See the answer #

.47 违反以下哪一条会导致你的驾照被撤回 D 开车肇事后逃跑

You are driving on a public road.
Are you permitted
to drink alcoholic beverages?

- A) No, unless another driver can
replace you
- B) Yes, if you are very close
to your destination or if you
are parked on the shoulder
- C) No, this is always illegal
- D) Yes, as long as your BAC
(blood alcohol concentration)
will not exceed 0,08

48< Enter - See the answer #

.48 当你正行驶在公路上时, 允许你喝酒精饮料吗 C 不行,这是违法的

What is
the legal B.A.C. limit
(blood alcohol concentration)
according to the Criminal Code
above which it is forbidden
to drive a vehicle?

- A) 0,08
- B) 0,8
- C) 0,008
- D) 0,88

49< Enter - See the answer #

.49 按照刑法条例, 合法的血液酒精浓度是多少, 即多大浓度下禁止驾车 A 0.08

It is always illegal to drive:

- A) if you are overwhelmed with fatigue
- B) for more than 9 consecutive hours without any rest
- C) when your BAC (blood alcohol concentration) exceeds 0,08
- D) if you have not taken a defensive driving course

50< Enter - See the answer #

.50 驾车时, 以下哪条总是非法的 C 当你的 BAC(血液酒精浓度)超过 0.08

Who is permitted to consume
alcoholic beverages
in a motorized vehicle?

- A) Front seat passengers
- B) Rear seat passengers who
are old enough to legally
drink alcoholic beverages
- C) No one
- D) Anyone in the vehicle,
provided the vehicle is
parked near the sidewalk

51< Enter - See the answer #

.51 在机动车内，谁可以饮用酒精饮料 C 没有人可以

What penalty is prescribed by
the Highway Safety Code
as a result of a first conviction
for Driving While Impaired?

- A) A fine and demerit points
- B) A severe warning from the
«Société de l'Assurance
Automobile du Québec»
- C) A revocation of the driver's
licence for one year
- D) A revocation of the driver's
licence for 3 months

52< Enter - See the answer #

.52 按照公路安全法规，你一次定罪为受损伤时驾车时，会受何处罚? C 撤回驾照一年

A police officer requests
that you submit
to a breathalyzer test.
If you have a driver's licence,
what penalty is prescribed by
the Highway Safety Code
if you refuse to take the test?

- A) Your licence will be suspended
- B) A severe warning
- C) You will be required to take
the test
- D) You will be charged with
Driving While Impaired

53< Enter - See the answer #

.53 警察要求你接受酒精浓度测试时，如果你拒绝测试，按照公路安全法规规定，有驾照的司机将受何种处罚 D 你将被指控为受损伤时驾车

Any driver,
stopped by a police officer
with a blood alcohol concentration
over 0.08 mg %,
will have their licence
suspended on-the-spot
for a period of:

- A) 3 months for a first offence
- B) 5 days for a first offence
- C) 15 days for a first offence
- D) 30 days for a first offence

54< Enter - See the answer #

.54 任何司机，被警察测试血液酒精浓度超过 0.08mg%，其执照将会被当场暂停， 维期 C 第一次违反，
15 天

Any driver,
who is found to have
a blood alcohol concentration
over 0.08 mg %,
will have their licence
suspended on-the-spot
for a period of:

- A) 3 months for a repeat offence
- B) 5 days for a repeat offence
- C) 15 days for a repeat offence
- D) 30 days for a repeat offence

55< Enter - See the answer #

.55 任何司机，被警察测试血液酒精浓度超过 0.08mg%，其执照将会被当场暂停， 为期：C 再次违反，30 天

Can an offender
convicted of Driving While Impaired
(alcohol)
obtain a restricted licence?

- A) No, never, under any conditions
- B) Yes, after the Criminal Code prohibition from driving is ended on condition that the vehicle is equipped with an approved ignition interlock device
- C) Yes, after the Criminal Code prohibition from driving is ended and the offender has completed the Alcotrein driver education program
- D) Yes, after the person passes an assessment conducted by a duly authorized (alcoholic/drug addict) rehabilitator

56< Enter - See the answer #

.56 一个受到受(酒精)损伤时驾车处罚的人是否可以得到一个受限驾照？B 可以，在刑法规定禁止驾车的时期期满后并且车上装有获批的点火联锁装置

To obtain a restricted licence
after a conviction for
Driving While Impaired
(alcohol):

- A) the period of driving prohibition under the Criminal Code must have ended and the offender's licence must not be subject to any other penalty
- B) the offender's vehicle must have an approved ignition interlock device installed
- C) the offender must apply and pay the required fees for a restricted licence at a SAAQ service center
- D) all of these

57< Enter - See the answer #

.57 在被指控受(酒精)损伤时驾车后, 为了得到一个受限的驾照 (D)

- A 刑法规定的禁止驾车期期满, 并且不受其他的处罚
- B 受处罚者必须安装一个获批的点火联锁装置
- C 受处罚者必须到 SAAQ 服务中心申请并交受限驾照的申请费
- D 以上所有

Can an offender
convicted of Driving While Impaired
by drugs or medication
obtain a restricted licence?

- A) No, never, under any conditions
- B) Yes, after the Criminal Code prohibition from driving is ended on condition that the vehicle is equipped with an approved ignition interlock device
- C) Yes, after the Criminal Code prohibition from driving is ended and the offender has completed the Alcotrein driver education program
- D) Yes, after the person passes an assessment conducted by a duly authorized (alcoholic/drug addict) rehabilitator

58< Enter - See the answer #

.58 在被指控受到药物损伤时驾车后, 能否得到一个受限的驾照 A 在任何情况下都不可以

At the end of the period of revocation
imposed by the Highway Safety Code
for a first conviction
of Driving While Impaired,
before going to a SAAQ service center
to obtain a new licence,
the offender must:

- A) at his/her expense, undergo an assessment by a duly authorized rehabilitator (drugs/alcohol)
- B) have an ignition interlock device installed on his/her vehicle
- C) at his/her expense, take an approved Alcofrein driver education program
- D) all of these

59< Enter - See the answer # - - - -

.59 在第一次被指控受损伤时驾车后,按照公路安全法规驾照撤回期满, 在去 SAAQ 服务中心获得一个新的驾照之前, 受指控者必须 C 自费接受一个获得批准的司机教育课程

At the end of the period of revocation
imposed by the Highway Safety Code
for a conviction of
Driving While Impaired,
before going to a SAAQ service center
to obtain a new licence,
the repeat offender must:

- A) at his/her expense, undergo an assessment by a duly authorized rehabilitator (drugs/alcohol)
- B) have an ignition interlock device installed on his/her vehicle
- C) at his/her expense, take an approved Alcofrein driver education program
- D) all of these

60< Enter - See the answer # - - - -

.60 在再次被指控受损伤时驾车后,按照公路安全法规驾照撤回期满, 在去 SAAQ 服务中心获得一个新的驾照之前, 受指控者必须 A 自费接受一个获准的合适的康复师(药物/酒精)的评价

A driver,
whose licence is suspended or revoked,
is stopped by a peace officer.

What will the penalty be?

- A) The vehicle will be seized
for a 30 day period
- B) The vehicle will be towed
and impounded at the
owner's expense
- C) A stiff fine for the
driver
- D) All of these

61< Enter - See the answer #

61 如果一个司机的驾照被暂停或撤回, 被治安官截住时会受到何种处罚 (D)

- A 车被没收 30 天
- B 车的拖走和扣押要车主自费
- C 对司机处以高额罚金
- D 以上所有

A person,
who drives without holding a licence or
the proper class for the vehicle,
is stopped by a peace officer.

What will the penalty be?

- A) The vehicle will be seized
for a 30 day period
- B) The vehicle will be towed
and impounded at the
owner's expense
- C) A ticket (\$) for the driver
- D) All of these

62< Enter - See the answer #

62 一个无照驾车的司机或者所驾车不是正确的车类, 如果被治安官截住, 将受到何种处罚

- A 车被扣 30 天
- B 车被拖走和被扣押的费用车主自负
- C 给司机一个罚款通知单
- D 以上所有

Before lending or renting
your vehicle to another person,
you should:

- A) ask the person if they hold a valid licence for the class of vehicle
- B) call 1 900 565-1212 and check the validity of the driver's licence with the SAAQ
- C) call your local police station and check the driver's dossier
- D) all of these

63< Enter - See the answer # - - - -

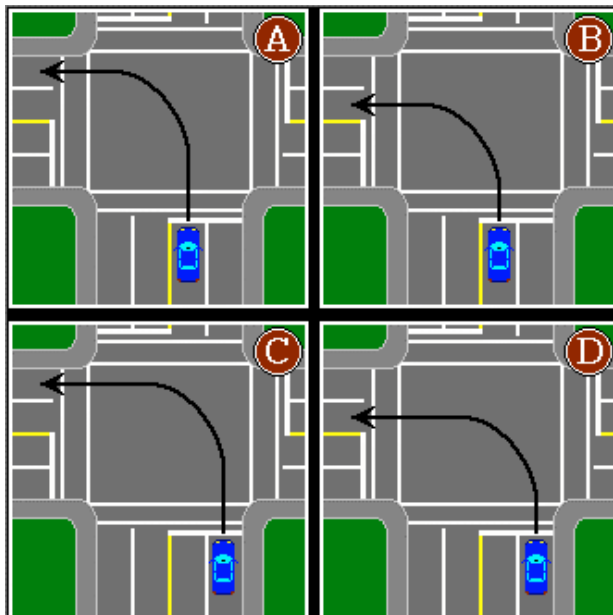
.63 在将你的车借给或租给别人时，你应该 B 打电话给 1 900 565-1212，向 SAAQ 核实司机驾照的有效性

In which
of the following circumstances,
will you be charged
with driving while impaired?

- A) If you neglect to take medication prescribed by a doctor
- B) If you are involved in a collision resulting in loss of life
- C) When you drive after drinking an alcoholic beverage
- D) When you drive after taking illegal drugs

64< Enter - See the answer # - - - -

.64 在下列何种情况下，你会被指控为受损伤时驾驶 D 当你服用非法药物后驾车

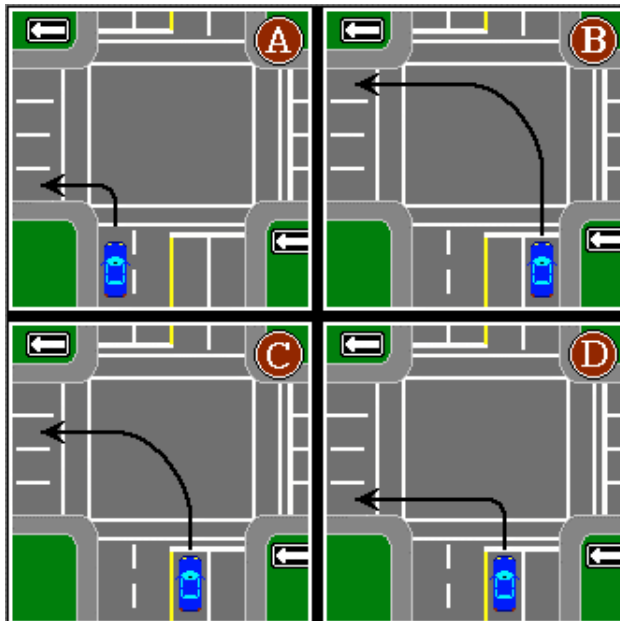


Which diagram
illustrates
the correct
trajectory
for a left turn?

- A) Diagram A
- B) Diagram B
- C) Diagram C
- D) Diagram D

65< Enter - See the answer #

.65 哪一个左转的正确轨道 B 图 B

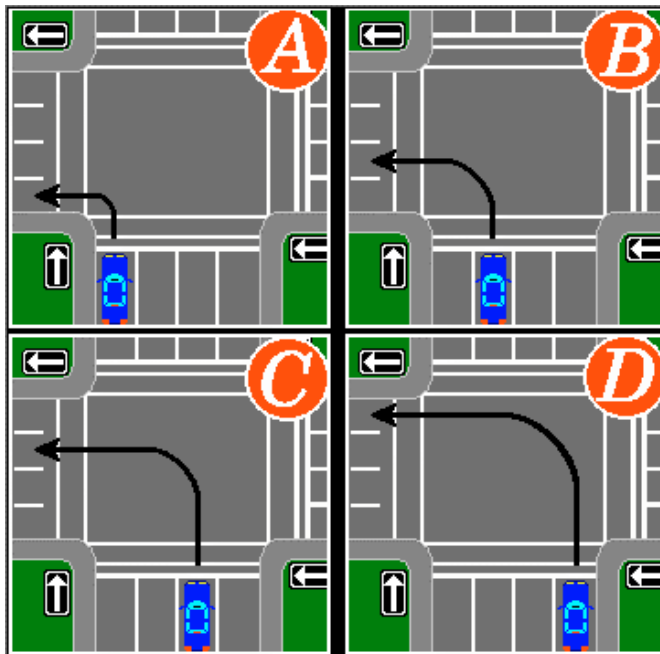


Which diagram
illustrates
the correct
trajectory
for a left turn?

- A) Diagram A
- B) Diagram B
- C) Diagram C
- D) Diagram D

66< Enter - See the answer #

.66 哪一个左转的正确轨道 D 图 D

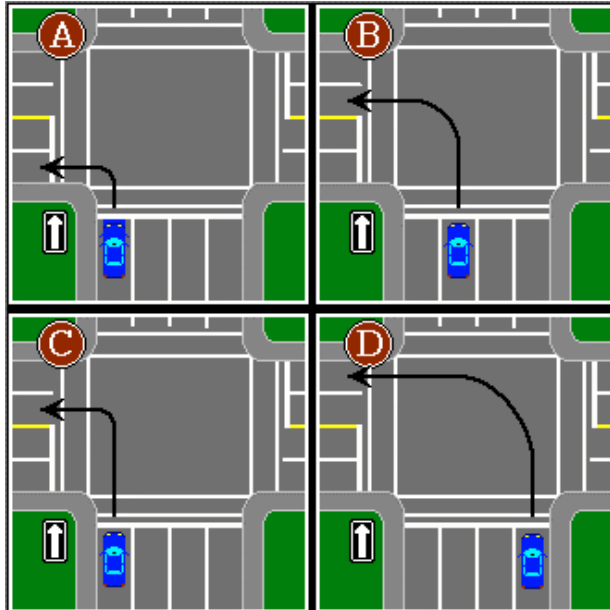


Which diagram
illustrates
the correct
trajectory
for a left turn?

- A) Diagram A
- B) Diagram B
- C) Diagram C
- D) Diagram D

67< Enter - See the answer #

.67 哪一个是左转的正确轨道 A 图 A

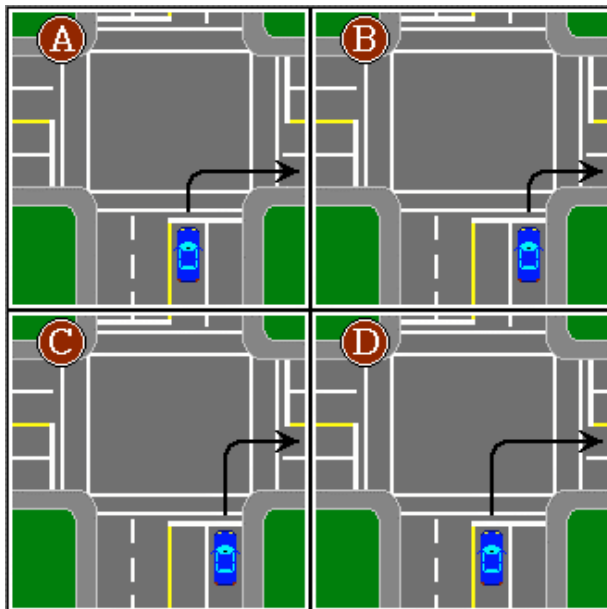


Which diagram
illustrates
the correct
trajectory
for a left turn?

- A) Diagram A
- B) Diagram B
- C) Diagram C
- D) Diagram D

68< Enter - See the answer #

.68 哪一个是左转的正确轨道 C 图 C



Which diagram
illustrates
the correct
trajectory
for a right turn?

- A) Diagram A
- B) Diagram B
- C) Diagram C
- D) Diagram D

69< Enter - See the answer #

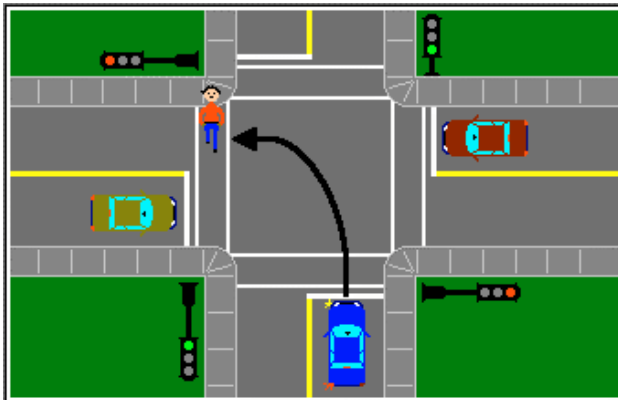
.69 哪一个是右转的正确轨道 B 图 B

You are very close to an intersection.
You notice
that you are in the wrong lane to turn.
You should:

- A) signal the driver beside you so that he/she will allow you to turn in front of him/her
- B) wait until no vehicles prevent you from turning safely
- C) drive on and place your vehicle in the correct lane to turn at the next intersection
- D) stop, evaluate the situation, then turn only if there is no danger

70< Enter - See the answer #

.70 你离交叉路口很近，发现你在转弯的错的车道上，你应该 C 继续行驶到正确的车道上，在下一个路口转弯

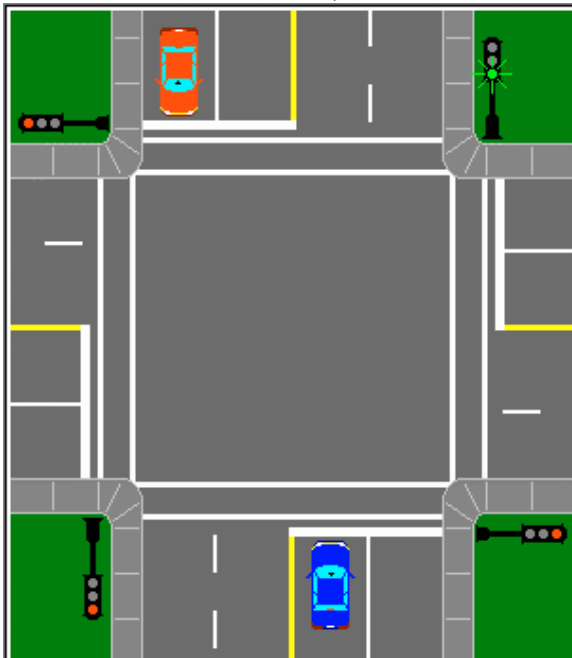


Approaching an intersection,
as illustrated,
you intend to turn left.
You should:

- A) yield the right-of-way to the pedestrian before turning
- B) tap the horn and then proceed; the pedestrian will yield
- C) slow down and continue turning
- D) accelerate to pass in front of the pedestrian

71< Enter - See the answer #

.71 在接近一个交叉路口时，如图所示你要左转，你应该 A 在转弯之前，将通向权让给行人



Facing a flashing green light,
as illustrated,
the driver may proceed ...

- A) in any direction
- B) straight ahead or turn left
- C) straight ahead only
- D) to turn left only

72< Enter - See the answer #

.72 面对如图所示的闪烁的绿灯，司机应如何前行 B 直行或左转



Facing a flashing green light,
as illustrated,
the driver may proceed ...

- A) in any direction
- B) straight ahead only
- C) straight ahead or turn right
- D) to turn right only

73< Enter - See the answer #

73 面对如图所示的闪烁的绿灯，司机应如何前行 C 直行或右转

All occupants
of a motor vehicle in motion
must wear
a properly fastened seat belt:

- A) except in the city
- B) unless the safety belt mechanism is defective
- C) unless a medical exemption has been granted by the «Société de l'Assurance Automobile du Québec»
- D) unless excused from doing so by the driver

74< Enter - See the answer #

74 所有的机动车辆的乘客必须正确佩戴安全带，C 除非由于身体原因获得魁省汽车安全委员会的豁免



Is it mandatory
to wear
a safety belt
while riding in
an automobile?

- A) Only when a road sign makes it mandatory
- B) When driving in the city
- C) Only for the front seat passengers
- D) All vehicle occupants must always wear seat belts

75< Enter - See the answer #

.75 在驾车时, 戴安全带是否是必需的? D 所有车辆的乘客必须一直佩戴安全带

Passenger vehicles
may not drive on the shoulder
of a public highway:

- A) except when passing another vehicle that is turning left
- B) unless the shoulder is paved
- C) unless the speed limit is less than 50 km/h
- D) except in cases of necessity

76< Enter - See the answer #

.76 载客汽车不能在公路的路肩上行驶 D 除非在必要的情况下

Other than in cases of necessity,
who is permitted to use
the shoulder of a public highway?

- A) Slow-moving vehicles
- B) Pedestrians and bicycles
- C) Vehicles towing a trailer
- D) Motorcycles

77< Enter - See the answer #

.77 如果不是在必要的情况下, 谁可以使用公路的路肩? B 行人和骑自行车者

Is it permitted to
encroach on the shoulder
of a public highway
in order to perform a legal pass
on the right?

- A) No, except on an expressway
- B) Yes, if the vehicle you are
passing is stopped
- C) Yes, if the shoulder is paved
- D) No, it's illegal and dangerous

78< Enter - See the answer #

.78 为了在右边实行合法的超越, 是否可以占用公路的路肩 D 不可以, 这是非法的和危险的

While driving on an expressway,
the Highway Safety Code
always prohibits:

- A) stopping without a valid reason
- B) changing lanes into the passing lane
- C) braking while driving on the acceleration lane
- D) slowing down

79< Enter - See the answer # - - - -

.79 当行驶在高速公路上时，公路安全法规总是禁止 A 无正当理由的停车

Unless a signal indicates otherwise,
backing
is always prohibited:

- A) on expressways (including entrances and exits)
- B) within 30 meters of an intersection
- C) on any two-way roadway
- D) in order to enter private property

80< Enter - See the answer # - - - -

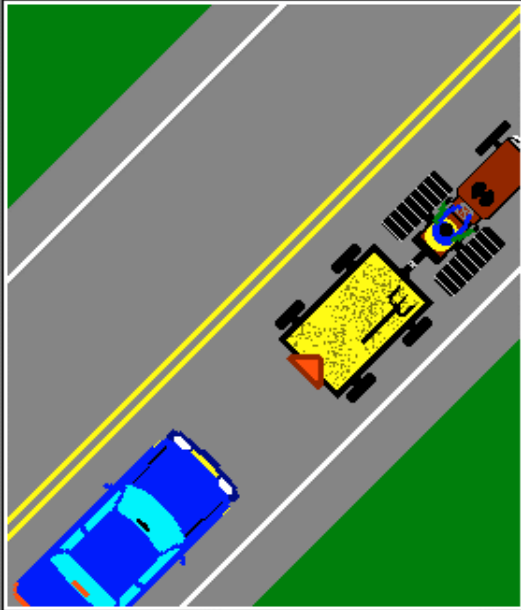
.80 在何处除非信号指示，否则倒车始终被禁止 A 在高速路上(包括进口和出口)

What is the proper way to pass
a motorcycle?

- A) Pass within the same lane,
if this can be done safely
- B) Change lane, as if you were
passing an automobile
- C) Yield half a lane to the
motorcyclist since the
motorcycle is so small
- D) Leave at least one meter of
space between the vehicles

81< Enter - See the answer #

.81 如何正确的越过一个摩托车 B 向你超越一辆汽车一样换车道



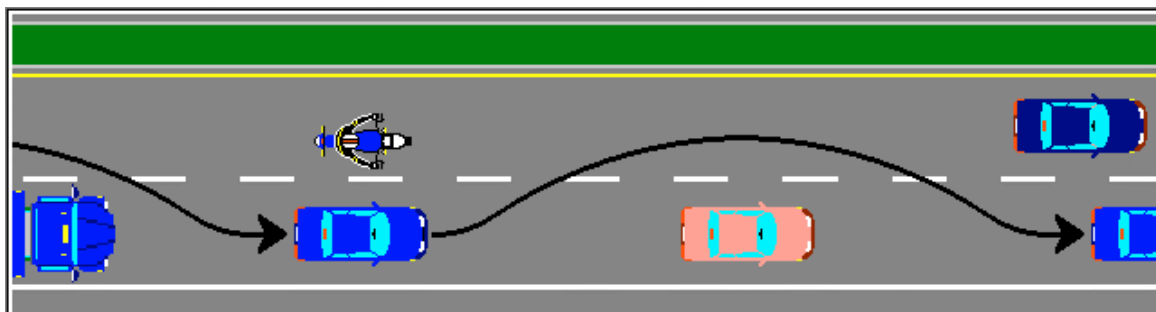
Which of the following
statements
is true?

- A) Passing this
vehicle is
forbidden
- B) This vehicle must
stop at railway
level crossings
- C) It is permitted
to pass this
vehicle if the
maneuver can
be done safely
- D) Passing this
vehicle on the
right side is
allowed, if the
maneuver is done
carefully

82< Enter - See the answer #

.82 以下陈述哪个是真的 (C)

A 禁止超越这辆车 B 这辆车必须在铁路平面交叉路口停下来 C 在安全操作的前提下可以超越该车
D 在操作安全的前提下, 可以从右边超越这辆车



Does the Highway Safety Code allow
weaving from lane to lane
in order to pass several vehicles?

- A) Yes, in the case of emergency vehicles
- B) Yes, when driving on an expressway
- C) Yes, if traffic slows down rapidly
- D) Yes, if the maneuver may be done safely

83< Enter - See the answer #

.83 公路安全法规是否允许为了超越几辆车而在车道间迂回前进 A 可以, 在紧急车辆的情况下




You must
move towards
the right
and yield
for an
ambulance:

- A) when the lights are flashing and the siren is operating
- B) at all times, even if the lights and the siren are not operating
- C) only if the ambulance is preceded by a police vehicle
- D) only if the ambulance is crossing an intersection controlled by traffic lights

84< Enter - See the answer #

.84 你必须驶向右边让路给救护车 A 当灯闪烁并且警报器响着的时候



When another vehicle
is passing you
you must:

- A) accelerate
- B) refrain from increasing speed
- C) slow down
- D) signal that the way is clear

85< Enter - See the answer #

.85 当有其他车辆正超越你是, 你必须 B 避免加速

Is it permitted
to drive over the speed limit
in order to complete a passing maneuver?

- A) No, never
- B) Yes, in order to pass safely
- C) Yes, if you pass several vehicles
- D) No, unless another vehicle signals from the rear that you are blocking the passing lane

86< Enter - See the answer #

.86 为了完成超越是否可以超过限速行驶 A 不, 永远不可以

According to the Highway Code,
the driver
who intends to pass another vehicle,
must signal his/her intention:

- A) with the turn signals
- B) by flashing the high beams
- C) by flashing the high beams
and tapping the horn
- D) only if another vehicle is
following his/her vehicle

87< Enter - See the answer #

.87 按照公路安全法规, 预超越其他车的司机必须用何信号显示他的意图 A 用转弯信号灯

At night,
if you want to pass
the vehicle ahead of yours,
how should you signal your intentions?

- A) Use the turn signals and
the horn
- B) Flash the high beams and
use the turn signals if
necessary
- C) Flash the high beams and
above all use the horn
- D) Use the turn signals and
as well, flash the high
beams

88< Enter - See the answer #

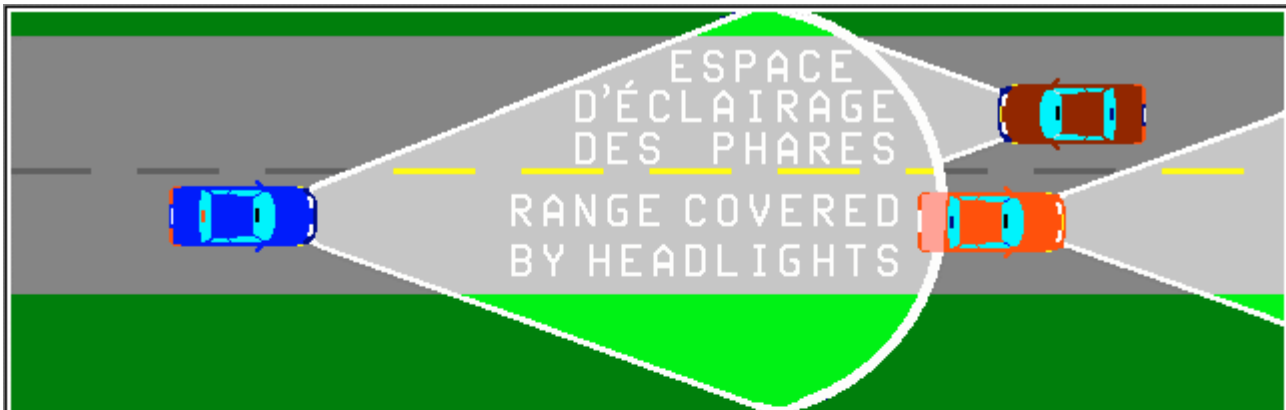
.88 在夜间, 如果你想超越前面的车, 你应该如何用信号表明意图 D 用转弯信号灯, 同时也要闪烁远光灯

You must never pass:

- A) when a double center line has the broken line nearer to your vehicle
- B) if the driver behind you has signalled his/her intention to pass or has begun to pass
- C) as you near the bottom of a steep downhill slope
- D) on the right, even when passing a vehicle about to make a left turn

89< Enter - See the answer #

89 在何情况下你永远不能超越 B 如果你后面的司机已经打信号表明要超越或已开始超越



At night,
when you meet or follow another vehicle
at what distance must
you dim the headlights to low beams?

- A) 5 meters
- B) 50 meters
- C) 150 meters
- D) 250 meters

90< Enter - See the answer #


90 在夜间, 当你遇到或跟着其他车, 在何距离时你必须调暗你的远光灯至短焦距光 C 150 米

At night,
you must use the low beams:

- A) when you meet or follow another vehicle closely
- B) when approaching an intersection
- C) when approaching a railway level crossing
- D) while driving alone, on a rural road

91< Enter - See the answer #

.91 在夜间, 何时你必须用短焦距光 A 当你与迎面车或跟随的车距离较近时



Which vehicles must always stop
at railway level crossings?

- A) Farm tractors, motorcycles, buses, snowmobiles and trucks
- B) Buses, minibuses, and all vehicles transporting dangerous materials
- C) All types of vehicles
- D) Farm tractors, buses and motorcycles

92< Enter - See the answer #

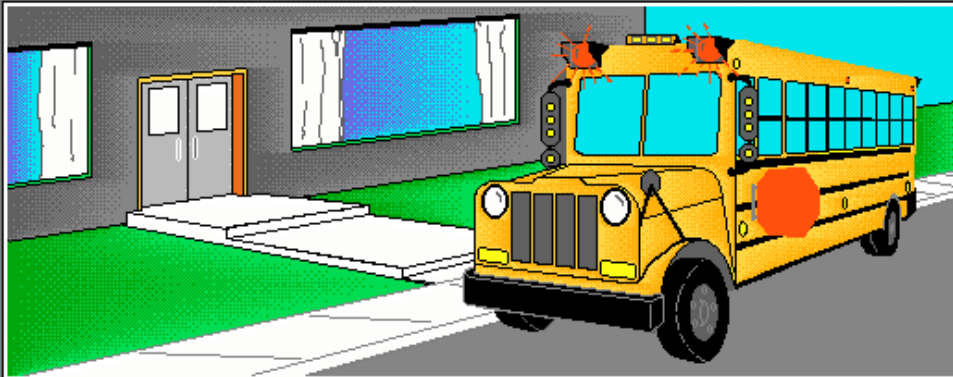
.92 哪种车在铁路平面交叉路口总是必须停车 B 公共汽车, 小型公共汽车, 及一切载有危险物品的车辆

At what distance
from a railway crossing
must a driver stop his/her vehicle
when a signal indicates
that a train is approaching?

- A) 5 meters
- B) 7 meters
- C) 3 meters
- D) 1 meter

93< Enter - See the answer # - - - -

.93 当信号显示一辆火车正在接近时, 司机必须在离铁路交叉口多远的地方停车 A 5 米




Approaching a stopped school bus
with its red signal lights flashing,
drivers are required to stop
at least:

- A) 3 meters from the school bus
- B) 5 meters from the school bus
- C) 10 meters from the school bus
- D) 20 meters from the school bus

94< Enter - See the answer # - - - -

.94 当司机正接近一辆停着的校车,并且其红色信号灯正在闪烁, 司机必须在至少多远的地方停车 B 离校车 5 米

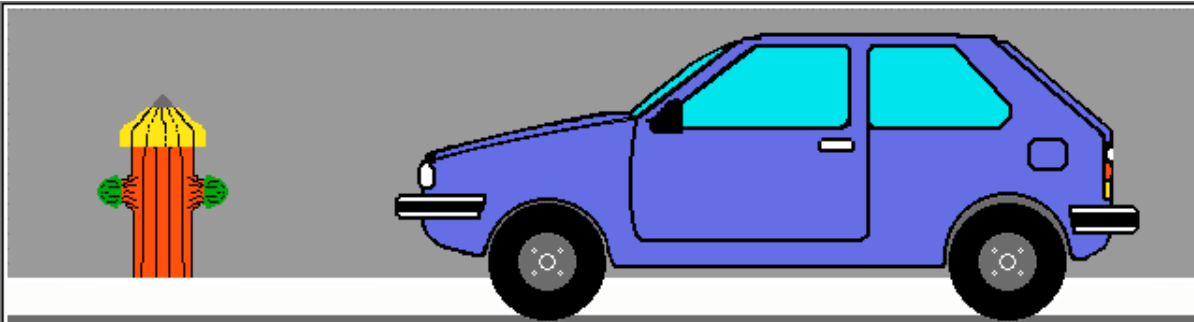


When a school bus stops
with its red signal
lights flashing,
the law requires
drivers to:

- A) stop until the bus proceeds or the signal lights are deactivated
- B) to do as they please as long as they tap the horn
- C) wait for approaching vehicles to pass
- D) slow down and then be extra careful while passing

95< Enter - See the answer #

.95 当校车停车并且红色信号闪烁, 法律要求司机必须 A 停车,直到校车前行或其信号灯不亮




When parking near a fire hydrant,
you must leave a minimum of:

- A) 3 meters
- B) 5 meters
- C) 10 meters
- D) 20 meters

96< Enter - See the answer #

.96 当你停放车的地点靠近一个消防栓, 你至少要离它多远 B 5 米

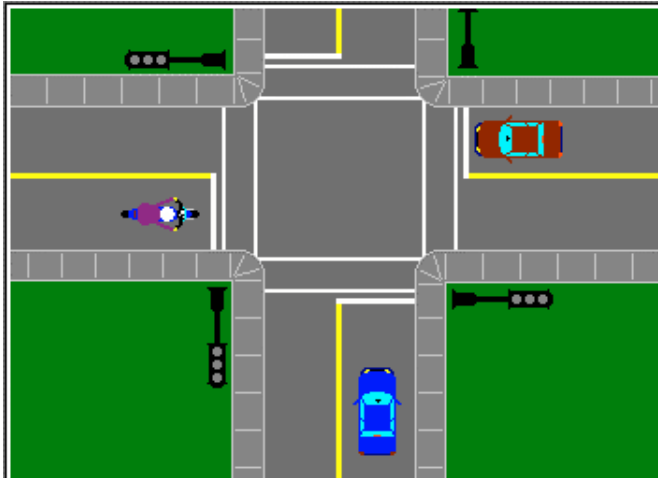


Approaching a stop sign,
you must:

- A) slow down, then proceed if the way is clear
- B) stop and then proceed when the way is clear
- C) stop and then proceed
- D) yield the right-of-way

97< Enter - See the answer #

.97 当你接近一个停车牌，你必须 B 停车，然后在路上没车的时候前行

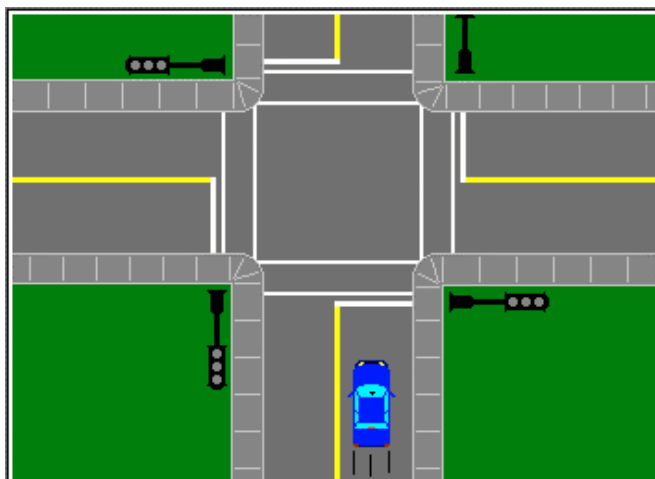


You are
approaching
an intersection,
the traffic
lights
are out of order.
You must:

- A) stop and then proceed when the way is clear
- B) proceed as you would at a yield sign
- C) slow down and proceed
- D) accelerate

98< Enter - See the answer #

.98 你正接近一个交叉路口，交通灯不能正常工作，你必须 A 停车，然后在路上没车的时候前行



You are
approaching
an intersection.
The traffic
lights
are out of order,
You must
stop and yield
the right-of-way
to:

- A) vehicles on your left
- B) drivers signalling a right turn
- C) drivers signalling a left turn
- D) vehicles on your right or any vehicle which reached the intersection before you

99< Enter - See the answer #

.99 你正接近一个交叉路口，交通灯不能正常工作，你必须停车，并出让通行权给 D 在你右边的车或任何比你先到路口的车

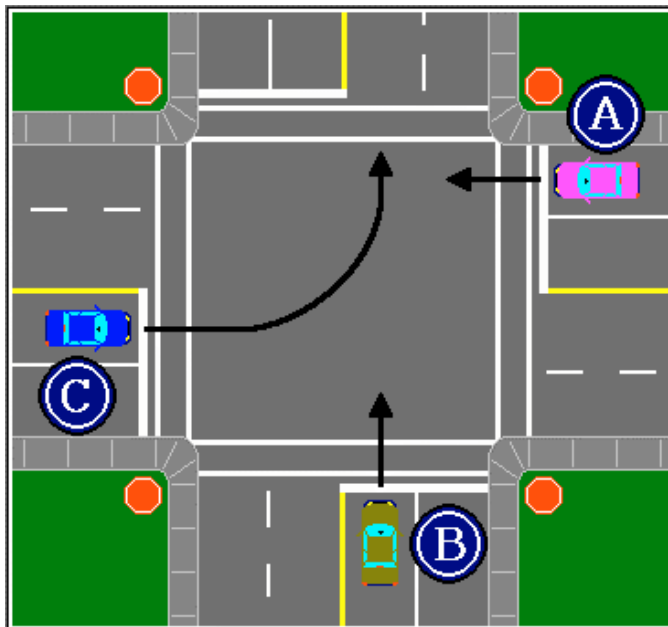


Who
should be given
the right-of-way
in this
illustration?

- A) Vehicle A
- B) Vehicle B
- C) Vehicle C
- D) Vehicles A and B

100< Enter - See the answer #

.100 在此图中，谁应该获得通行权 B 车 B

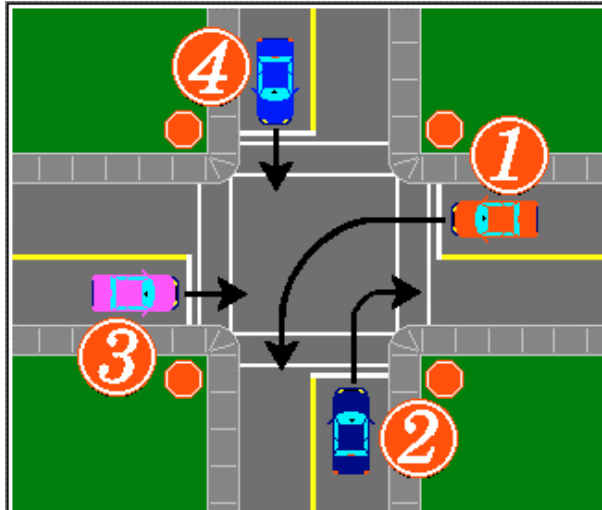


Who
should be
given the
right-of-way
in this
illustration?

- A) Vehicle B
- B) Vehicle C
- C) Vehicle A
- D) Vehicles A and B

101< Enter - See the answer #

.101 在此图中，谁应该获得通行权 C 车 A

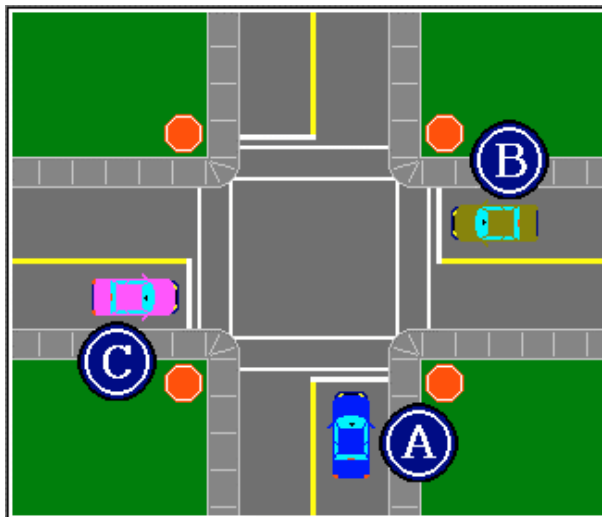


Which vehicle
should be given
the right-of-way?

- A) Vehicle 1
- B) Vehicle 2
- C) Vehicle 3
- D) Vehicle 4

102< Enter - See the answer #

.102 在此图中，谁应该获得通行权 B 车 2



The 3 vehicles arrived simultaneously.

They intend to proceed straight.

Which one should be given the right-of-way?

- A) Vehicle A
- B) Vehicle B
- C) Vehicle C
- D) Vehicles A and B

103< Enter - See the answer #

.103 这 3 辆车同时到达，他们都预直行，谁应该获得通行权 B 车 B

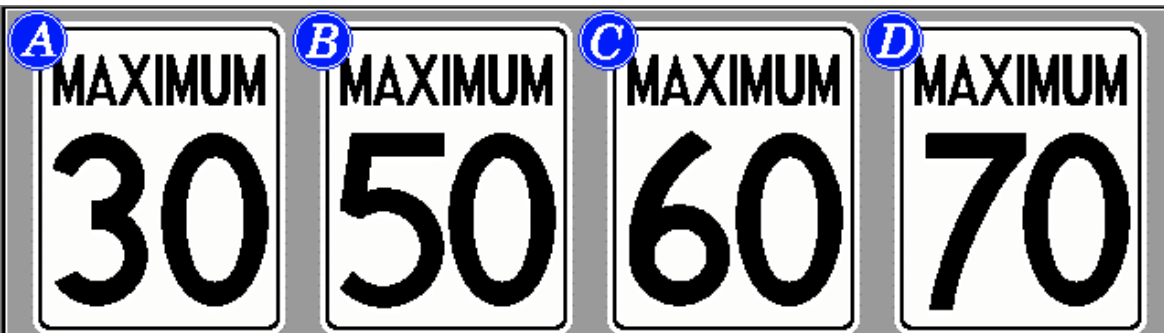


Unless posted otherwise,
the speed limit
in cities, towns, or villages is:

- A) 30 km/h
- B) 40 km/h
- C) 50 km/h
- D) 60 km/h

104< Enter - See the answer #

.104 除非是贴在其他地方，在城市,城镇，乡村的速度限制是 C 50 km/h



Unless posted otherwise,
the maximum speed permitted
in a school zone is:

- A) 30 km/h
- B) 50 km/h
- C) 60 km/h
- D) 70 km/h

105< Enter - See the answer #

.105 除非是贴在其他地方, 在学校区域的最大速度限制是 B 50 km/h




What is
the maximum speed
permitted
on expressway 20?

- A) 80 km/h
- B) 60 km/h
- C) 120 km/h
- D) 100 km/h

106< Enter - See the answer #

.106 在 20 号高速公路最大允许车速是 D 100 km/h

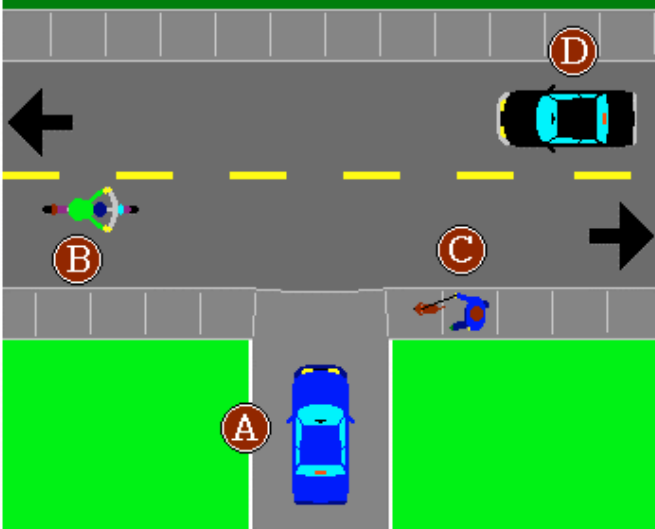


When favourable conditions prevail,
the authorized speed limits
on Québec expressways
would be posted as illustrated in:

A) diagram A
B) diagram B
C) diagram C
D) diagram D

107< Enter - See the answer #

.107 在有利条件下，魁省认可的高速公路的速度限制如哪一个图所示 B 图 B

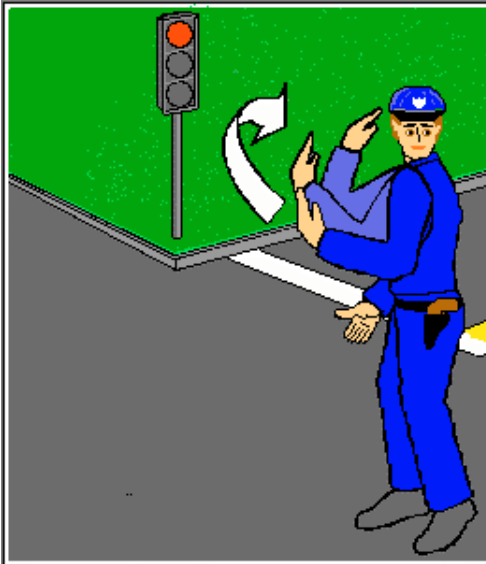


In the diagram,
the driver of
vehicle A
intends
to turn left.
Who
should be given
the
right-of-way?

A) Vehicle A
B) Pedestrian C
C) Vehicles B and D
D) Pedestrian C and
vehicles B and D

108< Enter - See the answer #

.108 在此图中，车 A 的司机预左转，谁应获得通行权 D 行人 C,车 B 和车 D



Approaching an intersection, the traffic lights are red.

A police officer motions you to proceed.

You should:

- A) stop then proceed
- B) obey the police officer

C) call his/her attention to the light

D) stop and wait for the green light

109< Enter - See the answer #

.109 当接近一个交叉路口时，交通灯为红色，警察示意你前行，你应该 B 遵照警察的示意



You are approaching a stop sign.

A police officer motions you to proceed.

You should:

A) stop then proceed

B) obey the police officer

C) call his/her attention to the stop sign

D) stop and check traffic before proceeding

110< Enter - See the answer #

.110 当接近一个停车牌时，警察示意你前行，你应该 B 遵照警察的示意



A school crossing guard signals you to stop.


If you disregard her command,

what are you liable to receive?

- A) Nothing; a crossing guard is not a police officer
- B) A written warning from the «S.A.A.Q.»
- C) The revocation of your driver's licence
- D) A fine as well as demerit points

111< Enter - See the answer #

.111 一位学校过路值班员示意你停车，如果你不遵守他的命令，你会收到 D 一张罚单和记过分



You are approaching the scene of a collision. Emergency vehicles are there already.

You should:

- A) stop your vehicle before the scene of the collision
- B) accelerate to clear the area as quickly as possible
- C) slow down and prepare to stop if necessary
- D) enquire about the seriousness of the collision

112< Enter - See the answer #

.112 你正接近一个撞车事故现场，急救车已到，你应该 C 减速并准备在必要时停车



Besides remaining at the scene and presenting the required documents, what obligation does the Highway Safety Code

impose upon a driver involved in a collision when no one is injured?

- A) Call for a police officer
- B) Notify the Société de l'assurance automobile du Québec in writing
- C) Move your vehicle (if you can) and then complete a «Constat à l'amiable» (Joint Accident Report)
- D) Move your vehicle and then file a report with the insurance company

113< Enter - See the answer #

.113 在一起没有人受伤的撞车事故中,,司机除了留在现场并出示所需文件外,按照公路安全法规还有何义务 C 移开你的车并填写" 联合事故报告"



Besides remaining at the scene, offering the required information and assisting any person in need,

what obligation does the Highway Safety Code impose upon a driver involved in a collision when someone is injured?

- A) Call for a police officer
- B) Notify the Société de l'assurance automobile du Québec in writing
- C) Move your vehicle (if you can) and then complete a «Constat à l'amiable» (Joint Accident Report)
- D) Move your vehicle and then file a report with your insurance company

114< Enter - See the answer #


.114 在一起有人受伤的撞车事故中,,司机除了留在现场,提供所需信息并协助需要帮助的人外,按照公路安全法规还有何义务 A 打电话叫警察

In Québec, the «S.A.A.Q.»
compensates:

- A) bodily injury
- B) property damage and bodily injury
- C) property damage for a minimum amount of 50 000\$
- D) bodily injury for a minimum amount of 50 000\$

115< Enter - See the answer #

.115 在魁省, SAAQ 赔偿 A 身体伤害



Which vehicles
may be
equipped with

flashing or
rotating
yellow lights?

- A) Police patrol vehicles
- B) Emergency vehicles
- C) Service and snow removal vehicles
- D) Ambulances and heavy vehicles

116< Enter - See the answer #

.116 哪些车辆会装备闪烁的或旋转的黄灯 C 服务车和铲雪车



Which vehicles
may be
equipped with
flashing or
rotating
red lights?

- A) Police patrol vehicles
- B) Emergency vehicles
- C) Service and snow removal vehicles
- D) Ambulances and heavy vehicles

117< Enter - See the answer #

.117 哪些车辆会装备闪烁的或旋转的红灯 B 急救车

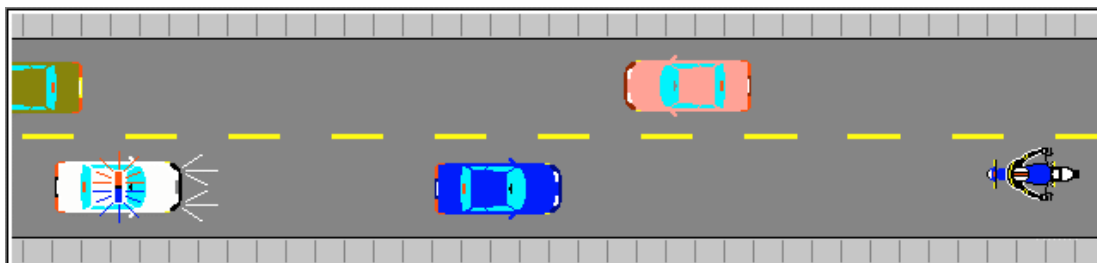


Which vehicles
may be
equipped
with flashing
or rotating
lights,
as illustrated in
the diagram?

- A) Police patrol vehicles
- B) Emergency vehicles
- C) Service and snow removal vehicles
- D) Ambulances and heavy vehicles

118< Enter - See the answer #

.118 哪些车辆会装备闪烁的或旋转的如图所示的灯 A 警察巡逻车



While driving on a two-way road,
you hear an emergency vehicle siren.

You must:

- A) slow down, move to the right curb or edge of the roadway and stop if necessary
- B) slow down to 15 km/h
- C) accelerate to clear the way
- D) proceed at the same speed

119< Enter - See the answer #

.119 当行驶在一个双向公路上时, 你听到急救车的警报, 你必须 A 减速, 行驶至公路的右侧路边并在必要时停车。

Which of the following statements
is false?

- A) All motorcyclists must wear a protective helmet
- B) The headlight must be on whenever the motorcycle is in operation
- C) Cyclists must ride in zigzag formation
- D) Cyclists must ride in the same direction as the traffic

120< Enter - See the answer #

.120 下列哪些陈述是错的 (C)

- A 所有摩托车司机必须戴保护头盔
- B 无论何时摩托车在行驶中要开前灯
- C 摩托车必须走 Z 字形
- D 摩托车必须与其他车辆通行方向相同

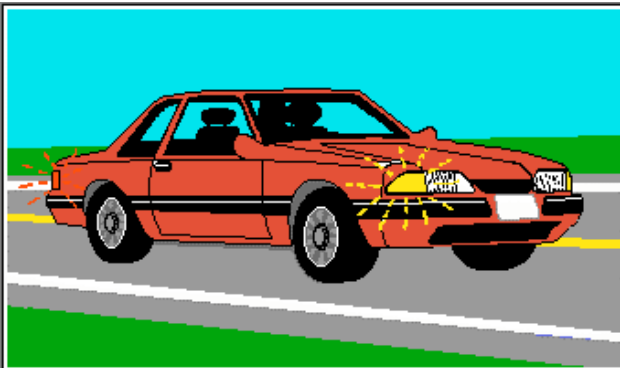
Which of the following statements
is false?

- A) Braking suddenly without good reason is prohibited
- B) Refusal to submit to a breathalyzer test leads to the revocation of the driver's permit
- C) Wearing headphones while driving is prohibited
- D) Passengers in a moving vehicle are prohibited from watching television

121< Enter - See the answer #

.121 下列哪些陈述是错的 (D)

- A 禁止无正当理由的突然刹车
- B 拒绝接受酒精浓度测试会导致司机驾照被撤回
- C 禁止在驾驶过程中带耳机
- D 在行驶的车辆中旅客禁止看电视



Using the turn
signals
before changing
lanes or turning
is:

- A) required only when other vehicles are nearby
- B) not required if you check carefully
- C) unnecessary if the maneuver is performed slowly
- D) always required by the Highway Safety Code

122< Enter - See the answer #

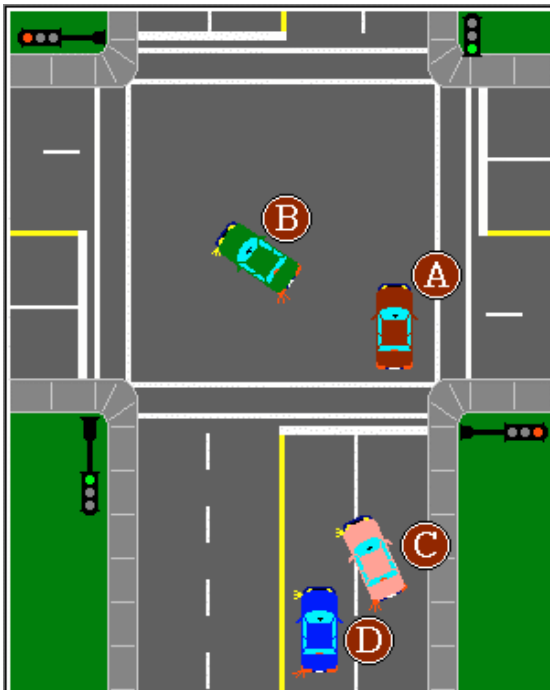
.122 在换车道或转弯前使用信号灯是 D 公路安全法规的一贯要求

Is it legal to pass
another vehicle on the right?

- A) Yes, in order to pass a slow-moving vehicle
- B) Yes, when passing a truck climbing a steep hill
- C) Never; it is illegal
- D) Yes, if passing a vehicle turning left or stopped waiting to turn left

123< Enter - See the answer #

.123 从右边超越其他车辆是合法的吗 D 在超越一辆左转的车或停车准备左转的车时是合法的.

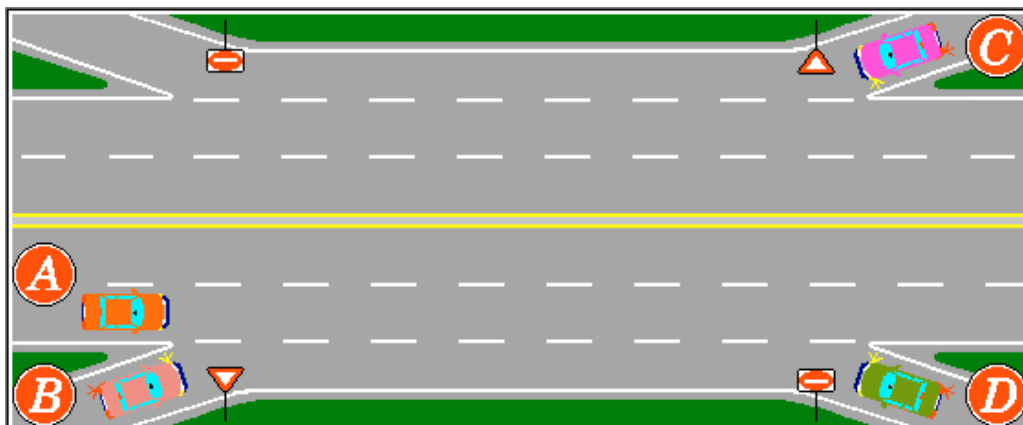


One of these
vehicles is
violating the law.
Which one?

- A) Vehicle A passing vehicle B on the right
- B) Vehicle C making a lane change
- C) Vehicle D passing vehicle C
- D) Vehicle B turning left

124< Enter - See the answer #

.124 这些车中有一辆是违法的, 是哪一辆 B 正在换车道的 C 车

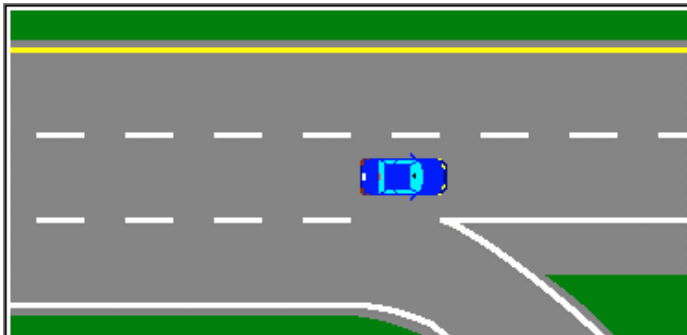


Which of these vehicles is
violating the law?

- A) Vehicle A
- B) Vehicle B
- C) Vehicle C
- D) Vehicle D

125< Enter - See the answer #

.125 这些车中哪一辆是违法的 D 车 D

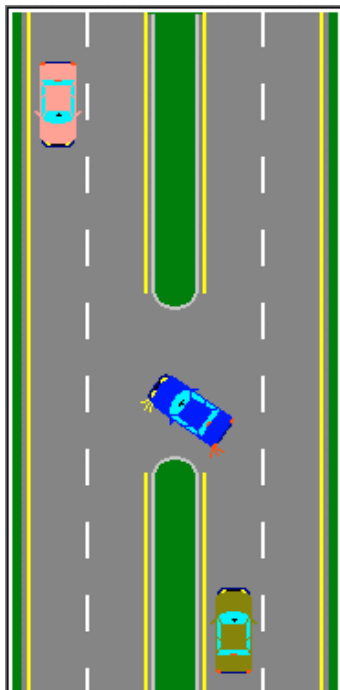


If you miss
your exit
on the
freeway
you must:

- A) stop, wait for a long gap in the traffic and then reverse
- B) drive on to the next exit
- C) make a U-turn and return to the exit via the other side of the road
- D) stop on the paved shoulder and then reverse slowly until you reach the exit

126< Enter - See the answer #

.126 如果你错过了高速公路的出口, 你必须 B 行驶到下一个出口



Is it permitted to cross a median strip separating the two sides of a roadway?

- A) Yes, at designated places after checking the maneuver is safe
- B) Only if there are two spaces wide enough for the vehicle to pass
- C) Only where there is enough space and traffic permits it
- D) At places where visibility is excellent and the maneuver may be done safely

127< Enter - See the answer #


.127 可以穿越将公路分为两边的中间带吗 A 是的,在检查该操作安全后并在指定地方

Who must pay the fees when a vehicle is impounded by a police officer for a mechanical inspection?

- A) The owner of the vehicle
- B) The driver of the vehicle if he/she is not the owner
- C) The manufacturer of the vehicle
- D) The provincial government

128< Enter - See the answer #

.128 当一辆车被警察扣押去作机械检查,谁要为此付费 A 车主

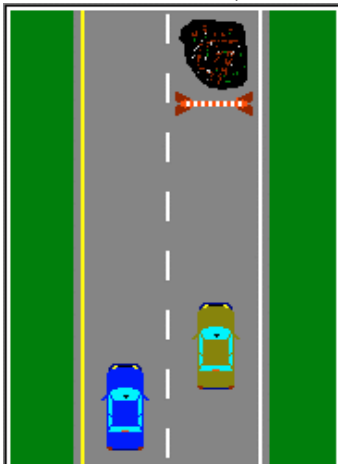


If the lane is obstructed,
who should be given the right-of-way?

- A) The first driver to signal
- B) The driver on the open lane
- C) The driver on the blocked lane
- D) The first driver to reach the open space

129< Enter - See the answer #

.129 如果车道受阻，谁应得到通行权 B 在开放车道的车辆

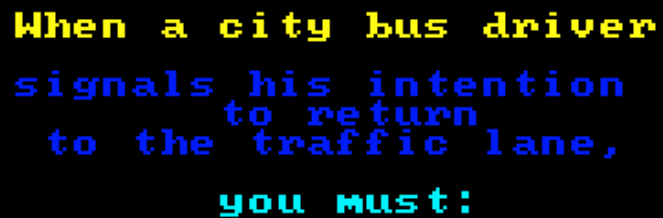


On a one-way road,
if a lane is closed,
who should be given
the right-of-way?

- A) The first driver to signal his or her intentions
- B) The driver on the closed lane
- C) The driver on the open lane
- D) The first driver to reach the open space next to the obstacle

130< Enter - See the answer #

.130 在一个单向公路上，如果一个车道封闭，谁应得到通行权 C 在开放车道的车辆



- 131< Enter - See the answer #

**On roads without sidewalks,
pedestrians should walk:**

- 132< Enter - See the answer #

62

When a car ahead has stopped to allow
a pedestrian to cross the street
at a marked crosswalk,
you must:

- A) stop behind this vehicle to
let the pedestrian cross
- B) tap the horn to tell the
driver to proceed
- C) pass this vehicle on the right
- D) pass this vehicle on the left

133< Enter - See the answer #

.133 当前面的汽车在人行横道线停车,让穿越街道的行人先过时,你必须 A 在该车的后面停车,让行人先过

As you approach a pedestrian crosswalk,
you notice that pedestrians
are already crossing the roadway.
It is forbidden to ...

- A) drive on
- B) signal the pedestrians
to continue
- C) stop within 3 meters of
the crosswalk
- D) drop passengers within 5
meters of the crosswalk

134< Enter - See the answer #

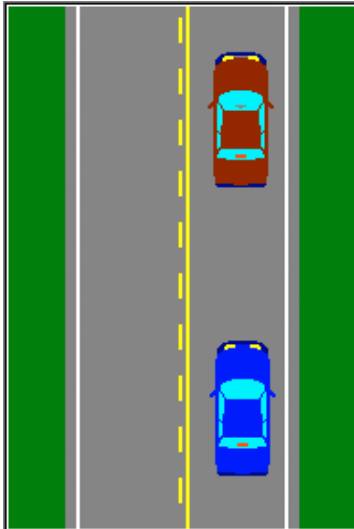
.134 当你接近一个人行横道线,你发现行人已在过马路,此时禁止 A 继续前行

At a four-way stop intersection,
the driver must stop
and yield the right-of-way to:

- A) vehicles approaching from the left
- B) vehicles on the right or vehicles already stopped
- C) any driver who signals his/her intention to turn left
- D) any driver who signals his/her intention to turn right

135< Enter - See the answer #

.135 在一个四路停牌的交叉路口, 司机必须停车并出让通行权给 B 在右边的车辆或是已停车的车辆



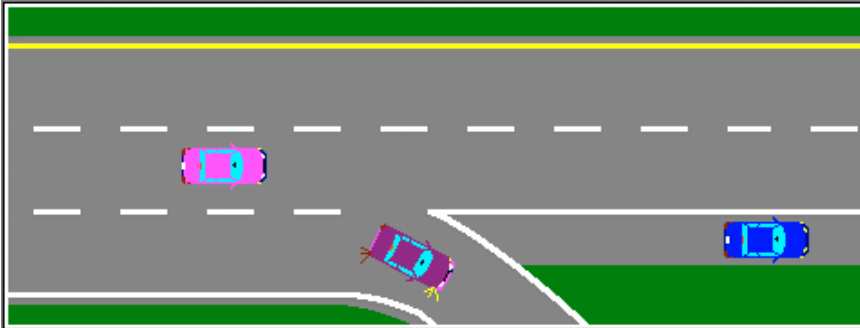
You must
maintain a safe and prudent
following distance.

The main factors to
consider are
road and weather conditions
as well as ...

- A) traffic density and the number of passengers
- B) the length of the trip and your speed
- C) the length of the trip and the number of passengers
- D) your speed and the traffic density

136< Enter - See the answer #

.136 你必须保持一个安全和谨慎的跟踪距离,主要考虑因素是路况, 天气状况和 D 你的车速和交通量

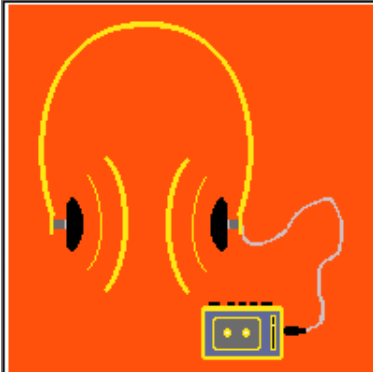


When is reversing permitted
on expressways?

- A) If you activate the hazard lights
- B) Never: reversing is always prohibited on expressways
- C) If you back up very slowly
- D) Only on the shoulder with the hazard lights flashing

137< Enter - See the answer #

.137 在高速公路上何时允许倒车 B 永远不可以,在高速路上倒车一贯被禁止



Drivers and cyclists
are prohibited from
listening to their
"Walkman":

- A) at night
- B) on freeways
- C) always when they are riding or driving
- D) at rush hours

138< Enter - See the answer #

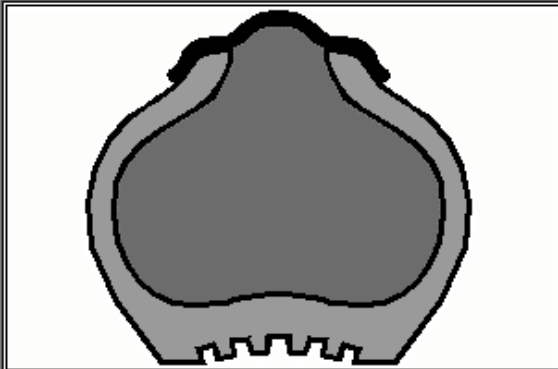
.138 司机和骑自行车者何时禁止听随身听 C 在骑车或开车时总是被禁止

**You must retake the driving test
if your driver's licence
has been expired for more than:**

- A) 1 year
- B) 2 years
- C) 3 years
- D) 5 years

139< Enter - See the answer # - - - -

.139 你的驾照失效多长时间你必须重新参加驾驶考试 C 3 年



Studded tires may only be used ...

- A) from October 15th to May 1st
- B) from November 1st to April 15th
- C) from November 15th to April 15th
- D) from November 1st to May 1st

140< Enter - See the answer # - - - -

.140 大钉轮胎只可用在 A 10 月 15 日到 5 月 1 日

How many passengers may sit
on the front seat of a vehicle?

- A) 2 people
- B) 3 people
- C) 4 people
- D) 5 people

141< Enter - See the answer #

.141 多少乘客可以坐在车的第一排 B 3 个人

If a driver's licence
carries an "A" restriction,
the driver must:

- A) wear a hearing-aid
- B) wear corrective lenses
- C) drive during daylight
hours only
- D) wear a safety harness

142< Enter - See the answer #

.142 如果驾照受 A 级限制, 司机必须 B 戴矫正镜



You have no auto liability insurance.

You are involved in a collision resulting in property damage of \$500 or more.

Your driver's licence will be:

- A) revoked
- B) restricted
- C) suspended
- D) cancelled

143< Enter - See the answer #

.143 你没有汽车责任保险, 你卷入一场车祸, 导致财产损失 500 元或更多, 你的驾照会被 C 暂停

If you crash
into an unoccupied vehicle
and cannot find the owner,
you must:

- A) leave the necessary information on the windshield of the vehicle
- B) call the police and report the collision as soon as possible
- C) take note of the license plate number of the vehicle
- D) not worry about it, since there weren't any witnesses

144< Enter - See the answer #

.144 如果你撞上一辆无人的车, 并且不能找到车主, 你必须 B 尽快叫警察并报告撞车情况

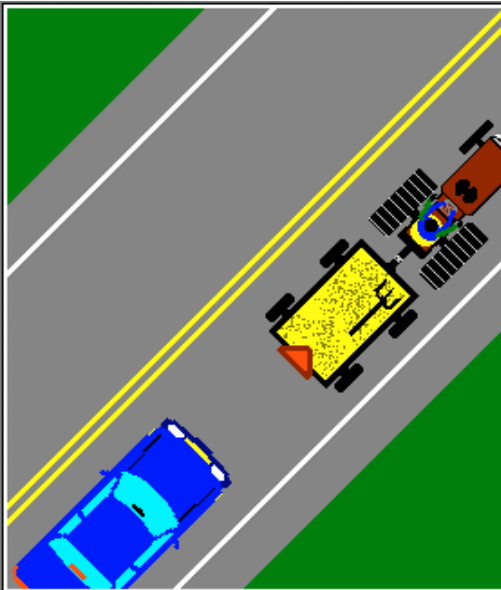
Hit and run
is a violation of:

- A) the Criminal Code
- B) the Highway Safety Code
- C) both A and B above
- D) the Civil Code

145< Enter - See the answer #

.145 撞车逃逸违反了 (C)

- A 刑法
- B 公路安全法规
- C 以上 A 和 B
- D 民法



Driving up a
steep hill
following a
farm
tractor,
you are:

- A) allowed
overtaking it
- B) not allowed
overtaking it
- C) allowed
overtaking if
it is moving at
less than 40 km/h
- D) allowed
overtaking if
no lines are
painted on the
roadway

146< Enter - See the answer #

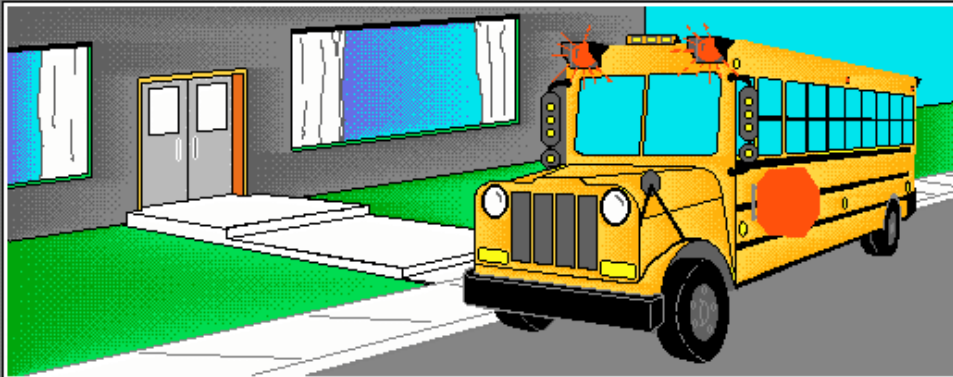
.146 在跟在一辆农用拖拉机后面上坡时, B 你不允许超越它

The fee for vehicle registration
may vary according to
where the owner of the vehicle lives:

- A) if the municipality is in a poor financial situation
- B) if the municipality has an intermunicipal transit system
- C) if the municipality has mass transit system service
- D) if the area has universal courier service

147< Enter - See the answer # - - - -

.147 车辆注册费据车主的居住地会有不同 C 如果该市政当局提供公共交通系统服务

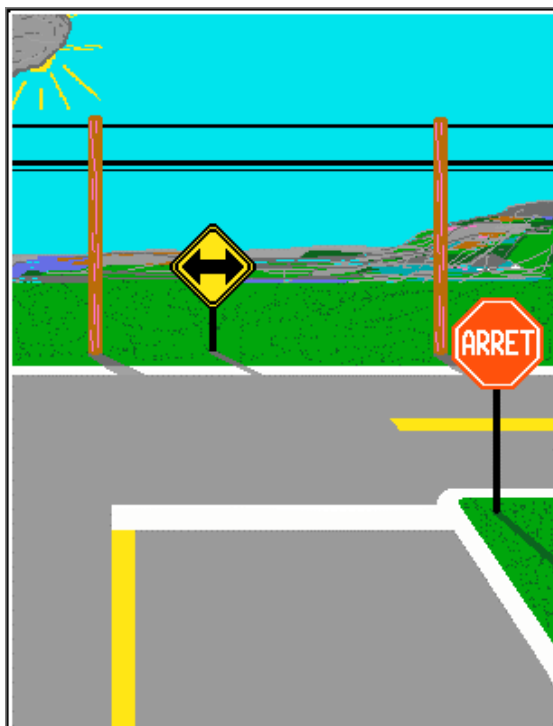


If you overtake a stopped school bus
with its red signal lights flashing,
the penalty will be:

- A) 3 demerit points
- B) 6 demerit points
- C) 9 demerit points
- D) a notice of revocation

148< Enter - See the answer # - - - -

.148 如果你超越了一辆红色信号灯正在闪烁的停着的校车, 处罚将是 C 记过 9 分

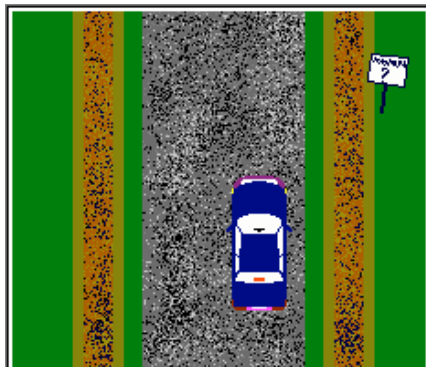


What
minimum distance
must be maintained
from an
intersection
when you
park your vehicle?

- A) 3 meters
- B) 5 meters
- C) 7 meters
- D) 9 meters

149< Enter - See the answer #

.149 你停放车辆时距交叉路口的最小距离是 B 5 米



What is the speed limit
on gravel roads?

- A) 60 km/h
- B) 70 km/h
- C) 80 km/h
- D) 90 km/h

150< Enter - See the answer #

.150 在砾石路上, 速度限制是多少 B 70 km/h

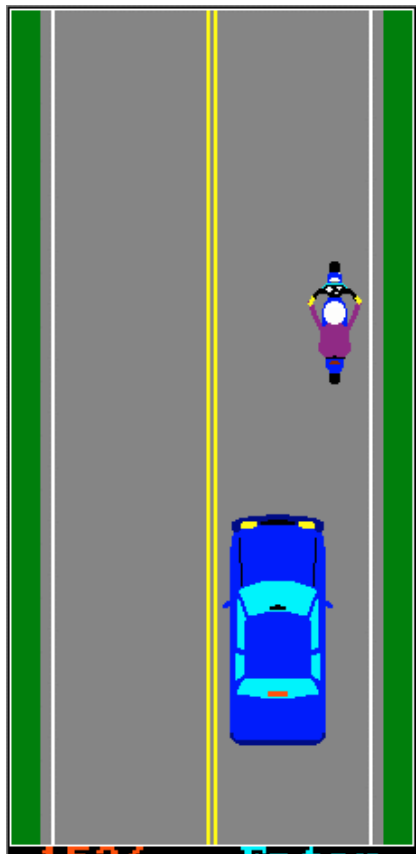


Can the driver pass the bicycle using the same lane?

- A) Never
- B) No, cyclists have the right to use the entire lane
- C) Yes, after tapping the horn to warn him/her to move towards the right in the lane
- D) Yes, provided that there is enough space to do so safely

151< Enter - See the answer #

.151 司机可以在同一车道上超越自行车吗 D 可以，预留足够的空间使此超越安全



In this diagram, is the car permitted to pass the motorcycle?

- A) Yes, after the motorcyclist gives a hand signal to the driver
- B) Yes, if the driver can perform the maneuver safely
- C) Never
- D) Yes, but only if the biker is riding slower than the speed limit

152< Enter - See the answer #

.152 在此图中，允许汽车超越此摩托车吗 C 永远不可以



In the illustration,
are you allowed to pass
the tractor trailer?

- A) Yes, at any time
- B) No, unless it is moving at a very slow speed
- C) Never
- D) Yes, after checking that the way is clear

153< Enter - See the answer #

.153 如图所示，你可以超越该拖拉机拖车吗 D 可以，在检查路上没车时

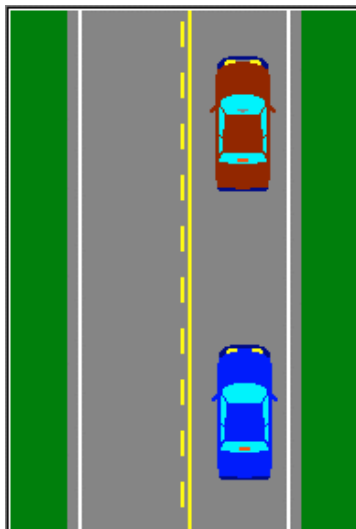


In this diagram,
are you allowed
to pass
the tractor trailer?

- A) Yes, at any time
- B) No, unless it is moving at a very slow speed
- C) Never
- D) Yes, after you make sure the way is clear

154< Enter - See the answer #

.154 如图所示，你可以超越该拖拉机拖车吗 C 永远不可以

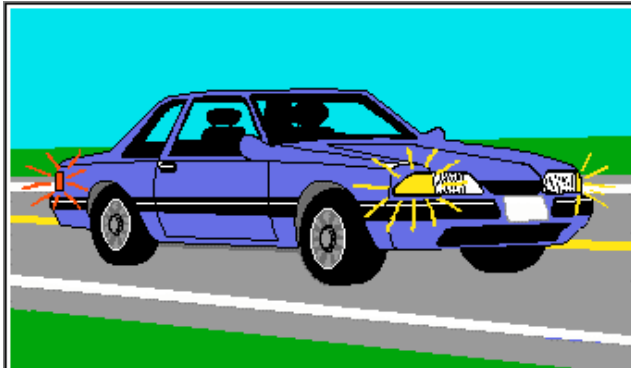


According to this diagram,
are you allowed
to pass
the brown vehicle
ahead of you?

- A) Yes, at any time
- B) No, unless it is moving at a very slow speed
- C) No, never under any circumstances
- D) Yes, after checking that the way is clear

155< Enter - See the answer #

.155 如图所示, 你可以超越你前面这辆棕色车吗 C 在任何情况下永远不可以



Parking lights
may be used:

- A) at any time
- B) for parking only
- C) when driving on well lit streets
- D) when driving in heavy fog

156< Enter - See the answer #

.156 停放车灯何时可用 B 只能用在停放车辆时

When does the law
require lights on vehicles
to be illuminated?

- A) Between dusk and dawn and whenever
you cannot see clearly for a
distance of 150 meters
- B) Between a half hour after sunset
to a half hour before sunrise and
whenever you cannot see clearly
for a distance of 150 meters
- C) Between sunset and sunrise
- D) No specified time

157< Enter - See the answer #

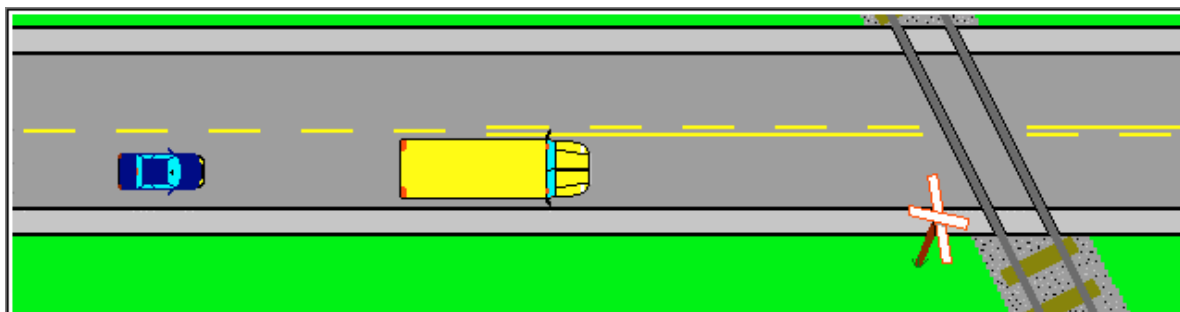
..157 法律要求何时可用车灯照明 B 从日落后半小时到日出前半小时, 以及在 150 米内你不能看清楚的任何時候

It is illegal
for a motorized vehicle to be
equipped with ...

- A) high beams
- B) a radar detector
- C) intermittent windshield
wipers
- D) a right-hand exterior
rear-view mirror

158< Enter - See the answer #

..158 机动车装备有何物是违法的 B 雷达探测器

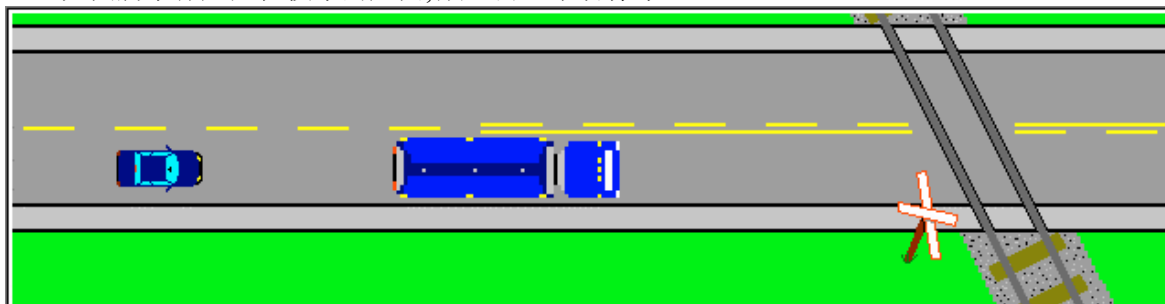


Following the school bus
in the situation shown above,
you should:

- A) accelerate and pass the bus
- B) slow down and check both ways
- C) proceed at the same speed
- D) prepare to stop

159< Enter - See the answer #

.159 如图所示你尾随在校车的后面,你应该 D 准备停车

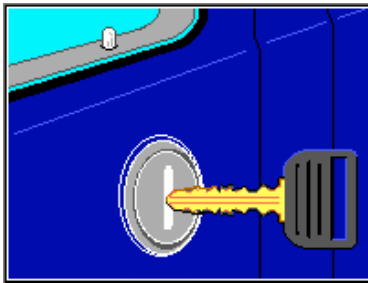


Following a fuel tanker trailer,
in the situation illustrated,
you must:

- A) accelerate and pass the truck
- B) prepare to stop
- C) slow down and check both ways
- D) maintain the same speed

160< Enter - See the answer #

.160 如图所示你尾随在一辆油罐车后面,你必须 B 准备停车

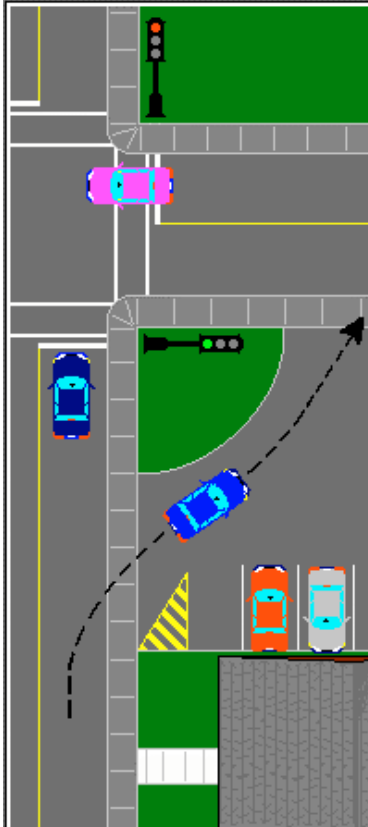


Are you permitted
to park your vehicle in a
public place
without locking the doors?

- A) Yes, when parking in a public parking lot
- B) No, except in winter when you warm up your vehicle
- C) No, it is illegal
- D) Yes, provided it is for a very short time

161< Enter - See the answer #

.161 你把车停放在公共场所而没锁车门, 这允许吗 C 不, 这是非法的



Are you permitted
to drive through the lot
of a service station,
restaurant or any
other public building
in order to
avoid complying with
a traffic control device?

- A) Yes, there is no law against it
- B) Yes, if you are in a genuine hurry
- C) No, it is prohibited by law
- D) No, except if there is a traffic jam

162< Enter - See the answer #

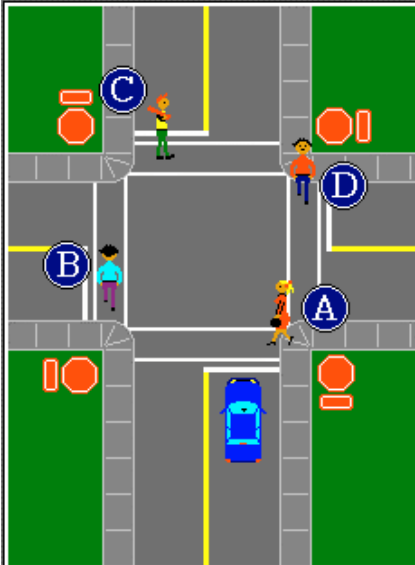
.162 为了避免遵从交通管制设施, 你是否可以从服务站, 餐馆或其他公共建筑前面的空地穿过 C 不可以, 这是法律禁止的.

A pedestrian has already started to cross the street in front of you and the traffic light changes to green. Who should be given the right-of-way?

- A) The pedestrian
- B) The pedestrian, if he/she is half-way across the intersection
- C) You have the right-of-way, if you are driving straight or turning right
- D) You have the right-of-way

163< Enter - See the answer # - - - -

.163 一位行人已开始在你前面穿越马路, 此时交通灯变成了绿色, 谁应获得通行权 A 行人



The diagram illustrates a four-way stop intersection.

You must stop.

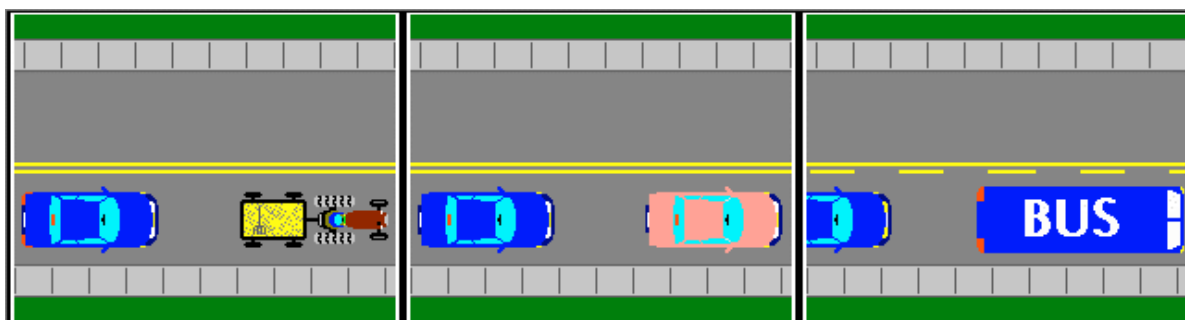
Before proceeding straight ahead,

you must yield to:

- A) pedestrians A and B
- B) pedestrians A and C
- C) pedestrians A and D
- D) pedestrians C and D

164< Enter - See the answer # - - - -

.164 如图所示在一个四路停牌的交叉路口, 你必须停车. 在继续直行之前, 你必须让路给 B 行人 A 和 C



---A--- ---B--- ---C---

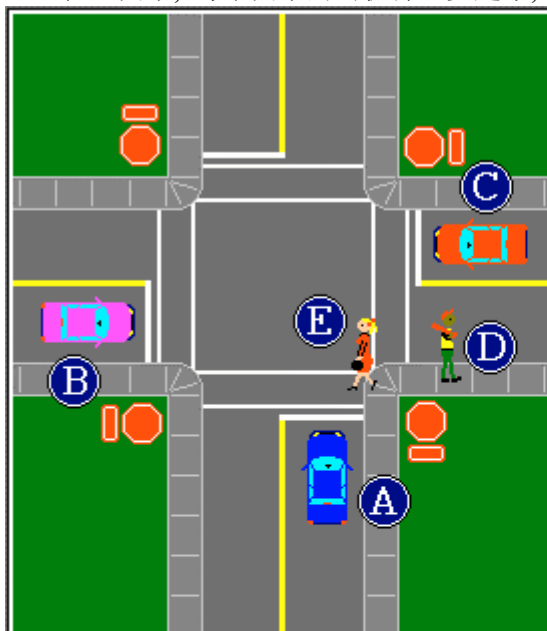
The driver of the automobile in each of the diagrams wishes to pass.

Which cannot?

- A) Diagrams A and B
- B) Diagrams B and C
- C) Diagrams A and C
- D) Diagram B only

165< Enter - See the answer #

.165 在上图中，每个图中的司机都想要超车，哪一个不可以 D 只有图 B



You are driving vehicle A.
Before proceeding straight, you must yield to:

- A) vehicle B
- B) pedestrian E and vehicle C
- C) pedestrians D and E
- D) pedestrian E and vehicle B


166< Enter - See the answer #

.166 你正驾驶车 A，在直行之前，你必须让路给 B 行人 E 和车 C





202 该信号是指: A.出让信号在前 B 让出右侧路 C 高速公路在前 D 不要进入 (A)




This sign indicates?

- A) Yield sign ahead
- B) Yield the right-of-way
- C) Freeway ahead
- D) Do not enter

202< Enter - See the answer #

203 该信号是何意思 A 前方卡车横越 B 卡车慢行线, 爬坡 C. 前方小的道路维修 D 一公里内有建筑(A)




What is the meaning of this sign?

- A) Truck crossing ahead
- B) Slow moving lane for trucks climbing a steep hill
- C) Minor road repairs ahead
- D) Construction for 1 km

203< Enter - See the answer #

204 该道路信号是何意思 A 绕路的预先警告 B 绕路 C 警告前方有两个相反的弯路 D 蜿蜒的道路 150 米内有 5 个或更多的各自分离的弯道 (D)



What is the meaning of this road sign?

- A) Advance warning of a detour
- B) Detour
- C) Warns of two reverse curves ahead
- D) Winding road: five or more curves separated by distances of less than 150 meters

204< Enter - See the answer #

205 该信号是警告: A 前方有 T 型交叉路口 B 前方有圆形交叉路口 C 前方运输繁忙 D 前方有铁路平面交叉路口 (D)



This sign warns of a:

- A) t-intersection ahead
- B) traffic circle ahead
- C) heavy traffic ahead
- D) railway level crossing ahead

205< Enter - See the answer #

206 该信号是警告:A 自行车横越 B 前方自行车横越 C 自行车道 D 自行车预留道 (B)



This sign warns you of a:

- A) bicycle crossing
- B) bicycle crossing ahead
- C) bicycle path
- D) reserved lane for bicycles

206< Enter - See the answer #

207 该信号是警告驾驶员他正接近一个:A 机动雪橇比赛 B 机动雪橇横越 C 单独的机动雪橇骑手 D 前方有机动雪橇横越 (D)



This sign warns drivers they are approaching a:

- A) snowmobile race
- B) snowmobile crossing
- C) solitary snowmobile rider
- D) snowmobile crossing ahead

207< Enter - See the answer #

208 该信号是指:A 前方路边窄成为一条道 B 无特殊的危险 C 前方道路在两侧都变窄 D 前方有窄的桥或隧道 (D)



This sign indicates:

- A) the roadway narrows to one lane ahead
- B) no danger in particular
- C) the roadway narrows on both sides ahead
- D) a narrow bridge or tunnel ahead

208< Enter - See the answer #


209 这个新的信号是何意思:A 学校交叉口 B 前方可能有校车停车 C 学校区域的开始 D 前方为学校区域 (B)




What is the meaning of this new sign?

- A) School crossing
- B) Possibly a stopped school bus ahead
- C) Beginning of a school zone
- D) School zone ahead


209< Enter - See the answer #




A



B



C



D

Which sign
warns of a
school zone
or
school crosswalk
ahead?

A) Sign **A**

B) Sign **B**

C) Sign **C**

D) Sign **D**

210< Enter - See the answer #

210 哪一个信号是警告前方为学校区域或学校人行横道 A 信号 A B 信号 B C 信号 C D 信号 D (B)



What does this
sign mean?

A) Parking is prohibited

B) Stopping is prohibited

C) Stop sign ahead

D) The traffic light ahead is red

211< Enter - See the answer #

211 这个信号是何意思:A 禁止停放 B 禁止停车 C 前方有停车信号 D 前方的交通信号灯为红色 (C)



This road sign
is an
advance warning of:

- A) two one-way streets
- B) two-way traffic
- C) two directional arrows
- D) a new road

212< Enter - See the answer #

212 该道路信号是对什么的预先警告: A 两个单行道 B 双向通行 C 双向箭头 D 一条新的路 (B)



What does this
sign mean?

- A) You are approaching an area where speed will be reduced to 50 km/h
- B) The beginning of a 50 km/h maximum speed zone
- C) You are approaching a zone where the minimum speed is 50 km/h
- D) The beginning of a 50 km/h minimum speed zone

213< Enter - See the answer #

213 该信号是何意思: A 你正接近一个区域, 速度必须降至 50km/h
B 开始进入最大速度是 50km/h 的区域
C 你正接近一个区域, 最小速度是 50km/h
D 开始进入最小速度是 50km/h 的区域 (A)




This sign indicates:

- A) gravel road ahead
- B) turn off your radio transmitter ahead
- C) possibility of fallen rocks ahead
- D) bumpy road ahead

214< Enter - See the answer #

214 该信号是指：A 前方砾石路 B 前方关闭你的无线电广播发射机 C 前方可能有石块落下 D 前方道路颠簸 (C)




This sign indicates
that the road is:

- A) very hilly
- B) flooded
- C) bumpy
- D) under repair

215< Enter - See the answer #

215 该信号是指此路：A 多坡 B 淹没 C 颠簸 D 在修 (C)



This sign indicates:

- A) traffic lights ahead
- B) defective traffic lights
- C) weigh station
- D) pedestrian traffic lights

216< Enter - See the answer #

.216 该信号是指 A 前方有信号灯 B 信号灯有缺陷 C 称重站 D 行人交通灯 (A)



**This sign warns
you of ...**

- A) an intersection
- B) merging traffic
- C) a tributary road
- D) a Y-intersection

217< Enter - See the answer #

.217 该信号是警告你: A 有一个交叉路口 B 合并通行 C 一个支路 D 一个Y型交叉口 (D)



What does
this sign indicate?

- A) A tributary lane
- B) An adjacent lane
- C) A merging lane
- D) A deceleration lane

218< Enter - See the answer #

.218 该信号是指：A 一个支路 B 一个邻路 C 一个并入的路 D 一个减速的路 (C)



This sign indicates:

- A) a tributary road
- B) a merging road
- C) an adjacent road
- D) a Y-intersection

219< Enter - See the answer #

.219 该信号是指：A 一个支路 B 一个并入的路 C 一个邻路 D 一个Y型交叉口 (A)



What is
the meaning of
this sign?

- A) Loss of a lane ahead
- B) Narrow passage ahead
- C) Road will narrow on both sides
- D) Road will narrow on the left

220< Enter - See the answer #

.220 该信号是何意思: A 前方少一条通道 B 前方通道狭窄 C 道路将在两侧都变窄 D 道路将在左侧变窄 (D)



This road sign
indicates:

- A) road narrows on the left
- B) the beginning of a one-way road
- C) road narrows on the right
- D) the end of a divided highway

221< Enter - See the answer #

.221 该信号是指: A 道路在左侧变窄 B 一条单行线的开始 C 道路在右侧变窄 D 分车路的结束 (C)



This sign means:

- A) one-way traffic ahead
- B) mandatory route for trucks
- C) pass on either side of the obstacle
- D) the beginning of a zone where passing is permitted

222< Enter - See the answer #

.222 该信号是指: A 前方单向通行 B 卡车强制路线 C 可从障碍物的任意一侧通过 D 允许通过区域的开始 (C)



What is the meaning of this sign?

- A) Sharp left curve ahead
- B) 45° left curve ahead
- C) 180° left curve ahead
- D) Reverse curve ahead

223< Enter - See the answer #

.223 该信号是何意思: A 前方左急转弯 B 前方左 45 度弯道 C 前方 180 度左转弯 D 前方反向曲线转弯 (A)



This road sign indicates a:

- A) reverse curve ahead
- B) winding road ahead
- C) 180° reverse curve ahead
- D) 45° reverse curve ahead

224< Enter - See the answer #

.224 该信号是指: A 前方反向曲线转弯 B 前方道路蜿蜒 C 前方 180 度反向曲线转弯 D 前方 45 度反向曲线转弯 (A)



When you see this sign


you should:

- A) apply the brakes firmly and maintain this pressure
- B) pay close attention trucks usually accelerate on the downhill slope
- C) shift to neutral

D) check the brakes and prepare to downshift to use the engine compression to control speed

225< Enter - See the answer #

.225 当你看到这个信号, 你要: A 坚定的刹车并保持施压 B 密切注意卡车通常在下坡的时候加速 C 换为空档 D 控制制动装置, 并准备调低速档利用发动机压缩控制速度 (D)



This road sign
warns that you are
approaching:

- A) a slippery road
- B) the end of the pavement
- C) the end of a lane
- D) the end of the roadway

226< Enter - See the answer #

.226 该道路信号警告你正接近：A 一个滑的道路 B 铺过道路（人行道）的终端 C 车道的终端 D 车行道的终端 （B）



What does this
sign indicate?

- A) The end of a merge lane for private buses
- B) The direction for school buses to follow
- C) A merging lane reserved for buses
- D) Bus drivers are not permitted to drive on the left

227< Enter - See the answer #

.227 该信号是指：A 私营公共汽车合并车道的终端 B 校车遵循的方向 C 为公共汽车预留的并入车道 D 公共汽车司机不允许在左侧开车 （C）



What does this sign mean?

- A) Successive curves
- B) Detour
- C) Slippery road when wet
- D) End of pavement

228< Enter - See the answer #

.228 该信号是何意思： A 连续的弯道 B 绕行 C 当湿的时候路面会很滑 D 铺过道路（人行道）的终端 （C）



What does this new sign mean?

- A) Slippery road when wet
- B) Winding road for motorcycles
- C) Dangerous curve
- D) Slippery road for motorcycles when wet

229< Enter - See the answer #

.229 这个新的信号是何意思： A 当湿的时候路面会很滑 B 摩托车行驶的蜿蜒道路 C 危险的弯路 D 当湿的时候对于摩托车路面会很滑 （D）



What does
this new road sign
posted on
bridges and viaducts
mean?

- A) Slippery road
in summer
- B) Road may be icy
or slippery when
the temperature
is near the
freezing point
- C) Road may be icy
during winter
- D) Roadside
thermometer

230< Enter - See the answer #

230 这个贴在桥上和高架桥上的新的信号是何意思: A 夏天路滑 B 当温度接近冰点时,路面可能会覆盖冰或很滑 C 在冬天路面可能会覆盖冰 D 路旁有温度计 (B)



This warning sign
indicates:

- A) divided highway
ends
- B) narrow bridge
ahead
- C) road repairs
ahead
- D) divided highway
ahead

231< Enter - See the answer #

231 该警示信号是指: A 分车道的公路 终止 B 前方有窄的桥 C 前方修路 D 前方公路分车道 (A)



This warning sign indicates:

- A) divided highway ahead
- B) divided highway ends
- C) narrow bridge ahead
- D) roadway under construction

232< Enter - See the answer #

.232 该警示信号是指: A 前方公路分车道正在建设 (A) B 分车道的公路终止 C 前方有窄的桥 D 前方道路

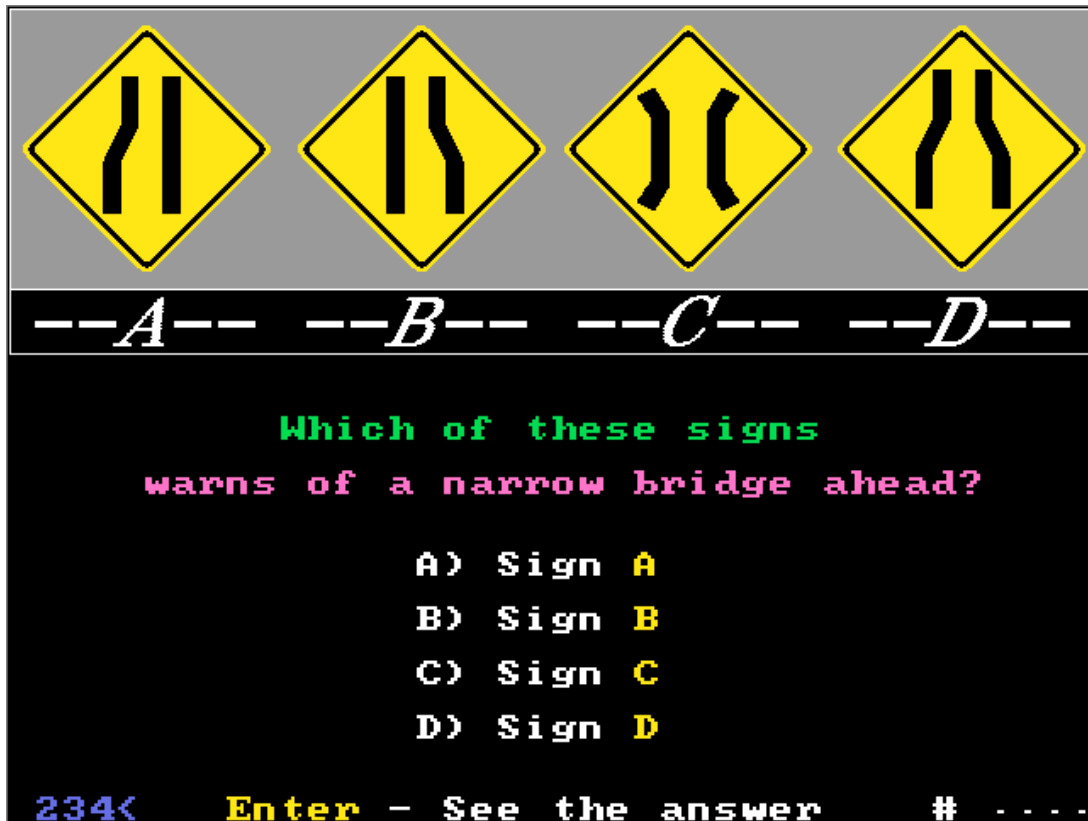


This warning sign indicates:

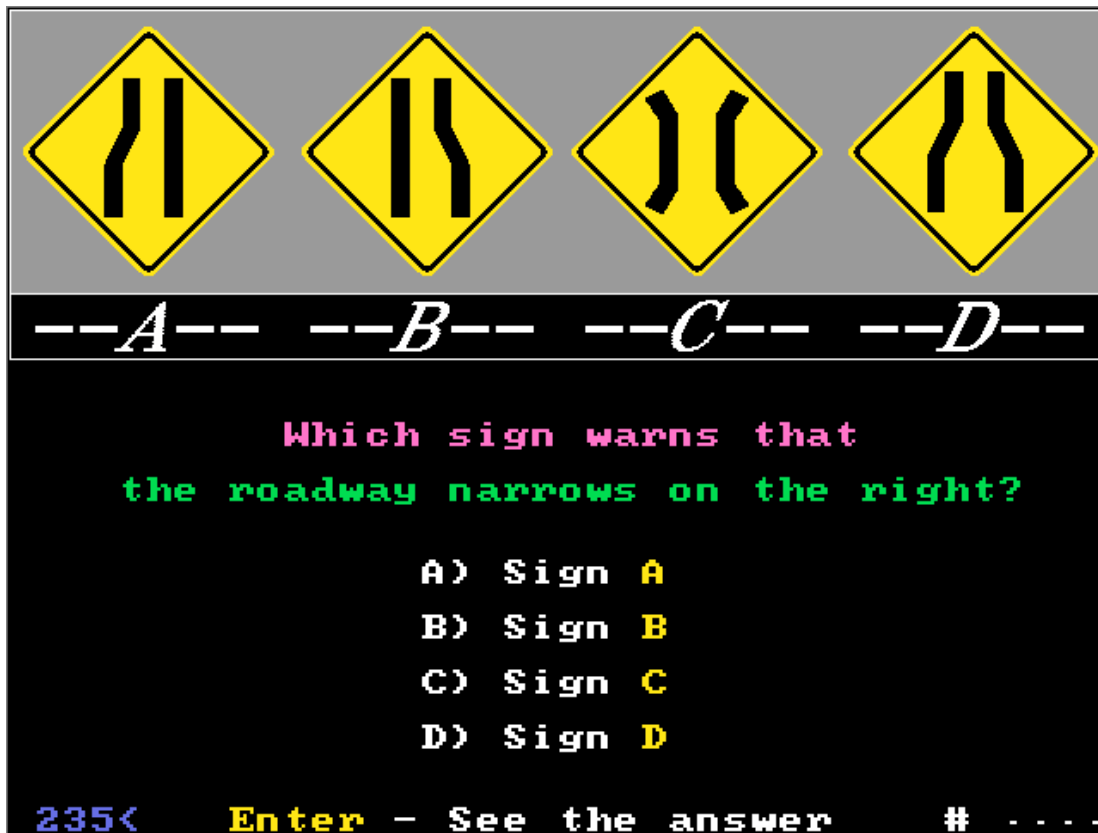
- A) divided highway ahead
- B) a one-way street ahead
- C) hidden intersection ahead
- D) pavement narrows on both sides ahead

233< Enter - See the answer #

.233 该警示信号是指: A 前方公路分车道 B 前方单行线 C 前方有隐蔽的交叉口 D 前方道路双侧变窄 (D)



234 哪一个信号警示前方有一座窄桥： A 信号 A B 信号 B C 信号 C D 信号 D
(C)



235 哪一个信号警示公路右侧变窄： A 信号 A B 信号 B C 信号 C D 信号 D (B)

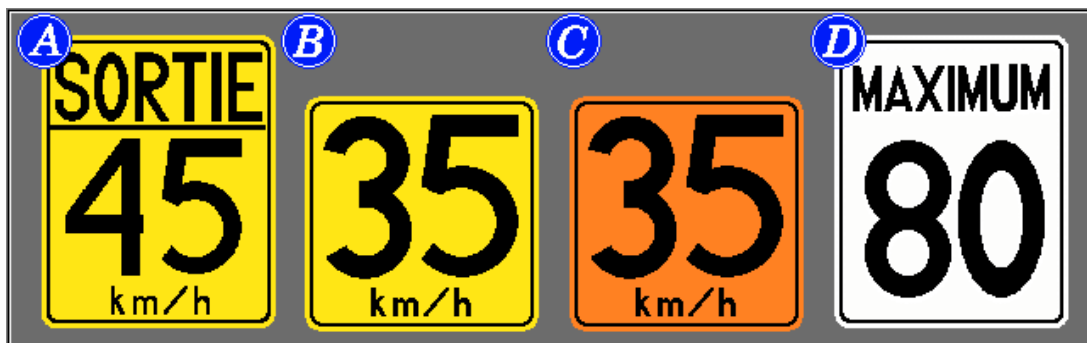


What does this sign mean?

- A) Maximum speed
- B) Recommended speed for a sharp curve ahead
- C) Speed limit ahead
- D) Recommended speed on the expressway exit ramp

236< Enter - See the answer #

.236 该信号是指： A 最大速度 B 前方有一急转弯的推荐速度 C 前方速度限制 D 高速公路出口斜坡的推荐速度 (D)



Which suggested speed sign is usually posted with a sign for a curve?

- A) Sign A
- B) Sign B
- C) Sign C
- D) Sign D

237< Enter - See the answer #

.237 哪一个建议速度信号通常贴在弯道信号旁边： A 信号 A B 信号 B C 信号 C D 信号 D (B)



This hazard marker indicates?

- A) End of the road
- B) Pass on either side of the obstacle
- C) Pass to the right of the obstacle
- D) Pass to the left of the obstacle

238< Enter - See the answer #

.238 该危险标志是指： A 路的终点 B 从任一侧通过障碍物 C 从右侧通过障碍物 D 从左侧通过障碍物 (B)



This hazard marker indicates:

- A) pass to the right of the obstacle
- B) pass to the left of the obstacle
- C) pass on either side of the obstacle
- D) end of the road

239< Enter - See the answer #

.239 该危险标志是指： A 从右侧通过障碍物 B 从左侧通过障碍物 C 从任一侧通过障碍物 D 路的终点 (A)




This hazard marker indicates:

- A) pass to the right of the obstacle
- B) pass to the left of the obstacle
- C) pass on either side of the obstacle
- D) end of the road

240< Enter - See the answer #

.240 该危险标志是指：A 从右侧通过障碍物 B 从左侧通过障碍物 C 从任一侧通过障碍物 D 路的终点 (B)




What does this sign mean?

- A) One-way road
- B) Obligation to move left
- C) Dangerous point on a hill
- D) Dangerous point at a T-intersection

241< Enter - See the answer #

.241 该信号是何意思：A 单向道 B 必须靠左行 C 斜坡的危险点 D T型交叉口的危险点 (D)




--A-- --B-- --C-- --D--

Which of these signs
when posted in a curve
indicates an especially dangerous point
on a sharp curve?

A) Sign A
B) Sign B
C) Sign C
D) Sign D

242< Enter - See the answer # - - - -

.242 哪一个贴在弯道处的信号表示急转弯的危险点：A 信号 A B 信号 B C 信号 C D 信号 D (C)




What does this
sign indicate?

A) End of roadway
ahead
B) Detour
C) Deviation
D) Direction to
follow

243< Enter - See the answer # - - - -

.243 该信号是何意思：A 前方道路终点 B 绕行 C 偏离 D 遵循指示 (A)




This road sign warns the driver:

- A) of water covering the pavement ahead
- B) that the pavement may be covered by ice or frost
- C) that the pavement ahead may be slippery when wet
- D) that windy conditions ahead may make driving difficult

244< Enter - See the answer #

.244 该路标是警示司机：A 前方水覆盖路面 B 路面可能覆盖冰或霜 C 前方路面在湿的时候可能会滑 D 前方刮风可能会使驾驶困难 (D)



--A-- --B-- --C-- --D--

Which sign warns of grooved pavement or a steel wiremesh surface on a bridge?

- A) Sign B
- B) Sign A
- C) Sign D
- D) Sign C

245< Enter - See the answer #

.245 哪一个信号警示有沟的路面或在桥上有钢丝网的表面：A 信号 B B 信号 A C 信号 D D 信号 C (A)



--A-- --B-- --C-- --D--

Which sign warns that
the roadway narrows on both sides?

- A) Sign A
- B) Sign B
- C) Sign C
- D) Sign D

246< Enter - See the answer #

.246 哪一个信号警示道路在双侧变窄: A 信号 A B 信号 B C 信号 C D 信号 D (D)



When you see
this road sign,
you should:

- A) drive as close as possible to the center of the road
- B) accelerate to clear the playground area quickly
- C) stop as quickly as possible
- D) slow down and check both sides of the roadway for children

247< Enter - See the answer #

.247 当你看到该信号是你应该: A 尽量在路的中央行驶 B 加速快速越过运动场 C 尽量快的停车 D 减速慢行并检查路两侧有无小孩 (D)



Approaching another
vehicle from the
rear,
you see this sign.

Are
you allowed to pass?

A) No, passing is
not permitted
near an
intersection

B) Yes, if the way
is clear

C) No, unless the road is divided
by a broken line

D) Yes, traffic on the side road
must have a stop sign

248< Enter - See the answer # - - - -

.248 当你从后方接近另一辆车时,你看到该信号,你可以通过吗 A 接近交叉口不允许通过 B 若路上空着就可以 C 不行,除非道路有虚线分开 D 可以,侧面路上一定有停车标志 (A)



This road sign:

A) warns of the
width of
bridges and
viaducts


B) informs of the
length of the
roadway in need
of repair

C) indicates the overhead clearance
under bridges and viaducts ahead

D) warns that the horizontal clearance
of the roadway is less than the
width indicated

249< Enter - See the answer # - - - -

.249 该信号是: A. 警告桥或高架桥的宽度 B 通知路面需修理的长度 C 指示前方桥或高架桥下的上方距离 D 警告路面水平距离小于所示宽度 (C)



This road sign indicates:

A) the distance to the end of the highway

B) the beginning of a divided highway 1 kilometer ahead

C) highway 20 begins 1 kilometer ahead

D) the end of the divided highway

250< Enter - See the answer # - - - -

.250 该道路标志是指: A 到公路尽头的距离 B 前方 1 公里处是分车道的开始 C 20 号公路开始于前方 1 公里处 D 分车道的终点 (A)



This road sign indicates:

A) highway 20 1 kilometer ahead


B) the distance to the end of highway 20 at a T intersection

C) a T-intersection 1 kilometer ahead

D) the end of highway 20

251< Enter - See the answer # - - - -

.251 该道路标志是指: A 20 号公路在前方 1 公里处 B 到 20 号公路终端的 T 型交叉口的距离 C 前方 1 公里有一个 T 型交叉口 D 20 号公路的终端 (B)




This sign indicates:

- A) the position of new stop signs that have recently been installed
- B) the position of stop signs that will be installed or removed in the near future
- C) the stop signs shown are soon to be removed
- D) the position of stop signs at the intersection ahead

252< Enter - See the answer #

.252 该信号是指: A 最近安装的新的停车信号的位置 B 不久将会安装或移动的停车信号的位置 C 所示的停车信号很快将会被移走 D 前方交叉口处停车信号的位置 (B)



This sign indicates:

- A) the position of a new stop sign that has recently been installed
- B) the location of a stop sign ahead
- C) the stop sign ahead is going to be removed in the near future
- D) the position of a new stop sign that will be installed

253< Enter - See the answer #

.253 该信号是指: A 已在最近安装的新的停车信号的位置 B 前方停车信号的位置 C 前方的该停车信号不久将会被移走 D 将要安装的新的停车信号的位置 (D)



This sign indicates:

- A) the location of stop signs ahead
- B) the position of stop signs that have recently been installed
- C) the stop signs shown are to be removed in the near future
- D) the position of new stop signs that will be installed soon

254< Enter - See the answer #

.254 该信号是指: A 前方停车信号的位置 B 已在最近安装的新的停车信号的位置 C 所示停车信号不久将会被移走 D 不久将要安装的新的停车信号的位置 (C)



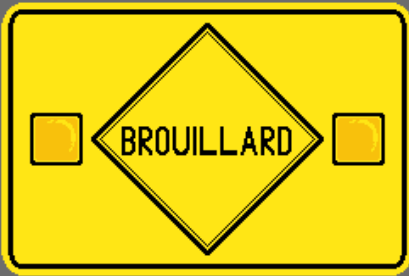
When the yellow lights are flashing,

this sign warns drivers:

- A) of traffic lights ahead
- B) of a stop sign ahead
- C) that the traffic lights at the next intersection are defective
- D) that the light at the intersection ahead will change to red before they arrive at the intersection

255< Enter - See the answer #

.255 当黄灯闪烁时,该标志是警告司机: A 前方有交通信号灯 B 前方有停车信号 C 下一个交叉口的交通信号灯有缺陷 D 前方的交叉口处的信号灯在他到达之前将会变成红色 (D)



When the yellow lights
are flashing,
this sign
warns drivers:

- A) of fog ahead
- B) of windy driving conditions ahead
- C) of water covering the roadway ahead
- D) that roadway conditions ahead will be slippery

256< Enter - See the answer # - - - -

.256 当黄灯闪烁时,该标志是警告司机: A 前方有雾 B 前方有大风 C 前方有水覆盖路面 D 前方路面很滑 (A)



When the yellow lights
are flashing,
this sign indicates:

- A) a lane reserved for buses, taxis and vehicles with 3 or more occupants
- B) a lane reserved for oncoming traffic
- C) the beginning of a reserved lane
- D) the beginning of a reserved lane 1 km ahead

257< Enter - See the answer # - - - -

.257 当黄灯闪烁时,该标志是警告司机: A 有一个车道是留给公共汽车,出租车和载人3个以上的车辆 B 有一个车道是留给迎面而来的车辆 C 预留车道的开始 D 前方1公里处有一个预留车道 (D)



**DATE
ARRÊT
ENLEVÉ**

This sign indicates:

- A) the date when a new stop sign will be installed
- B) the date when a stop sign will be removed
- C) drivers are to ignore the next stop sign
- D) drivers should proceed with caution

258< Enter - See the answer # - - - -

.258 该信号是指: A 将要安装一个新的停车信号的日期 B 一个停车信号将要被移走的日期 C 司机可忽略下一个停车信号 D 司机前行要谨慎 (B)



**DATE
ARRÊT
IMPLANTÉ**

This sign indicates:

- A) the date when a new stop sign will be installed
- B) the date when a stop sign will be removed
- C) drivers are not required to stop at the stop sign ahead
- D) drivers must proceed with caution

259< Enter - See the answer # - - - -

.259 该信号是指: A 将要安装一个新的停车信号的日期 B 一个停车信号将要被移走的日期 C 前方的停车信号处不需要停车 D 司机前行必须谨慎 (A)



This sign warns
of a zone ahead
where
the speed limit:

- A) is at least
30 km/h lower
- B) is at least
50 km/h lower
- C) is reduced to
50 km/h
- D) is increased
to 70 km/h

260< Enter - See the answer #

.260 该信号是警示在前方的限速区 A 至少降低 30km/h B 至少降低 50km/h C 降至 50km/h D 升至 70km/h (A)



This sign indicates:

- A) drivers should
yield to oncoming
traffic
- B) a yield sign ahead

C) two-way traffic ahead

D) yield to oncoming traffic
sign ahead

261< Enter - See the answer #

.261 该信号是指: A 司机应为迎面而来的车辆让路 B 前方有一让路信号 C 前方为双向车道 D 前方有一个要为迎面而来的车辆让路的信号 (D)



This sign
warns drivers of a:

- A) disabled persons
parking ahead
- B) disabled persons
access ahead
- C) disabled persons
facility ahead
- D) disabled persons
crosswalk ahead

262< Enter - See the answer #

.262 该信号是警告司机: A 前方是残疾人停车点 B 前方为残疾人通道 C 前方有残疾人所用设施 D 前方有残疾人人行横道 (D)



This sign
warns drivers
they are approaching:

- A) a sharp reverse curve
- B) a sharp left turn
- C) a left curve of more
than 90°
- D) a sharp left curve

263< Enter - See the answer #

.263 该信号警告司机, 他正接近: A 一个反向急转弯道 B 一个向左急拐 C 一个大于 90 度的左侧急转弯 D 一个向左急转的弯道 (C)



This sign
warns drivers
they are approaching:

- A) a private driveway
- B) an intersection with a road on the left ahead
- C) a parking lot entrance on the left
- D) a T-intersection ahead

264< Enter - See the answer # - - - -

.264 该信号警告司机，他正接近: A 一个私营车道 B 前方有一带有向左拐的路的交叉路口， C 左边有一停车场入口 D 前方有一个 T 型交叉口 (B)



This sign
warns drivers
they are approaching:

- A) a tributary road intersecting from the right ahead
- B) merging traffic lanes ahead
- C) distinct adjacent traffic lanes enter from the right ahead
- D) a reserved traffic lane merging from the right ahead

265< Enter - See the answer # - - - -

.265 该信号警告司机，他正接近:A 前方右侧有支路的交叉路口 B 前方交通车道合并 C 右前方分开的临近车道进入 D 预留的交通车道从右前方并入 (A)




This sign warns of:

- A) a Y-intersection ahead
- B) a T-intersection in a curve ahead
- C) a level crossing in a curve ahead
- D) a tributary road intersects in a curve ahead

266< Enter - See the answer #

266 该信号警告: A 前方有一 Y 型交叉路口 B 前方弯道处有一个 T 型交叉路口 C 前方弯道处有一平面交叉路口 D 前方弯道处有一支路交叉口 (B)




This sign warns drivers of:

- A) two level rail crossings ahead
- B) an intersection with a multi-lane roadway
- C) an intersection with a roadway divided by a median ahead
- D) divided highway ahead

267< Enter - See the answer #

267 该信号警告司机: A 前方有两个水平铁路交叉口 B 一个由多个车道的交叉路口 C 前方有一交叉路口,其中一路段中央分隔开 D 前方是分车道 (C)




This sign indicates:

- A) level crossing on tributary road near intersection ahead
- B) angle of track at level crossing ahead
- C) angle of tributary road, intersection ahead
- D) level crossing ahead

268< Enter - See the answer # - - - -

.268 该信号是指: A 前方交叉路口附近的支路上有一平面交叉路口 B 前方平面交叉路口路轨道的角度 C 前方交叉路口支路的角度 D 前方有一平面交叉路口 (A)



This sign indicates:

- A) a T-intersection ahead
- B) angle of track at level crossing ahead
- C) the angle at which a tributary road intersects ahead
- D) merging traffic lanes ahead

269< Enter - See the answer # - - - -

.269 该信号是指: A 前方有一 T 型交叉路口 B 前方平面交叉路口轨道的角度 C 前方支路交叉路口的角度 D 前方交通车道合并 (B)




This warning sign indicates:

- A) an especially dangerous level crossing ahead
- B) a level crossing just before the intersection
- C) the angle at which the tracks cross the roadway
- D) the intersection of a roadway divided by a median ahead

270< Enter - See the answer #

.270 该信号是警告: A 前方有一个极危险的平面交叉路口 B 在交叉路口前面有一个平面交叉路口 C 轨道与公路交叉的角度 D 一个交叉路口,公路中央被分隔开 (B)



This advance sign warns of:

- A) a level crossing to the left of a T-intersection
- B) a level crossing before the T-intersection
- C) the intersection of a roadway divided by a median
- D) an especially dangerous level crossing ahead

271< Enter - See the answer #

.271 该前方信号是警告: A T型 交叉口的左侧有一个平面交叉路口 B 在T型交叉口前有一个平面交叉路口 C 交叉路口的公路中央被分隔开 D 前方有一个极危险的平面交叉路口 (A)



This sign indicates the:

- A) roadway narrows on right ahead
- B) narrow bridge ahead
- C) roadway narrows on left ahead
- D) right lane ends ahead

272< Enter - See the answer # - - - -

.272 该信号是指: A 前方右侧公路变窄 B 前方有一窄桥 C 前方左侧公路变窄 D 前方右侧车道终止 (D)



This sign warns drivers of:

- A) a truck crossing
- B) a steep hill ahead
- C) the possibility of a stopped truck ahead
- D) the possibility of a slow moving vehicle ahead

273< Enter - See the answer # - - - -

.273 该信号是警告司机: A 一个卡车横过 B 前方有一斜坡 C 前方有一辆停着的卡车的可能性 D 前方有一辆慢行的车辆的可能性 (B)

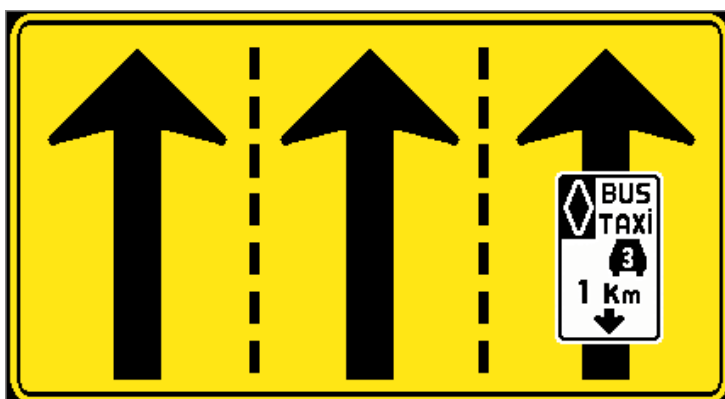


This sign
warns
drivers of:

- A) the possibility of a slow moving tractor
- B) a steep hill ahead
- C) a farm tractor crossing ahead
- D) reduced visibility in an agricultural area

274< Enter - See the answer # - - - -

.274 该信号是警告司机: A 有一辆慢行的拖拉机的可能性 B 前方有一斜坡 C 前方有一辆农用拖拉机 D 在一个农业区域可见度降低. (D)



This sign warns of:

- A) a reserved lane ahead
- B) the beginning of a reserved lane
- C) a reserved lane merging ahead
- D) a reserved lane crossing ahead

275< Enter - See the answer # - - - -

.275 该信号是警告: A 前方有一预留车道 B 一个预留车道的开始 C 前方有一预留车道并入 D 前方有一预留车道横过 (A)

16h-18h

LUNAVEN

1 km

This tab sign,

when posted with

a reserved lane ahead sign,

indicates:

A) the days and hours when all drivers may use the lane


B) the length of the reserved lane and the period when it applies

C) the period when traffic will be moving in an oncoming direction

D) the period during which the reserved lane is in effect

276< **Enter** - See the answer #

.276 该标签信号贴在前方有预留车道信号的旁边表示: A 所有司机可以使用该车道的天数和小时数 B 预留车道的长度和使用时间段 C 车辆按来临的方向移动的时间段 D 在此期间预留车道是有效的 (D)



This road sign

warns

the driver of a:

A) pedestrian crosswalk ahead

B) school crosswalk ahead

C) playground crossing ahead

D) crossing for visually impaired persons ahead

277< **Enter** - See the answer #

.277 该道路标志是警告司机: A 前方有一个人行横道线 B 前方有学校人行横道线 C 前方有运动场横过 D 前方视觉障碍者可以横过 (D)



This sign warns
of a crosswalk ahead
for:

- A) school children
- B) pedestrians
- C) visually impaired persons
- D) disabled persons

278< Enter - See the answer #

.278 该信号是警告 前方的人行横道线是为谁所设: A 学校学生 B 行人 C 视觉障碍的人 D 残疾人 (B)



This sign indicates:

- A) a pedestrian and cyclist crosswalk ahead
- B) a pedestrian and cyclist path at the roadside
- C) a playground crosswalk ahead
- D) a crossing for cyclists and pedestrians at this location

279< Enter - See the answer #

.279 该信号是指: A 前方有一个为行人和骑自行车的人所设的人行横道线 B 在路旁有行人和自行车道 C 前方有一运动场的横越线 D 在此位置有一自行车和行人的横越线 (A)



This advance
designated roadway
sign

warns:

- A) of an automobile
and cyclist
crossing ahead
- B) of a parking area
for cyclists and
automobiles ahead

C) of a reserved lane ahead

D) of a change from a bicycle lane
to a designated roadway shared
with motor vehicles

280< Enter - See the answer #

.280 该提前出示的路标是警告: A 前方有自行车和汽车横越 B 前方有自行车和汽车停车场 C 前方有一预留车道 D 由自行车道变为与机动车共用该道 (D)



This designated
roadway
sign indicates:


- A) a crossing for
cyclists and
automobiles
ahead
- B) cyclists and
drivers must
share the
roadway

C) a parking area for automobiles
and cyclists ahead

D) to cyclists and drivers that they
must share a designated bicycle
roadway

281< Enter - See the answer #

.281 该出示路标是指: A 前方有自行车和汽车横越 B 自行车和司机必须共用该道 C 前方有自行车和汽车的停车场 D 自行车和司机必须共用指定的自行车道 (B)




This sign warns:

- A) of surface irregularities ahead
- B) that pavement ends ahead and a gravel or dirt surface begins
- C) of the possibility of water on the road ahead
- D) of grooved pavement or steel wiremesh surface on a bridge ahead

282< Enter - See the answer #

.282 该路标是指: A 前方路面不正规 B 前方铺的路终止,砾石或泥土路面开始 C 前方路上有水的
可能性 D 路面有沟或前方桥上有钢丝网表面 (B)

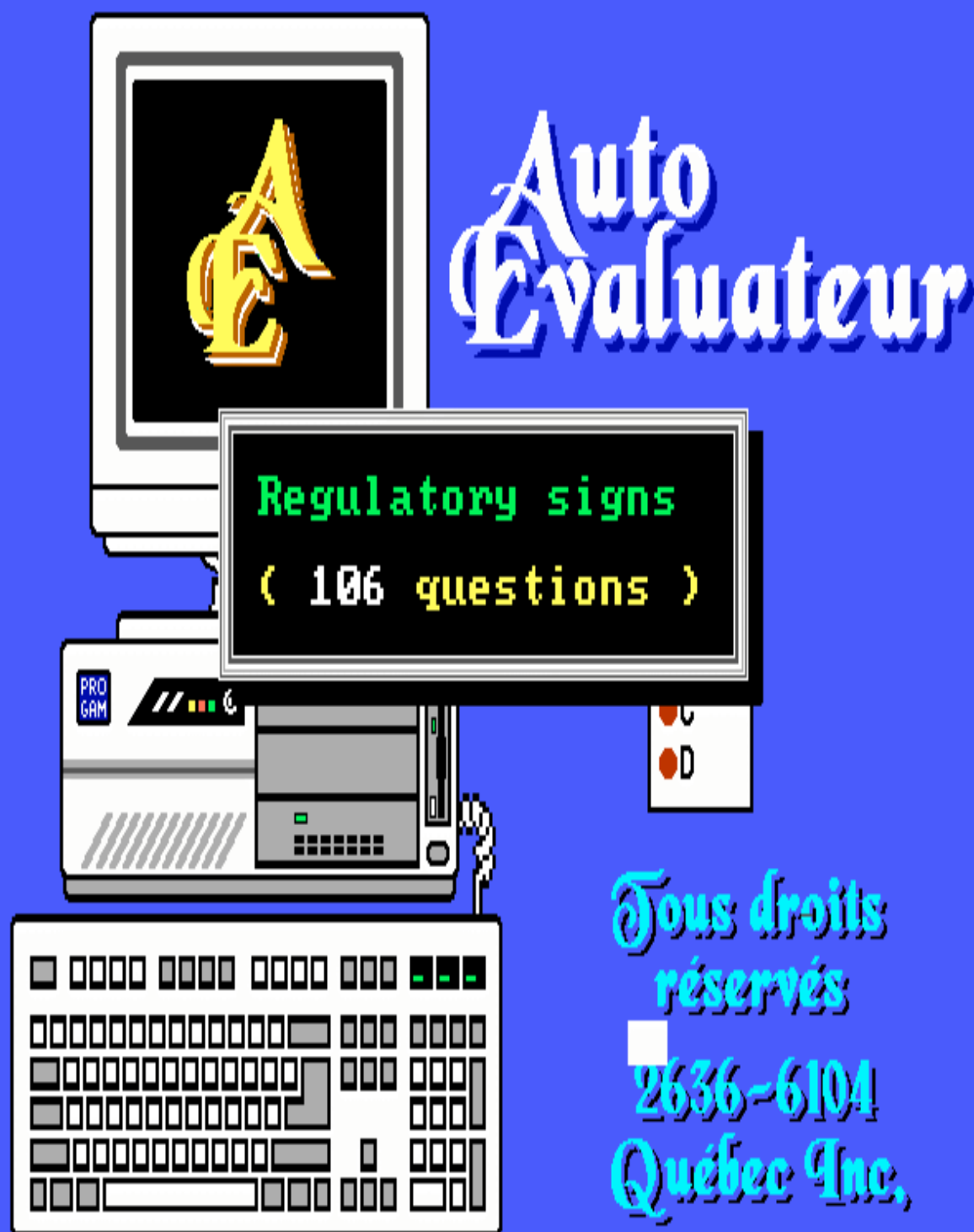



What do these signs
(old and new versions)
mean?

- A) You are approaching a zone where the speed limit will be reduced to 50 km/h
- B) The start of a 50 km/h maximum speed zone
- C) You are nearing a zone where the minimum speed is 50 km/h
- D) The beginning of a 50 km/h minimum speed zone

283< Enter - See the answer #

.283 这些老式和新式的信号是何意思: A 你正接近一个区域,其速度限制是降至 50km/h B 最大速度
为 50km/h 区域的开始 C 你正接近一个区域,其最低速度是 50km/h D 最低速度为 50km/h 区域的开
始 (A)





A white square
road sign
with a green circle
indicates:

- A) obligation to accelerate
- B) no hitchhiking
- C) a prohibition
- D) an obligation

301< Enter - See the answer #

.301 .一个带绿色圆圈的白色方块路标是指: A 必须加速 B 不能搭乘 C 一个禁止 D 必须执行 (D)




This sign is
a reminder that
wearing seat belts
is mandatory.
It applies:

- A) to all occupants of a moving vehicle
- B) to all rear seat passengers only
- C) only on roadways where this sign is posted
- D) to all front seat occupants

302< Enter - See the answer #

.302 这个标志是提醒必须要系安全带,它适用于: A 行驶车辆中的所有乘车者 B 只是所有后排座的乘客 C 只有在贴有该标志的路上 D 所有前排座的乘客 (A)




This sign is intended for:

- A) vehicles of all types
- B) heavy vehicles
- C) carriers of hazardous substances
- D) emergency vehicles

303< Enter - See the answer #

.303 该标志是指: A 所有类型的车辆 B 重型车辆 C 运送危险物质的车辆 D 紧急车辆 (C)




This sign indicates that the road is:

- A) reserved for motorcycles
- B) prohibited to motorcycles
- C) prohibited to bicycles
- D) mandatory for motorcycles

304< Enter - See the answer #

.304 该标志是指这条路是: A 预留给摩托车的 B 禁止摩托车 C 禁止自行车 D 必须是摩托车 (D)



This sign means that:

- A) your lane of traffic must proceed straight
- B) all of the traffic must proceed straight
- C) you are driving on a one-way street
- D) you are approaching a one-way street

305< Enter - See the answer # - - - -

.305 该标志的意思是: A 你的车道必须直行 B 所有的车辆必须直行 C 你行驶在一条单行线上 D 你正接近一条单行线 (B)



This sign indicates that:

- A) your lane of traffic must turn left
- B) you are approaching a sharp left curve
- C) left turns are prohibited
- D) all of the traffic must turn left

306< Enter - See the answer # - - - -

.306 该信号是指: A 你的车道必须左转 B 你正接近一个向左急转的弯道 C 禁止左拐 D 所有的车辆必须左拐 (D)



This sign indicates that:

- A) all of the traffic must go straight or turn left (from the proper lane)
- B) your lane must proceed straight or turn left
- C) driving straight or turning left are prohibited
- D) you must avoid an obstacle by proceeding straight or by turning left

307< Enter - See the answer #

.307 该信号是指: A 所有的车辆必须(从正确的车道)直行或左拐 B 你的车道必须直行或左拐 C 禁止直行或左拐 D 你必须通过直行或左拐避开一个障碍物 (A)



This sign indicates that:

- A) you must pass to the right or left of an obstacle
- B) right and left turns are prohibited
- C) your lane of traffic must turn right or left
- D) all of the traffic must turn right or left (from the appropriate lane)

308< Enter - See the answer #

.308 该信号是指: A 你必须从一个障碍物的左侧或右侧通过 B 禁止左拐或右拐 C 你的车道必须左拐或右拐 D 所有车辆必须(从适宜的车道)左拐或右拐 (D)




What does this road sign mean?

- A) Mandatory maneuvers at an intersection
- B) Applies to heavy vehicles only
- C) The driver may not go straight or turn right
- D) Obligation to proceed straight or turn left

309< Enter - See the answer # - - - -

.309 该路标是何意思: A 在一个交叉路口的强制调遣 B 只适用于重型车辆 C 司机不能直行或右转 D 必须前行或左转 (A)



This road sign:

- A) indicates a lane reserved for right turns
- B) obliges all of the traffic to turn right
- C) is an advance signal for right turns
- D) warns of a sharp right curve ahead

310< Enter - See the answer # - - - -

.310 该信号是指: A 指示一个为右转预留的车道 B 所有的车辆必须右转 C 右转的预先信号 D 警告前方有一个向右的急转弯道 (B)



This sign indicates that:

- A) all trucks must stop for inspection
- B) certain vehicles must stop for an inspection
- C) drivers must check their brakes
- D) you are approaching a steep hill and should use compression

311< Enter - See the answer #

.311 该信号是指: A 所有的卡车必须停车检查 B C 司机必须检查刹车 D 你正接近一个斜坡, 应该加压 (B)

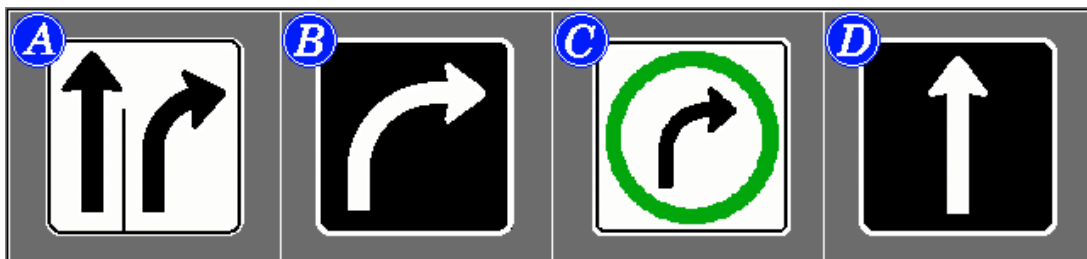


This sign indicates that:

- A) all trucks must stop for inspection
- B) specific types of vehicles must undergo an inspection
- C) drivers of specific types of vehicles must check their brakes
- D) you are approaching a steep hill and should apply the brakes on the downgrade

312< Enter - See the answer #

.312 该信号是指: A 所有的卡车必须停车检查 B 某些特殊型号的的车辆必须停车检查 C 某些特殊型号的车辆的司机必须检查刹车 D 你正接近一个斜坡,应该采用下坡刹车 (C)



Which of these signs obliges
all of the traffic to turn right?

- A) Sign A
- B) Sign B
- C) Sign C
- D) Sign D

313< Enter - See the answer # - - - -

.313 哪一个信号是命令所有车辆右转 A 信号 A B 信号 B C 信号 C D 信号 D (C)



This symbol,
a red circle with
red diagonal bar,
indicates:

- A) the obligation
to reduce speed
- B) a hazard ahead
- C) a prohibition
- D) an obligation

314< Enter - See the answer # - - - -

.314 这个带红色斜线的红色圆圈信号是指: A 必须减速 B 前方有危险 C 一个禁止 D 一个命令 (C)



What is the meaning
of this sign?

- A) No parking for motorcycles
- B) Access prohibited to motorcycles
- C) No stopping for motorcycles
- D) The beginning of a no passing zone for motorcycles

315< Enter - See the answer #

.315 该信号是何意思: A 摩托车不能停放 B 禁止摩托车通行 C 摩托车不能停车 D 摩托车不能通过区域的开始 (B)



What is the
meaning of this
prohibition
sign?

- A) No left turns
- B) Turns prohibited in either direction
- C) Reverse-curve ahead
- D) No U-turns

316< Enter - See the answer #

.316 这个禁止信号的意思是: A 不能左转 B 禁止向任何方向转 C 前方有反向弯道 D 不能 U 型转弯 (D)




This road sign indicates:

- A) no parking
- B) parking prohibited during the periods specified
- C) stopping prohibited at the stop sign at the indicated hours
- D) no stopping during the periods specified

317< Enter - See the answer #

.317 该路标是指: A 不能停放 B 在特殊的时间段内禁止停放 C 在所示时间段内禁止在该停车牌旁停车 D 在此特定时间段内禁止停车 (D)



This sign indicates that:

- A) proceeding straight is prohibited
- B) you must drive straight only
- C) this is a one-way street
- D) this two-way street is changing into a one-way

318< Enter - See the answer #

.318 该信号是指: A 禁止直行 B 你必须只是直行 C 这是一个单行道 D 该双行道变成单行道 (A)



This sign means that:

- A) stopping is prohibited
- B) parking is permitted
- C) passing is prohibited
- D) parking is prohibited

319< Enter - See the answer #

.319 该信号是指: A 禁止停车 B 允许停放 C 禁止通行 D 禁止停放 (D)




This sign indicates that:

- A) access to pedestrians and motorcycles is permitted
- B) access to pedestrians and motorcyclists is prohibited
- C) motorcyclists must park their bikes and proceed on foot
- D) motorcyclists must not take on passengers

320< Enter - See the answer #

.320 该信号是指: A 行人通道并允许摩托车通行 B 行人通道并禁止摩托车通行 C 摩托车必须停放并步行向前 (B)



This sign means that:

A) traffic in the right lane must turn right


B) traffic in the right lane is not permitted to turn left

C) right turns are prohibited

D) you must drive to the right of an obstacle

321< Enter - See the answer # - - -

.321 该信号是指: A 在右车道的车辆必须右转 B 在右车道的车辆不允许左转 C 禁止右转 D 你必须行驶在障碍物的右侧 (C)



This sign means that ...

A) trucks that weigh 42 tons or more are prohibited except for local delivery


B) trucks that weigh 42 tons or more are permitted except for local delivery

C) trucks that weigh less than 42 tons are not allowed making deliveries in this sector

D) no trucks that weigh more are allowed making deliveries in this sector

322< Enter - See the answer # - - -

.322 该信号的意思是: A 除了本地送货车载重是 42 吨或更多的卡车禁止通行 B 除了本地送货车载重是 42 吨或更多的卡车允许通行 C 载重小于 42 吨的卡车在此地区不允许送货 D 载重超重的卡车不允许在此地区送货 (A)




This sign means that ...

- A) only trucks that are 42 meters long or longer may have access
- B) trucks that are 42 meters long and longer are denied access except for local deliveries
- C) 42 meter trucks or shorter are not allowed making local deliveries
- D) only trucks that are 42 meters long or longer are allowed making local deliveries

323< Enter - See the answer #

.323 该信号是指: A 只有 42 米长或更长的卡车可以通过 B 除了本地送货车 42 米长或更长的卡车禁止通行 C 42 米长或更短的卡车不允许在本地交货 D 只有 42 米长或更长的卡车允许在本地交货 (B)



This sign means:

- A) no trucks on this highway
- B) trucks must drive in this lane
- C) no trucks on this street
- D) no trucks in the lane under this sign

324< Enter - See the answer #

.324 该信号是指: A 该公路禁止卡车通行 B 卡车必须在此车道行驶 C 此路禁止卡车 D 在此信号下的车道禁止卡车 (D)



This sign means:

- A) no access to pedestrians and cyclists
- B) access permitted to pedestrians and cyclists
- C) cyclists must leave their bikes and continue on foot
- D) cyclists are prohibited from taking on passengers

325< Enter - See the answer # - - - -

.325 该信号是指： A 自行车和行人禁止通行 B 自行车和行人允许通行 C 自行车必须停放自行车，步行继续前行 D 自行车禁止带人 (A)




This sign means:

- A) passing is permitted on this side of the street
- B) no passing on this side of the street
- C) no parking on this side of the street, in this zone
- D) parking is permitted along this side of the street

326< Enter - See the answer # - - - -

.326 该信号是指: A 在公路的这一侧允许通过 B 在公路的这一侧不能通过 C 在此区域 公路的这一侧不能停放 D 在此区域 公路的这一侧允许停放 (C)




This sign indicates:

- A) parking is prohibited on both sides of the roadway
- B) stopping is prohibited on both sides of the roadway
- C) parking is prohibited on this side of the roadway
- D) stopping is prohibited on this side of the roadway

327< Enter - See the answer #

.327 该信号是指: A 在公路的任一侧禁止停放 B 在公路的任一侧禁止停车 C 在公路的这一侧禁止停放 D 在公路的这一侧禁止停车 (C)



This sign indicates:

- A) do not enter the campground
- B) camping is prohibited
- C) a route prohibited to campers
- D) the campground is not located in this direction

328< Enter - See the answer #

.328 该信号是指: A 不要进入露营地 B 禁止露营 C 露营者禁止走此路线 D 露营地不在此方向 (B)



What does this sign mean?

- A) Access prohibited to carriers of hazardous substances
- B) Throwing open cans on the roadway is prohibited
- C) No toxic wastes
- D) No littering

329< Enter - See the answer #

329 该信号是何意思： A 装有危险品的运输车禁止通行 B 禁止在此路上扔打开的罐头 C 禁止有毒垃圾 D 禁止乱扔 (D)



What is the meaning of this sign?

- A) No littering
- B) No stopping
- C) Access prohibited to vehicles transporting hazardous substances
- D) Access prohibited to all trucks

330< Enter - See the answer #

330 该信号是何意思： A 禁止乱扔 B 禁止停车 C 装有危险品的运输车禁止通行 D 禁止一切卡车通行 (C)



What does this sign mean?

- A) You must turn right only
- B) You must not turn left
- C) Hidden intersection ahead
- D) You are approaching a traffic island

331< Enter - See the answer # - - - -

.331 该信号是何意思: A 你必须只向右转 B 你必须不向左转 C 前方有一隐蔽的交叉口 D 你正接近一个交通岛 (B)



This sign means:

- A) the end of a bicycle path
- B) no cyclists allowed
- C) a mandatory route for cyclists
- D) an advance warning of a bicycle crossing

332< Enter - See the answer # - - - -

.332 该信号是何意思: A 自行车道的终点 B 不允许自行车通过 C 自行车的强制路线 D 有自行车横过的预先警告 (B)

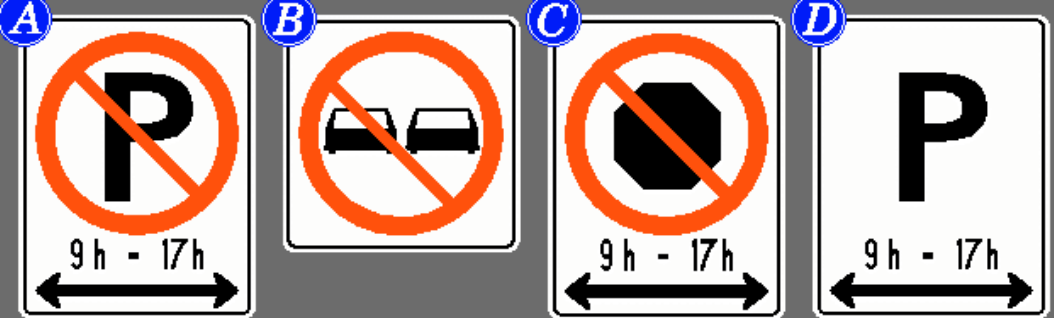


When posted together,
these signs indicate
the end of a:

A) two lane street
B) two-way street
C) no passing zone
D) zone prohibited
to automobiles

333< Enter - See the answer # - - - -

.333 这些信号贴在一起表示什么的结束: A 两车道公路 B 双向公路 C 不允许超车区域 D 汽车禁止通过区域 (C)

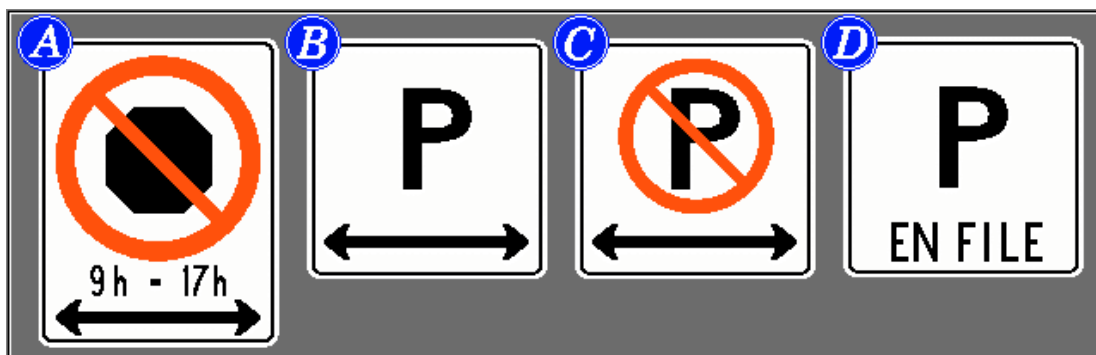


Which of these signs
indicates stopping is prohibited?

A) Sign B
B) Sign C
C) Sign D
D) Sign A

334< Enter - See the answer # - - - -

.334 这些信号哪一个是指禁止停车 A 信号 B B 信号 C C 信号 D D 信号 A (B)

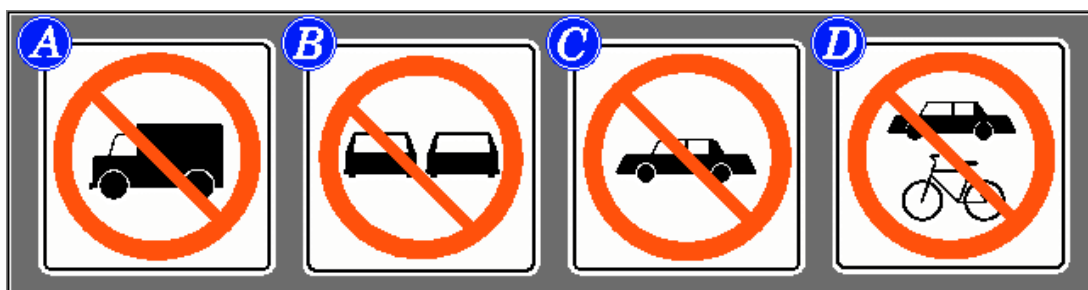


Which of these signs
prohibits parking in this zone?

- A) Sign C
- B) Sign D
- C) Sign B
- D) Sign A

335< Enter - See the answer #

.335 这些信号哪一个是指禁止停放 A 信号 C B 信号 D C 信号 B D 信号 A
(A)

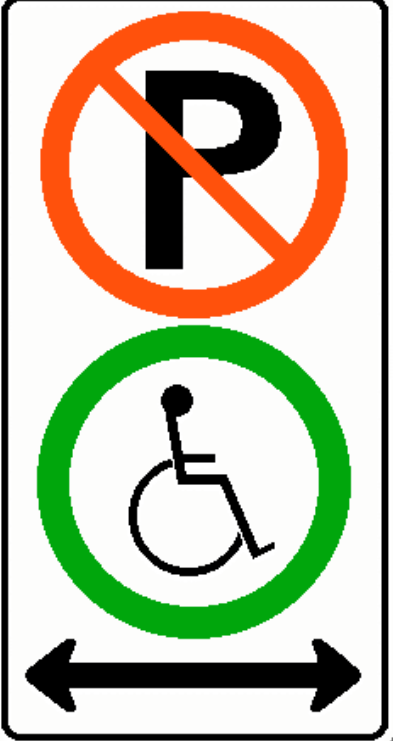


Which of these signs indicates
the beginning of a no-passing zone?

- A) Sign A
- B) Sign B
- C) Sign C
- D) Sign D

336< Enter - See the answer #

.336 这些信号哪一个是指禁止超车区域的开始 A 信号 A B 信号 B C 信号 C D 信号 D
(B)




This sign indicates that:

- A) parking is prohibited on this side of the street
- B) handicapped drivers are not permitted to park on this side of the street
- C) handicapped drivers are never allowed to park
- D) parking in this zone is reserved for the handicapped only

337< Enter - See the answer # - - -

.337 这个信号是指 A 禁止在路的这一侧停放 B 残疾人司机不允许在路的这一侧停放 C 残疾人司机永远不允许停放 D 这一停车区只留给残疾人 (D)




This sign, installed above a lane, indicates that:

- A) you must turn left from this lane
- B) the entire traffic flow must turn left
- C) you must change lane towards your left
- D) this lane ends, you must merge into the left lane

338< Enter - See the answer # - - -

.338 该信号安装在车道上方是指: A 你必须从这一车道左转 B 全部的车流都必须左转 C 你必须朝你的左方换车道 D 这一车道终止,你必须并入左车道 (A)



This sign,
installed above a
lane,
indicates that:

- A) drivers in this lane must turn right or left
- B) all drivers must turn right or left
- C) drivers must pass to the right or to the left of an obstacle
- D) you are approaching a "T" intersection

339< Enter - See the answer #

.339 该信号安装在车道上方是指: A 这一车道的司机必须向右转或向左转 B 所有的司机必须向右转或向左转 C 司机必须从障碍物的左侧或右侧通过 D 你正接近一个T型交叉路口 (A)



This
lane direction sign:

- A) warns of oncoming traffic that may be turning left
- B) is a mandatory left turn for all classes of vehicles
- C) obliges trucks to turn left
- D) designates a reserved lane for left turns from both directions

340< Enter - See the answer #

.340 这一车道方向信号 A 警告迎面而来的车辆正向左转 B 所有类型的车辆都必须左转 C 命令卡车左转 D 为来自两个方向的左转车辆指定一个预留车道 (D)



This
lane direction sign:

- A) warns of oncoming traffic that may turn left
- B) obliges all drivers in this lane to turn right
- C) applies only to truck drivers
- D) obliges all of the traffic on this road to turn right

341< Enter - See the answer # - - - -

.341 这一车道方向信号 A 警告迎面而来的车辆可能向左转 B 命令该车道所有的司机向右转 C 只适用于卡车司机 D 命令该公路上所有的司机向右转 (B)



What does this sign,
installed above a
lane,
mean?

- A) One-way traffic
- B) Mandatory route for trucks
- C) All the traffic on this road must proceed straight
- D) All drivers in this lane must proceed straight

342< Enter - See the answer # - - - -

.342 该信号安装在车道上方是何意思： A 单向通行 B 卡车的强制路线 C 该公路上所有的车辆必须直行 D 该车道上所有的车辆必须直行 (D)



This sign,
posted along the road,
indicates that:

- A) drivers in the right lane must turn right
- B) your lane is merging with the right lane
- C) all drivers must turn right from this street
- D) you must drive to the right of an obstacle

343< Enter - See the answer # - - - -

.343 该信号贴在路边是指: A 在右车道的司机必须右转 B 你的车道正并入右车道 C 所有的司机必须从此公路右转 D 你必须从障碍物的右侧行驶 (A)




This sign,
erected along the road,
indicates that:

- A) trucks and slow moving vehicles must keep right
- B) you must detour because of road repairs
- C) you must pass to the right of an obstacle
- D) drivers in the two right-hand lanes must turn right

344< Enter - See the answer # - - - -

.344 该信号树立在路边是指: A 卡车和慢行的车辆必须靠右 B 因修路你必须绕行 C 你必须从障碍物的右侧通过 D 在右侧两个车道的司机必须右转 (D)



This sign,
erected along the
road,
indicates that:

A) trucks must drive
in the left lane

B) drivers in this lane may turn
left or proceed straight

C) drivers in the left lane must turn
left and drivers in the adjacent
lane must proceed straight ahead

D) drivers in the left lane must pass
to the left of an obstacle and
drivers in the right lane must
proceed straight ahead

345< Enter - See the answer #

.345 该信号树立在路边是指： A 卡车必须在左车道行驶 B 在此车道的司机可以直行或左转 C 在左车道的司机必须左转,在相邻车道的司机必须直行 D 在左车道的司机必须从左侧通过障碍物,在右车道的司机必须直行 (C)



This sign,
posted along the
road,
indicates that:

A) trucks must exit
to the left

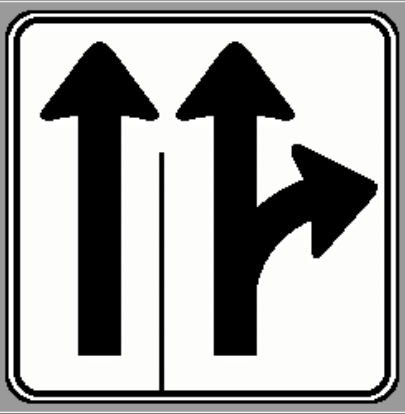
B) drivers in the left lane may
turn left or proceed straight

C) vehicles carrying hazardous
materials must turn left

D) the traffic in the left lane
may exit to a rest area

346< Enter - See the answer #

.346 该信号贴在路边是指: A 卡车必须从左侧离开 B 在左车道的司机可以左转或直行 C 装载危险品的车辆必须左转 D 在左车道的车辆可以退到其他地区 (B)




This road sign,
posted at the
side of the roadway,
means that:

- A) trucks must exit to the right
- B) drivers in the right lane may turn right or proceed straight
- C) vehicles carrying hazardous materials must exit right
- D) the right lane offers drivers access to a parking lot

347< Enter - See the answer #

347 该信号贴在路边是指: A 卡车必须从右侧离开 B 在右车道的司机可以直行或右转 C 装载危险品的车辆必须从右侧离开 D 在右车道为司机提供一个停车场的入口 (B)



This road sign
indicates
that drivers
in the right lane
may proceed straight
or turn right
and those
in the left lane:

- A) must turn left
- B) must pass to the left of an obstacle
- C) may turn towards a rest area
- D) may make a U-turn

348< Enter - See the answer #

348 该路标是指: 在右车道的司机可以向前直行或右转,在左车道的司机 A 必须左转 B 必须从左侧通过障碍物 C 可以转向其他地区 D 可以做 U 型转弯 (A)

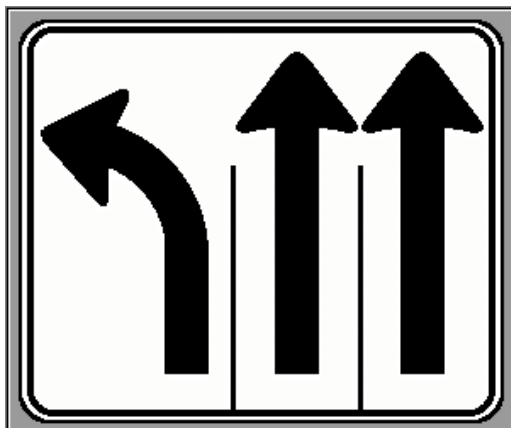


This sign,
posted at the side
of the road,
informs drivers that:

- A) in the two left lanes they must turn left
- B) in the left lane, they must turn left; in the adjacent lane they may turn left or proceed straight
- C) in the two left lanes, they may proceed straight or turn left
- D) truck drivers must turn left

349< Enter - See the answer #

.349 该路标贴在路边是通知司机: A 在左侧的两个车道必须左转 B 在左车道必须左转,在相邻车道的可以左转或直行 C 在左边两个车道,他们必须直行或左转 D 卡车司机必须左转 (B)

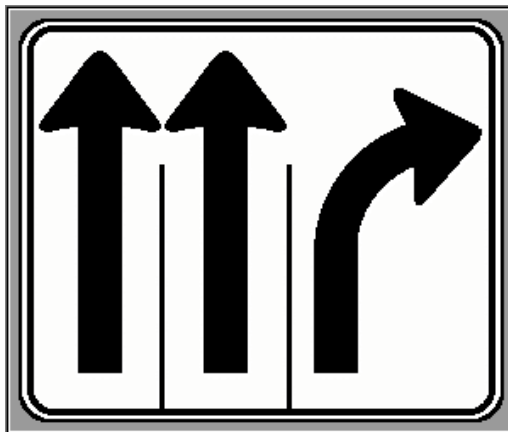


This sign,
erected
along the roadway,
informs drivers
that:

- A) in the left lane they must drive to the left of an obstacle; the others must proceed straight
- B) the left lane provides access to a public emergency telephone
- C) in the left lane they must turn left; others must proceed straight
- D) truck drivers must exit to the left

350< Enter - See the answer #

.350 该竖立在路边的信号是通知司机: A 在左车道必须从障碍物的左侧行驶,其他必须直行 B 左车道可通往公共紧急电话 C 左车道必须左转,其他必须直行 D 卡车司机必须退到左边 (C)



This road sign,
posted
along the roadway,
informs drivers
that in the right
lane:

A) they must keep
right of an
obstacle; others
must proceed
straight

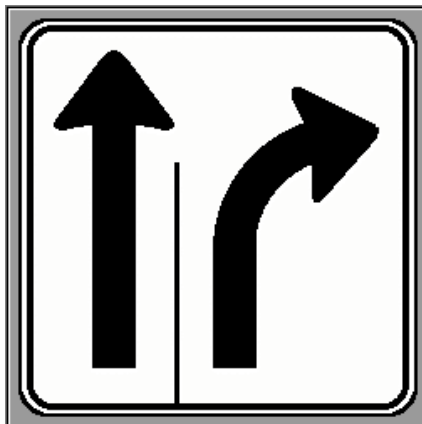
B) they have access to a rest area

C) they must turn right; in the other
lanes they must proceed straight

D) truck drivers must exit to the
right

351< Enter - See the answer #

.351 该竖立在路边的信号是通知司机在右车道: A 必须从障碍物的右侧行驶,其他必须直行 B 他们可以进入其他地区 C 他们必须右转,在其他车道的必须直行 D 卡车司机必须退到右边 (C)



This sign,
posted along the
roadway:

A) obliges drivers
in the right lane
to turn right and
in the adjacent
lane to proceed
straight

B) indicates the beginning of
a one-way road

C) indicates vehicles may only
pass using the left lane

D) warns of a detour ahead for
vehicles in the right lane

352< Enter - See the answer #

.352 该贴在路边的信号 A 强制在右车道的司机右转,在相邻车道的直行 B 指示一个单行道的开始 C 指示车辆只能从左车道通过 D 警告在右车道的车辆前方绕行 (A)



This sign indicates:

- A) only 3 buses or cabs may drive in this lane
- B) only buses and cabs with 3 occupants or more may drive in this lane

- C) this lane is reserved for buses, cabs and vehicles with 3 or more occupants on board
- D) buses and cabs are allowed parking for 3 hours

353< Enter - See the answer #

.353 该信号是指: A 只能有 3 辆公共汽车或出租车在此车道行驶 B 只有乘客在 3 人或以上公共汽车和出租车可以在此道行驶 C 该车道是预留给载有 3 人或以上公共汽车、出租车和车辆的 D 公共汽车和出租车允许在此停放 3 小时. (C)




This sign means that:

- A) this lane may not be used by buses and cabs at the posted times
- B) this lane is reserved for buses and cabs at the posted times

- C) buses and cabs may park during the periods indicated
- D) you must yield the right-of-way to buses and cabs that exit this lane at the posted times

354< Enter - See the answer #

.354 该信号是指 B 该车道在所示时间段预留公共汽车和出租车




This sign indicates:

- A) the beginning of a lane, reserved for buses
- B) buses must not use this lane from this point forward
- C) the end of a reserved lane
- D) that as of this point there are no more buses

355< Enter - See the answer #

.355 该信号是指 C 预留车道的终止



What does this sign indicate?

- A) A bicycle path
- B) A bicycle crossing
- C) A bicycle crossing ahead
- D) A reserved lane for bicycles

356< Enter - See the answer #

.356 该信号是指 D 自行车的预留车道



This road sign indicates:

- A) that in the reserved lane, traffic moves in an oncoming direction
- B) that in the reserved lane, traffic moves in the same direction
- C) that a lane is reserved for a particular purpose
- D) a change in the horizontal alignment of the roadway

357< Enter - See the answer #

.357 该信号是指:A 在预留车道,车辆的行驶方向是迎面而来的方向



This road sign indicates:

- A) that in the reserved lane, traffic moves in an oncoming direction
- B) that in the reserved lane, traffic moves in the same direction
- C) that a lane is reserved for a particular purpose
- D) a change in the horizontal alignment of the roadway

358< Enter - See the answer #

.358 该信号是指 B 在预留车道,车辆的行驶方向是与车辆行驶相同的方向

A

B

C

D

Which sign indicates

that a lane

is reserved for oncoming traffic?

A) Sign **A**

B) Sign **B**

C) Sign **C**

D) Sign **D**

359< **Enter** - See the answer #

.359 哪一个信号是指：为迎面而来的车辆预留的车道 D 信号 D

This road sign

indicates:

A) the end of a reserved lane (oncoming traffic)

B) the end of a reserved lane for buses

C) the end of a reserved lane (traffic in the same direction)

D) the end of a lane reserved for tow trucks on an expressway

360< **Enter** - See the answer #

.360 该路标表示: A 预留车道的终止 (迎面而来方向)




This road sign indicates you have reached:

- A) a snowmobile parking lot
- B) a snowmobile crossing
- C) a snowmobile competition
- D) a snowmobile show

361< Enter - See the answer #

.361 该路标表示 你已到达 B 机动雪橇横越处



This sign indicates:

- A) you are approaching a pedestrian and cyclist crossing
- B) you are at a pedestrian and cyclist crossing
- C) cyclists must yield to pedestrians
- D) pedestrians must yield to cyclists

362< Enter - See the answer #

.362 该路标表示 B 你处在行人和自行车的横越处




This sign indicates:

- A) a crossing for the visually impaired
- B) a pedestrian crossing
- C) an advance sign for a pedestrian crossing
- D) an advance sign for a crosswalk for visually impaired persons

363< Enter - See the answer #

.363 该路标表示 A 视觉障碍者的横越处

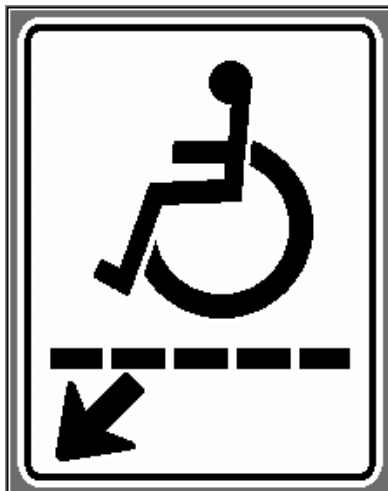


**What does
this road sign
indicate?**

- A) Bicycle crossing
- B) Bicycle crossing ahead
- C) Reserved lane for bicycles
- D) Mandatory cyclist crossing

364< Enter - See the answer #

.364 该路标是何意思 A 自行车横越处



What does
this road sign
indicate?

- A) Crosswalk for disabled persons
- B) Reserved parking for handicapped
- C) Crosswalk for disabled persons ahead
- D) Path reserved for wheelchairs

365< Enter - See the answer #

.365 该路标是何意思 A 残疾人的人行横道线



What is the
meaning
of this road sign?

- A) Pedestrian crosswalk
- B) Advance school crosswalk
- C) Beginning of a school zone
- D) School crosswalk

366< Enter - See the answer #

,366 该路标是何意思 D 学校的人行横道线

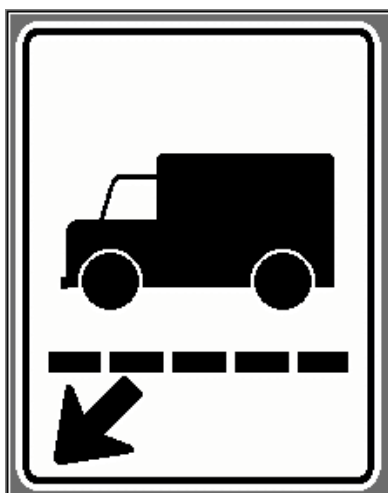


This sign will be posted near:

- A) a school
- B) a church
- C) a playground
- D) a basketball court

367< Enter - See the answer #

.367 该信号贴在什么附近 C 运动场



What does this sign indicate?

- A) Advance truck crossing
- B) Weigh station
- C) Truck crossing
- D) Mandatory route for trucks

368< Enter - See the answer #

.368 该路标是何意思 C 卡车横越处




This road sign
indicates:

- A) the beginning of
a school zone
- B) a school crosswalk
- C) a pedestrian
crosswalk
- D) a playground ahead

369< Enter - See the answer #

.369 该路标是指: C 行人的行人横道线

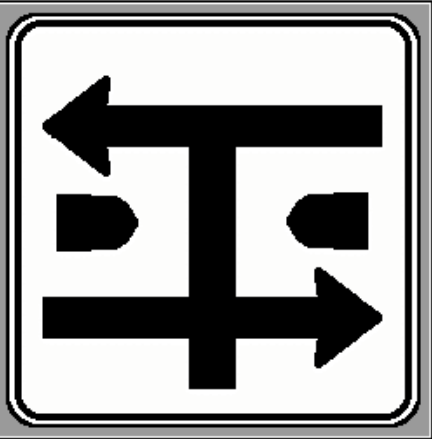


This sign indicates
your roadway
is intersecting with:

- A) a railway crossing
- B) another roadway divided by
a median
- C) two one-way roads
- D) two bicycle paths

370< Enter - See the answer #

.370 该路标是指你所走公路正与何交叉? B 另一条中央被隔开的公路



This sign indicates
your roadway
intersects with:

- A) a railway crossing and ends at this point
- B) two one-way streets and ends at this point
- C) two bicycle paths and ends at this point
- D) another roadway divided by a median and ends at this point

371< Enter - See the answer #

.371 该路标是指你所走公路正与何交叉? D 另一条中央被隔开的公路, 并在此终止



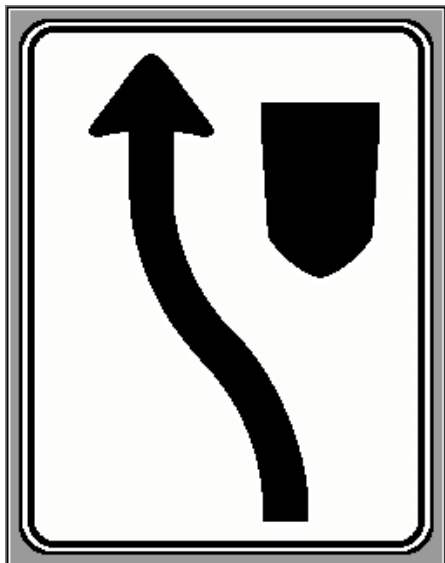
This road sign
indicates:

- A) a road divided by a median ends as it intersects with your road

- B) two one-way streets meet your roadway on the left
- C) you are driving by a parking lot (exit and entrance)
- D) the traffic coming from your left may make a U-turn

372< Enter - See the answer #

.372 该路标是指: A 一条中央被隔开的公路, 在与你所在公路交叉时终止

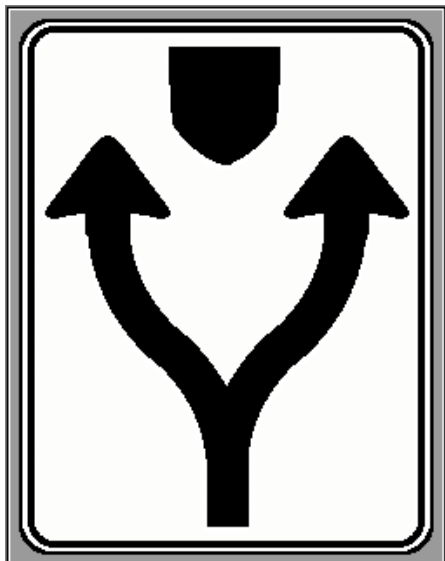


This sign indicates:

- A) the beginning of a one-way street
- B) oncoming traffic is approaching from the right
- C) you must pass to the left of an obstacle
- D) access to private property

373< Enter - See the answer #

.373 该路标是指: C 你必须从一障碍物的左侧通过




This sign indicates:

- A) the beginning of a one-way street
- B) a fork in the road and you must choose a road
- C) you may pass to the right or left of the obstacle
- D) you are approaching a toll booth, get your money ready

374< Enter - See the answer #

.374 该路标是指: C 你可以从障碍物的左侧或右侧通过



This road sign indicates:

- A) pass to the right of the obstacle
- B) a reverse curve
- C) the beginning of two-way traffic
- D) the road narrows on the left

375< Enter - See the answer #

.375 该路标是指: A 从障碍物的右侧通过



When you see this sign, you must:

- A) drive as close as possible to the center of the roadway
- B) accelerate to clear the school zone quickly
- C) stop as quickly as possible
- D) slow down and check the sides of the road for children

376< Enter - See the answer #

.376 当看到此路标,你必须 D 减速并检查路两旁是否有小孩

Which road sign indicates the beginning of a school zone?

A) Sign A
B) Sign B
C) Sign C
D) Sign D

377< Enter - See the answer #

.377 哪个路标代表学校区的开始: C 路标 C

This sign indicates pedestrians and cyclists must push the button:

A) to control the speed of traffic
B) to control the traffic lights
C) to activate the crossing lights
D) to reactivate the traffic lights if they are out of order

378< Enter - See the answer #

.378 该信号是指行人和骑自行车者必须按此按钮 C 启动横越信号灯



This sign indicates
pedestrians
must push the button:

- A) to control the speed of traffic
- B) to control the traffic lights
- C) to activate the pedestrian crossing lights
- D) to reactivate the traffic lights if they are out of order

379< Enter - See the answer #

.379 该信号是指行人必须按此按钮 C 启动行人横越信号灯



This road sign
indicates:

- A) access for disabled persons
- B) seating for disabled persons
- C) disabled persons crossing
- D) disabled persons crossing ahead

380< Enter - See the answer #

.380 该信号是指: A 残疾人通道

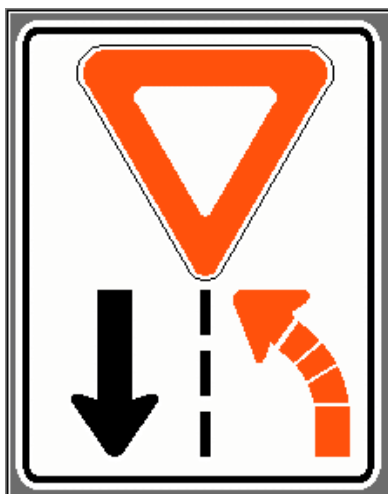


This road sign
indicates:

- A) that you must be given the right-of-way
- B) a mandatory stop
- C) an obligation to yield the right-of-way
- D) the end of the road

381< Enter - See the answer #

.381 该路标是指 C 有义务出让通行权



What is the meaning
of this sign?

- A) Obligatory left turn at the yield sign
- B) Yield sign ahead
- C) Drivers must yield the right-of-way to oncoming traffic
- D) Yield the right-of-way at the stop line after the turn

382< Enter - See the answer #

.382 该路标是何意思 C 司机必须为迎面而来的车辆出让通行权

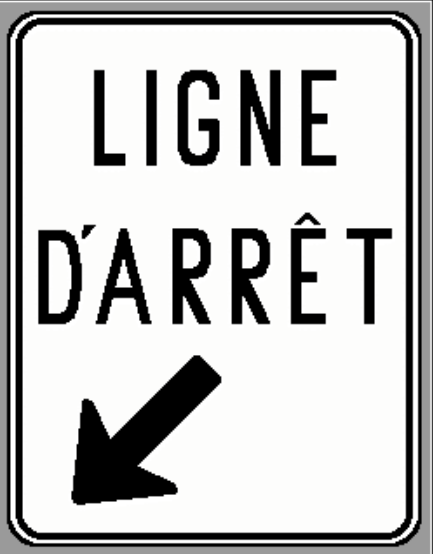


What is this road sign?

- A) A stop sign for designated intersections
- B) An articulated stop sign on a school bus
- C) A sign attached to a slow moving vehicle
- D) A yield sign

383< Enter - See the answer #

.383 该路标是何意思 B 在校车上的一个明确表示的停车信号



This road sign installed near some intersections with traffic lights:

- A) requires drivers to stop when any pedestrians are crossing
- B) applies only to city buses
- C) indicates a stop for all vehicles at all times
- D) indicates where to stop your vehicle if the traffic light is red

384< Enter - See the answer #

.384 该路标安装在有信号灯的交叉路口附近 D 表示如果信号灯是红色,你的车应停在何处




Which diagram illustrates a vehicle that has stopped correctly?

A) Diagram A
B) Diagram D
C) Diagram C
D) Diagram B

385< Enter - See the answer #

.385 哪一个图表示车辆停的正确 B 图 D



What does this sign mean?

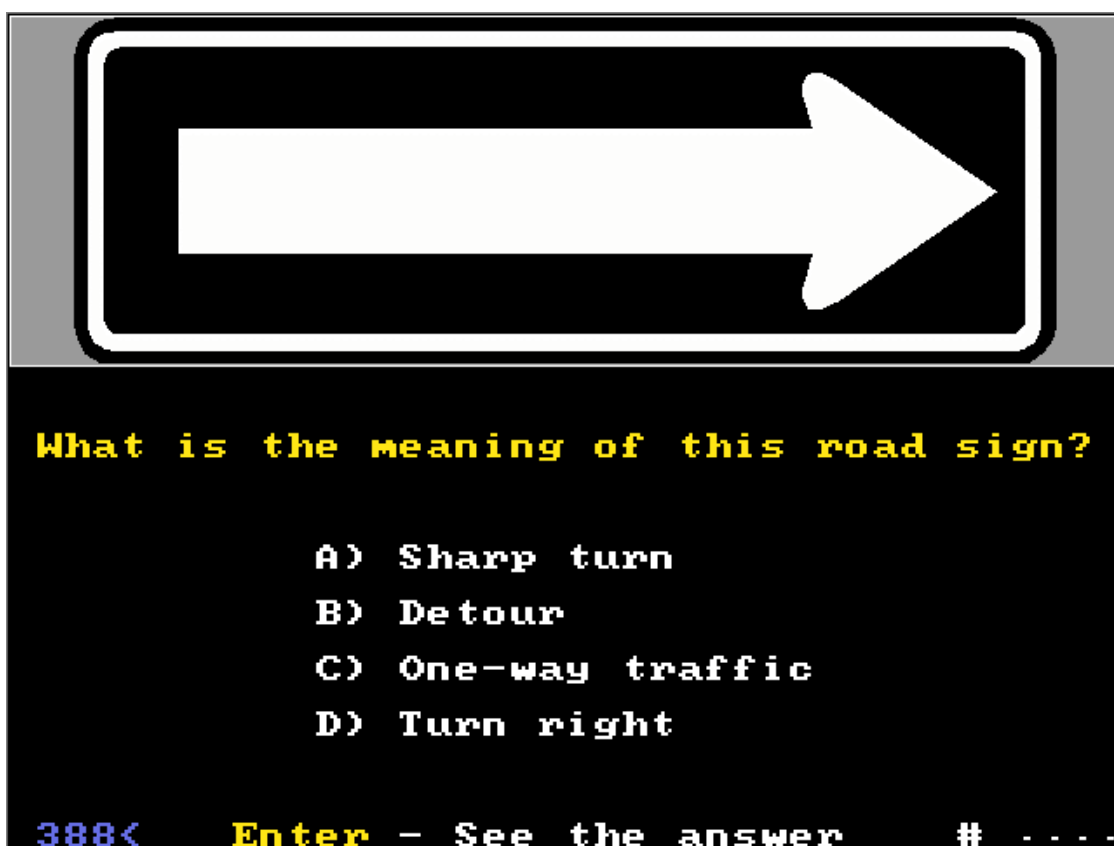
A) Access is prohibited for all vehicles
B) No U-turn
C) Stop sign ahead
D) Snow-covered road

386< Enter - See the answer #

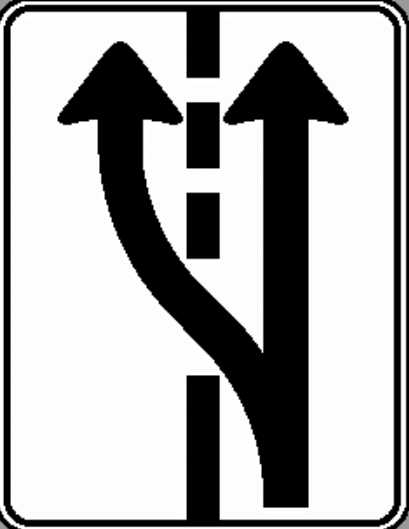
.386 该路标是何意思 A 禁止一切车辆通过



.387 该路标是何意思 C 定向标志



.388 该路标是何意思 C 单向通行



This road sign indicates:

- A) the obligation to pass or overtake
- B) the beginning of a one-way road
- C) pass on either side of an obstacle
- D) the beginning of a passing zone

389< Enter - See the answer #

.389 该路标是指 B 单向路的开始



This road sign indicates:

- A) two-way traffic ahead
- B) one-way traffic ends and two-way traffic begins
- C) the end of a no passing zone
- D) two-way traffic ends and one-way traffic begins

390< Enter - See the answer #

.390 该路标是指: B 单向道的终止和双向道的开始

A


B


C



D


Unless a sign indicates otherwise,
which sign indicates
the authorized speed limit
in cities, towns and villages?

A) Sign A
 B) Sign B
 C) Sign C
 D) Sign D

391< Enter - See the answer # - - - -

.391 哪一个路标是指在城市,小镇或村庄 经批准的速度限制 (不包括有其他意思的的信号) C 信号 C



This tab sign,
posted below a sign
that regulates parking
indicates:

A) reserved parking for
tow trucks
 B) illegally parked trucks
may be towed
 C) no tow trucks
 D) all vehicles in violation
could be towed

392< Enter - See the answer # - - - -

.392 这个信号贴在一个管理停放车辆的信号旁,是表示: (D).所有违反的车辆会被拖走

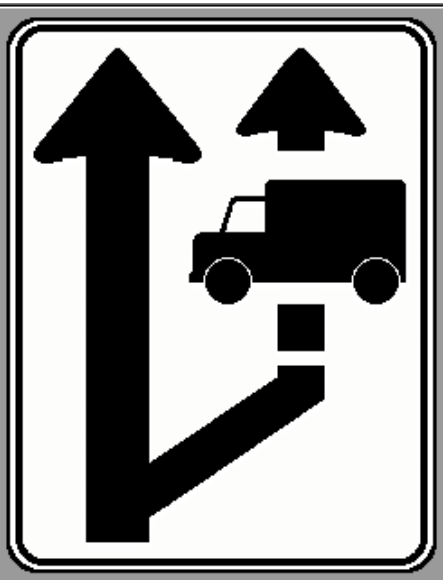


This sign with a numeral indicates
the minimum number of occupants
required in a vehicle
in order to:

- A) use the reserved lane
- B) enter the expressway
- C) drive on country roads
- D) drive on city streets

393< Enter - See the answer #

.393 该带有数字的信号是指要求在一个车里乘客的最少人数,以便: A 可用预留车道



This sign indicates:

- A) an obligation only for truck drivers
- B) that the right lane is reserved for trucks
- C) an exit on the right for trucks
- D) that operators of slow-moving vehicles must use the right-hand lane

394< Enter - See the answer #

.394 该信号是指: D 那些行驶缓慢的车辆必须用右车道.

A

B

C

D

Which of these signs
indicates the beginning of a reserved
lane for vehicles
climbing a hill in low gear?

A) Sign A
 B) Sign B
 C) Sign C
 D) Sign D

395< **Enter** - See the answer #

.395 哪一个信号是指为低速档爬坡的车辆预留的车道的开始? A 信号 A

A

B

C

D

Which of these signs indicates
a weigh station?

A) Sign A
 B) Sign C
 C) Sign B
 D) Sign D

396< **Enter** - See the answer #

.396 哪一个信号是指一个称重站 A 信号 A




This sign indicates:

- A) trucks must keep right
- B) trucks must stop at weigh station when amber lights are flashing
- C) truck drivers may get help if they need it
- D) truck drivers must have the brakes checked when the amber lights are flashing

397< Enter - See the answer #

.397 该信号是指: B 当黄灯闪烁时,卡车必须在称重站停车



This sign indicates:

- A) that lanes are reserved for loaded and empty trucks
- B) that loaded trucks must leave the road
- C) the direction to take at the weigh station depending on whether the trucks are loaded or empty
- D) in this area there are separate roads for loaded and empty trucks

398< Enter - See the answer #

.398 该信号是指 C 在称重站的行车方向取决于卡车是负载还是空车

MAXIMUM

t

t

UN VÉHICULE
À LA FOIS

If the gross weight of a truck is within the posted maximum weight, this tab indicates:

- A) only the first truck to reach the bridge may cross
- B) only one truck a day may cross
- C) only one such truck at a time is allowed to cross
- D) if the weight of the truck exceeds the posted maximum only one truck at a time may cross

399< Enter - See the answer #

.399 该标志是指:如果卡车的毛重在所示重量之内,C 这样的卡车一次只允许通过一辆

MAXIMUM

t

t

4 km


→

If the gross weight of a truck exceeds the maximum weight posted on this sign, the tab informs the driver:

- A) the truck cannot proceed for the next 4 km
- B) the truck is 4 km from a bridge which it is not allowed to cross
- C) the truck must make a 4 km detour around the area
- D) a truck weigh station is 4 km from here

400< Enter - See the answer #

.400 该标志提醒司机, 如果卡车的毛重超过所示重量, B 不允许通过距此 4km 的桥



This sign indicates:

- A) trucks are prohibited during the thaw season
- B) weight restrictions are to be respected during the thaw season
- C) trucks are not permitted to drive on rivers any more
- D) trucks must be equipped with extra wheels to better distribute the weight they are carrying

401< **Enter** - See the answer #

.401 该标志是指: B 在解冻的季节必须注意重量限制




This sign indicates:

- A) the horizontal clearance of the lane
- B) the distance to a stop line ahead
- C) overhead clearance under the bridge or the viaduct
- D) the overhead clearance under a bridge or a viaduct ahead

402< **Enter** - See the answer #

.402 该标志是指 C 桥或高架桥下方的空间高度

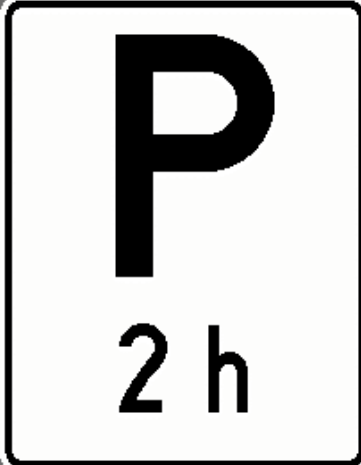


This sign indicates:

- A) the presence of a parking lot for truck drivers who do not feel well
- B) a steep hill with an emergency stop ramp
- C) a hill where truck drivers must be ready to assist car drivers that are in trouble
- D) a steep hill where truck drivers must use compression

403< Enter - See the answer #

.403 该标志是指 B 一个陡峭的坡,并带有一个紧急停车坡道.




This sign indicates:

- A) a no parking zone
- B) the length of a parking zone
- C) the length of time during which parking is permitted
- D) a professional driver parking zone

404< Enter - See the answer #

.404 该标志是指 C 允许停放车辆的是时间长度

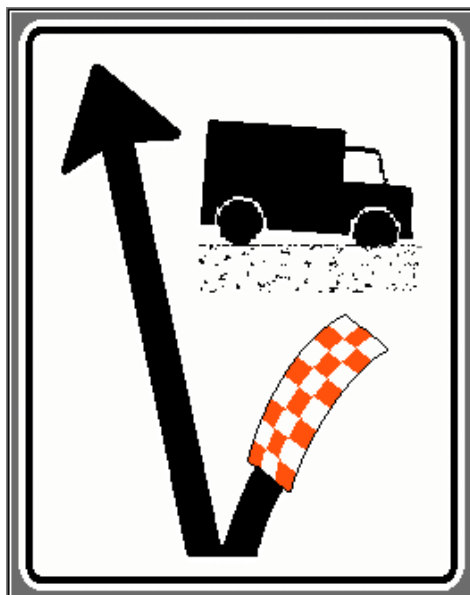


This sign indicates:

- A) bus drivers do not have to stop at the railway crossing if no passengers are on board
- B) hazardous material trucks are exempted from stopping when empty
- C) vehicles that normally must stop at railway crossings are exempted
- D) heavy trucks are exempted from stopping at railway crossings when car drivers do not stop

405< Enter - See the answer #

.405 该标志是指 C 在与铁路的交叉口, 通常情况下必须停车的车辆在此可不必停车 (p 106)

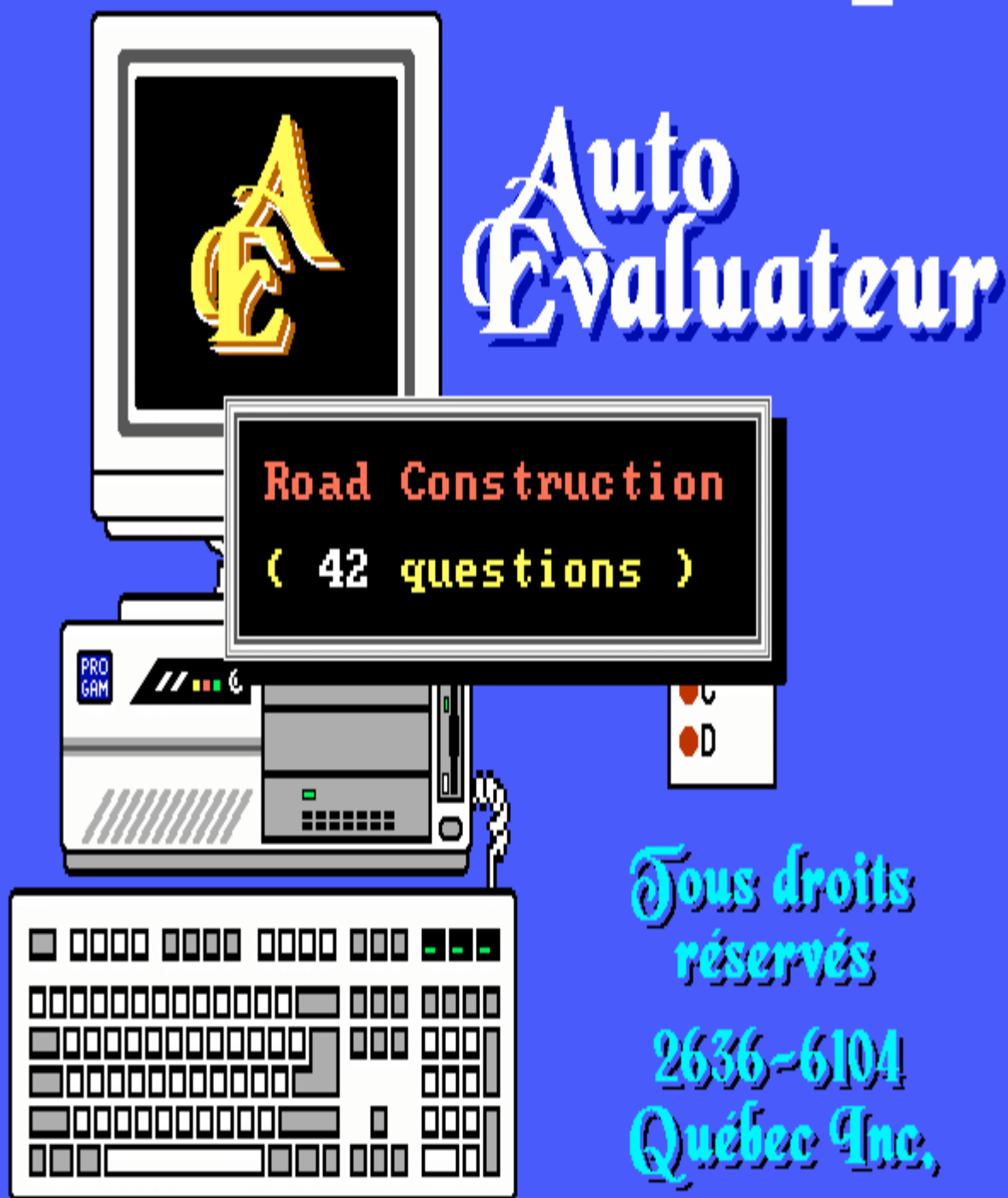



What does this sign represent?

- A) An exit for trucks
- B) An emergency stop ramp
- C) A truck weigh station
- D) A truck lane

406< Enter - See the answer #

.406 该标志代表什么 B 一个紧急停车的斜坡






This sign warns:

- A) of a sports facility ahead
- B) of a crossing ahead for sports fans
- C) that a sporting event is taking place on the road
- D) of a construction zone ahead

501< Enter - See the answer #

.501 该信号是警告 C 该路上正在进行一场体育比赛




This sign indicates:

- A) the route to follow around a construction site
- B) construction workers must follow this road to reach the work site
- C) the location of a work site
- D) an obstacle on the roadway must be passed to the left

502< Enter - See the answer #

.502 该标志是指 A 该路线周围有一个建筑工地




This sign indicates:

- A) the end of the roadway
- B) a reduced speed is required in the work site
- C) the end of the work site
- D) the end of a detour due to a work site

503< Enter - See the answer #

.503 该标志是指 C 工地的终端



This sign indicates:

- A) the road to follow across a construction site
- B) you are approaching a construction site
- C) the route to follow around a construction site
- D) this is a large construction site

504< Enter - See the answer #

.504 该标志是指 C 该路线周围有一个建筑工地



For safety reasons,
this work site sign
warns drivers:

- A) of a blasting zone ahead
- B) that transporting dynamite is prohibited ahead
- C) not to enter the work site
- D) that radio transmitters should be turned off in a blasting zone

506< Enter - See the answer #

.506 为了安全该工地信号是警告司机: D 在一个爆破区无线电发报机应该关闭



This work site sign
indicates:

- A) a stop sign ahead
- B) that parking is prohibited
- C) that stopping is prohibited
- D) a flagperson may signal you to stop ahead

507< Enter - See the answer #

.507 该工地标志是指: A 前方有停车信号




This work site sign indicates:

- A) the beginning of a two-way road
- B) two-way traffic ahead
- C) the beginning of a one-way road
- D) one-way traffic ahead

508< Enter - See the answer #

.508 该工地标志是指 B 前方是双向车道



This road work sign warns:

- A) of several steep hills ahead
- B) that the pavement ends ahead
- C) of a bumpy road ahead
- D) that visibility is reduced due to several hills ahead

509< Enter - See the answer #

.509 该路标是警告: C 前方的道路颠簸



This road work sign indicates:

- A) the loss of a lane ahead
- B) a narrow bridge ahead
- C) the road narrows on the right ahead
- D) heavy vehicles in use on the right side of the road

510< Enter - See the answer #

.510 该路标是指:C 前方右侧路变窄



This sign,
posted in a work
site,
indicates:

- A) a separated roadway ahead
- B) two-way traffic ahead
- C) the beginning of two-way traffic
- D) you are approaching a two-way road

511< Enter - See the answer #

.511 该信号贴在工地是指:A 前方的道路是隔开的



This sign
installed in work
sites
warns drivers:

- A) of a grooved or steel wiremesh surface ahead
- B) that water may cover the road ahead

C) that debris may be present on the road ahead

D) of the end of pavement ahead

512< Enter - See the answer #

.512 该信号安装在工地是警告司机: D 前方是铺过的道路的终止



This road work sign
warns:

- A) of the possibility of ice on the roadway ahead
- B) of slippery road conditions ahead
- C) of sharp curves ahead
- D) of wet paint on the road ahead

513< Enter - See the answer #

.513 该路标是警告: B 前方道路很滑



This sign,
posted in a work
site,
indicates:

- A) the roadway narrows on both sides ahead
- B) a narrow bridge ahead
- C) the presence of deep ditches on both sides of the road
- D) a divided roadway ahead

514< Enter - See the answer #

.514 该信号贴在工地是指 A 前方道路从两侧变窄




This road work sign
indicates:

- A) an especially dangerous point on a sharp curve
- B) a T-intersection
- C) two-way traffic
- D) part of the road is obstructed by construction on both sides

515< Enter - See the answer #

.515 该信号是指: B 一个 T 型交叉路口



This sign,
posted in a work
site,
indicates:

- A) the end of the pavement
- B) a closed exit
- C) a flagperson ahead
- D) the end of the roadway

516< Enter - See the answer #

.516 该信号贴在工地是指 D 道路的终端



This road work sign
warns:

- A) of a truck crossing ahead
- B) that equipment is working above the roadway ahead
- C) that heavy equipment is in use near the roadway ahead
- D) of a steep hill ahead

517< Enter - See the answer #

.517 该路标是警告： A 前方可以 有卡车横越 (p140)



SORTIE
BARRÉE

This road sign
posted in a work site
indicates:

- A) the route to follow around a work site
- B) one lane is closed
- C) the exit is temporarily closed to traffic
- D) work obstructs part of the roadway

518< Enter - See the answer #

.518 该信号贴在工地是指 C 车辆出口暂时关闭



ROUTE
BARRÉE

This sign
posted in a work site
indicates:

- A) work obstructs part of the roadway
- B) part of the roadway is closed to traffic temporarily
- C) the route to follow to detour around a work site
- D) the roadway is temporarily closed to traffic

519< Enter - See the answer #

.519 该信号贴在工地是指 D 该道路暂时对车辆关闭



TUNNEL
BARRÉ

This road work sign
indicates:

- A) the route to follow around a work site
- B) a tunnel is temporarily closed to traffic
- C) work obstructs part of the roadway temporarily
- D) a lane is temporarily closed to traffic

520< Enter - See the answer #

.520 该信号是指 B 隧道暂时对车辆关闭



CIRCULATION
LOCALE
SEULEMENT

This sign
installed in a work
site
indicates:

- A) an area is temporarily closed to traffic
- B) construction work obstructs part of the roadway temporarily
- C) a lane is closed to traffic and a reduced speed is suggested
- D) the route to follow around the work site

521< Enter - See the answer #

.521 该信号安装在工地是指: A 该地区暂时对车辆关闭



This sign
installed in a work
site

indicates:

A) the route bicycles must
follow around the work
site

B) one lane is temporarily closed
to traffic

C) that the traffic must temporarily
follow the bike route around the
construction zone

D) that a lane is temporarily closed
and traffic must use the one
remaining open

522< Enter - See the answer #

.522 该信号贴在工地是指：A 自行车道必须环绕工地



This advance
construction sign
warns:

A) of a sharp
curve ahead

B) one lane is
closed ahead

C) the roadway
narrows on the
left ahead

D) of an entrance
ramp ahead

523< Enter - See the answer #

.523 该信号是指 B 前方一条车道关闭



This advance sign
installed
in work sites
warns:

- A) one lane is temporarily closed to traffic
- B) the roadway narrows on the left without a reduction in the number of lanes
- C) that an area is temporarily closed to traffic
- D) the roadway narrows on the right without a reduction in the number of lanes

524< Enter - See the answer #

.524 该信号贴在工地是警告 :A 一条车道暂时对车辆关闭



This advance sign,
installed in work
sites
indicates:

- A) an especially dangerous point in a sharp curve
- B) the beginning of one-way traffic
- C) the end of the work site
- D) the direction traffic must take

525< Enter - See the answer #

.525 该信号贴在工地是指 :D 车辆必须按此方向行驶



This advance
road work sign
indicates:

- A) the presence of heavy machinery near the roadway
- B) the presence of minor roadwork
- C) a flagperson ahead
- D) the beginning of a work site

526< Enter - See the answer #

.526 该信号是指 B 存在小型修路



This advance
work site sign
warns of...

- A) the presence of minor road repairs
- B) a crossing guard ahead directing traffic
- C) a flagperson ahead
- D) the beginning of a work site

527< Enter - See the answer #

.527: 该信号贴在工地是警告 C 前方有一个拿旗的人

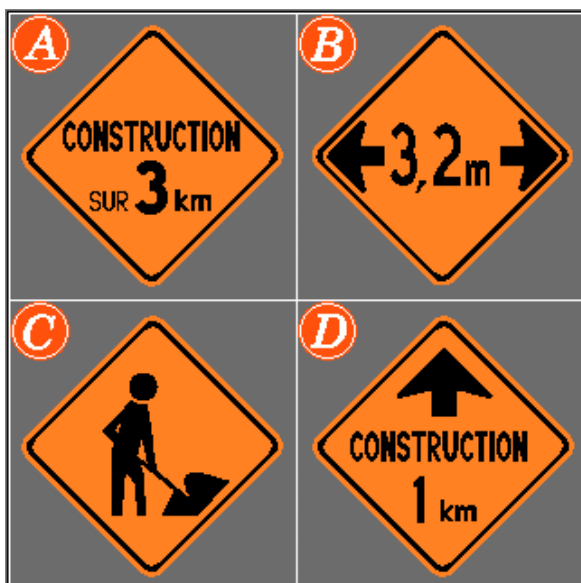


This advance
construction sign
indicates:

- A) the direction to follow
- B) two sharp curves
- C) a detour to the right
- D) two sharp curves in opposite directions

528< Enter - See the answer #

.528 该施工信号是指 C 向右方绕行



Which sign
indicates
the distance to
the work site?

- A) Sign A
- B) Sign B
- C) Sign C
- D) Sign D

529< Enter - See the answer #

.529 哪个信号指示了到工地的距离 D 信号 D



This advance
construction sign
warns of...

- A) the presence of
equipment working
above the roadway
- B) heavy machinery
on or near the
roadway
- C) minor roadwork
ahead
- D) a detour ahead

530< Enter - See the answer #

.530 该信号贴在工地是警告 A 有在公路上方工作的设备




This
construction sign
warns you of:

- A) a yield the
right-of-way to
oncoming traffic
sign ahead
- B) a yield sign
ahead
- C) lanes merging
on the right
ahead
- D) the loss of the
right lane ahead

531< Enter - See the answer #

.531 该信号贴在工地是警告 A 前方信号要求出让通行权给迎面而来的车辆




This work site sign indicates:

- A) the speed limit in a work site
- B) the minimum speed near a work site
- C) the number of kilometers left to travel
- D) the length of the work site


532< Enter - See the answer #

.532 该信号贴在工地是指 A 在工地内的速度限制


A




B



C



D



Which sign indicates the recommended speed in a work site?

- A) Sign A
- B) Sign B
- C) Sign C
- D) Sign D

533< Enter - See the answer #

.533 哪一个信号是指在一个工地内的推荐速度 C 信号 C



What is the
meaning of this
new construction
sign?

- A) Turn right
- B) Detour to the right
- C) Direction marker
- D) Exit closed

534< Enter - See the answer #

.534 该新的施工信号是何意思: C 方向标记







This advance
road work sign
warns of...

- A) the presence of heavy machinery
- B) minor roadwork ahead
- C) the presence of a flagperson
- D) a heavy machinery parking lot on the work site


535< Enter - See the answer #

.535 该施工信号是警告 A 存在重型机器

A 	B 	<p>Which road sign indicates the beginning and the length of the construction zone?</p> <p>A) Sign A</p> <p>B) Sign B</p> <p>C) Sign C</p> <p>D) Sign D</p>
C 	D 	


536< Enter - See the answer #


.536 哪一个路标指示了建筑区的开始和长度 A 信号 A


	<p>This advance road work sign warns of...</p> <p>A) heavy machinery on or near the roadway ahead</p> <p>B) minor roadwork ahead</p> <p>C) a flagperson directing traffic</p> <p>D) the length of the work site</p>
---	---


537< Enter - See the answer #

.537 该施工信号是警告 D 工地的长度

A


B


C


D


Which sign
warns of
minor roadwork
ahead?

A) Sign **A**


B) Sign **B**

C) Sign **C**

D) Sign **D**

538< Enter - See the answer #

.538 哪一个路标警告前方有小型修路 C 信号 C



A flagperson
signals as shown:

You should:

A) proceed straight

B) stop

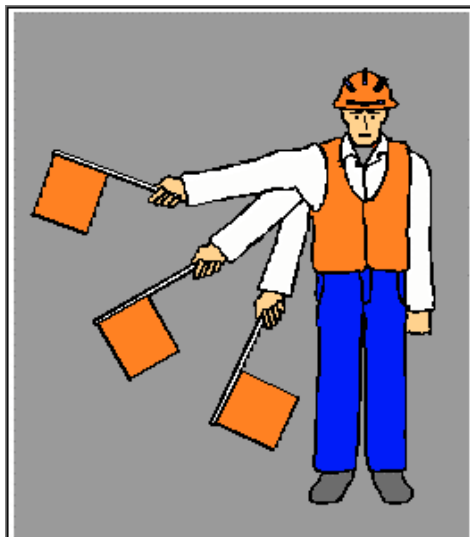
C) slow down

D) squeeze left

539< Enter - See the answer #

.539 这个拿旗的人是表示你应该 B 停车

196



As you approach
a construction zone,
a flagperson signals
as illustrated.

You must:

- A) stop
- B) pass on the right
- C) pay extra attention
- D) slow down

540< Enter - See the answer #

.540 当你接近一个建筑区,这个拿旗的人的信号是说明你必须 D 减速







This flagperson
is signalling you to:

- A) move to your left
- B) stop
- C) slow down
- D) proceed with caution

541< Enter - See the answer #

.541 这个拿旗的人是表示你应该 D 谨慎前行


A 	B 	<p>Which sign indicates the horizontal clearance available in a construction zone?</p> <p>A) Sign A</p> <p>B) Sign B</p> <p>C) Sign C</p> <p>D) Sign D</p>
C 	D 	

542< **Enter** - See the answer #

.542 哪一个信号是说明建筑工地的水平距离 B 信号 B



Tous droits
réservés
2636-6104
Québec Inc.




This sign indicates:

- A) the highway is 44 km in length, East-West
- B) the distance to the next exit
- C) the distance from the starting point of the highway
- D) the distance to the end of the highway

601< **Enter** - See the answer #

.601 该信号是指: C 从公路的开始点(到此)的距离



These various signs indicate:

- A) the exit numbers along the expressway
- B) distances from the beginning of the highway
- C) the distances to the next town
- D) the distances to a police station

602< **Enter** - See the answer #

.602 这些不同的信号是指: B 从公路的开始点(到此)的距离



This sign identifies:

- A) a North-South provincial highway
- B) an East-West provincial highway
- C) a North-South expressway
- D) an East-West expressway

603< **Enter** - See the answer #

.603 该信号可确认: B 东西向省辖公路




This road sign identifies:

- A) a North-South provincial highway
- B) an East-West provincial highway
- C) a North-South expressway
- D) an East-West expressway

604< **Enter** - See the answer #

.604 该信号可确认 D 东西向高速路




What does this sign indicates?

- A) You are travelling on Autoroute 20
- B) Autoroute 20 ends in 1 kilometer
- C) Access to Autoroute 20 is 1 kilometer ahead
- D) The beginning of a divided highway in one kilometer

605< Enter - See the answer #

.605 该信号是何意思 C 高速公路 20 的入口在前方 1 km 处



This trapezoidal sign indicates:

- A) the number of an expressway exit
- B) the exit leading to route 241
- C) a detour to route 241
- D) a detour to the right 241 meters ahead

606< Enter - See the answer #

.606 该梯形信号是指: A 高速公路出口的号码



This signs indicates:

- A) you are entering Québec City
- B) you are leaving Québec City
- C) this route is patrolled by the
Sécurité du Québec police
- D) you are at the boundary of the
Province of Québec

607< **Enter** - See the answer #

.607 该信号是指 D 你在魁北克省的边界线上



**These cardinal (compass point) tabs,
when posted with a highway sign,
indicate:**

- A) the direction to follow to reach
the highway indicated
- B) the direction to a police station
- C) the direction to a tourist
information center
- D) the general direction of the road

608< **Enter** - See the answer #

.608 当这些重要信号贴在公路上时是指: D 路的大体方向



St-Nicolas

This sign indicates:

- A) the territorial limits of a built-up area (city, town, etc)
- B) the name of the town you just reached
- C) the direction to follow to reach St-Nicolas
- D) the distance to travel to reach St-Nicolas

609< Enter - See the answer #

.609 该信号是指: A 高楼林立区(城市,城镇) 的区域限制



Victoriaville 5
Québec 122

This sign
indicates:

- A) the distance to the listed destinations
- B) the number of exits before reaching these destinations
- C) the exit number for each of these destinations
- D) the number of the highway which leads to these destinations

610< Enter - See the answer #

.610 该信号是指: A 到所列目的地的距离



This sign indicates:

- A) the distance to travel to reach a police station
- B) the proximity of a Sûreté du Québec station (provincial police)
- C) the road which leads to a Sûreté du Québec station
- D) an area where the Sûreté du Québec has jurisdiction

611< Enter - See the answer #

.611 该信号是指: B 接近魁北克省警察局



This sign represents?

- A) Directions to destinations shown
- B) Tourist information centers
- C) Directions to provincial parks
- D) Historic sites / points of interest

612< Enter - See the answer #

.612 该信号是指: A 指示目的地的方向



LONGUEUIL 20

This sign indicates:

- A) the number of the route to Longueuil
- B) the distance to Longueuil
- C) the municipal boundary of Longueuil
- D) the population of Longueuil

613< **Enter** - See the answer #

.613 该信号是指: B 到 Longueuil 的距离



JCT 1 km

**This tab sign
indicates:**

- A) the highway changes direction
at the intersection 1 km ahead
- B) the distance to the intersection
ahead
- C) the distance to the town ahead
- D) the distance to the end of the
numbered highway

614< **Enter** - See the answer #

.614 该信号是指: B 到前方交叉路口的距离



This tab sign
indicates the end of:

- A) a work site
- B) a No-passing zone
- C) a numbered highway
- D) a school zone

615< Enter - See the answer #

.615 该信号是指什么的终点: C 一条已编号的公路



This tab sign
indicates:

- A) the end of the roadway
- B) a dead-end street or road
- C) the direction to a numbered highway
- D) the direction to a parking area

616< Enter - See the answer #

.616 该信号是指: B 一条路的尽头



When installed
below traffic lights
this sign indicates:

- A) all drivers that wish to turn left may proceed
- B) drivers facing a flashing green may proceed provided they start from the correct lane
- C) only drivers intending to turn left may proceed, from both directions
- D) drivers intending to proceed straight must wait for the appropriate light

617< Enter - See the answer #

617. 当该信号安装在交通灯的下方是指: B 当绿灯闪烁时, 在正确车道的司机可以继续前行



This road sign
indicates
the direction to:

- A) a hotel
- B) a hospital
- C) city Hall
- D) a first aid station

618< Enter - See the answer #

618 该信号是指什么的方向 B 医院



What does this sign mean?

- A) Parking area
- B) Emergency station
- C) Intersection
- D) Fire station

619< Enter - See the answer #

.619 该信号是何意思 B 急救站



This road sign indicates:

- A) the proximity of an airport
- B) the direction to an airport
- C) low-flying aircraft within 300 meters of the roadway
- D) low-flying aircraft above the roadway

620< Enter - See the answer #

.620 该信号是指: B 飞机场的方向



This road sign
indicates
the direction
towards:

- A) a police station
- B) a public park
- C) a parking area
- D) a tourist information office

621< Enter - See the answer #

.621 该信号是指什么的方向 C 停车场



This sign
posted along expressways
indicates:

- A) the location of an emergency telephone
- B) an area reserved for emergency parking
- C) a parking lot beside the expressway
- D) a parking area reserved for emergency vehicles

622< Enter - See the answer #

.622 该信号贴在高速公路旁是指: B 为紧急情况预留的停放区




This road sign
posted along an expressway
indicates:

- A) the road towards the nearest telephone
- B) the location of an emergency telephone to call for help
- C) the presence of a telephone reserved for drivers of emergency vehicles
- D) a special phone to warn people that you will be late

623< Enter - See the answer #

.623 该信号贴在高速公路旁是指: B 紧急电话的位置,可用于呼救



When used on a road sign,
the color brown
indicates:

- A) a freeway
- B) a path for cyclists
- C) an animal reserve
- D) an historical site or tourist services

624< Enter - See the answer #

.624 棕色用在路标上表示 D 历史遗址或对旅游者的服务



What does this sign indicate?

- A) Rest area
- B) Tourist information
- C) Emergency telephone
- D) Accommodation

625< Enter - See the answer #

.625 该信号是指 B 为旅游者提供的信息



This sign indicates:

- A) an information centre for truck drivers
- B) the distance to a local tourist information centre
- C) the distance to the next rest area
- D) the distance to the next tourist or historical site

626< Enter - See the answer #

.626 该信号是指 B 离当地一个旅游者信息中心的距离




This road sign indicates
the distance to:

- A) a camping ground
- B) a border tourist information center
- C) the Québec border
- D) a zone closed to tourists

627< Enter - See the answer #

.627 该信号是指离什么的距离 B 边境旅游者信息中心



This road sign
indicates
the distance to:

- A) a federal park
- B) the Québec border
- C) a rest area
- D) an historical site

628< Enter - See the answer #

.628 该信号是指离什么的距离 C 休息场所



What does this
sign mean?

- A) Tourist
information
office
- B) Rest area
- C) Historical site
- D) The route used
by pioneers

629< Enter - See the answer #

.629 该信号是指 D 冒险探路者所用路线



This sign
installed along a roadway
identifies:

- A) a bird watching sanctuary
- B) a lookout
- C) a customs border station
- D) a forest ranger observation post

630< Enter - See the answer #

.630 该信号安装在路边是指: B 了望台



This sign
installed along a roadway
indicates
the proximity of:

- A) a hotel
- B) a restaurant
- C) road-side picnic tables
- D) an haute cuisine academy

631< Enter - See the answer #

.631 该信号安装在路边是指接近何地 B 餐馆



This sign indicates
that you may purchase:

- A) spring water
- B) gasoline or fuel
- C) medication
- D) heating oil

632< Enter - See the answer #

.632 该信号是指你可以买 B 汽油或燃料



This road sign
indicates
that you may buy:

- A) gasoline
- B) propane gas
- C) diesel fuel
- D) natural gas

633< Enter - See the answer #

.633 该信号是指你可以买 C 柴油机燃料



This road sign
indicates
that you may buy:

- A) gasoline
- B) propane gas
- C) diesel fuel
- D) natural gas

634< Enter - See the answer #

.634 该信号是指你可以买 B 丙烷气



This road sign
indicates
that you may buy:

- A) gasoline
- B) propane gas
- C) diesel fuel
- D) natural gas

635< Enter - See the answer #

.635 该信号是指你可以买 D 天然气



This road sign indicates
the service station
sells:

- A) natural gas and propane gas
- B) diesel fuel and propane gas
- C) gasoline and propane gas
- D) gasoline and diesel fuel

636< Enter - See the answer #

.636 该信号是指卖何东西的服务站 B 柴油机燃料和丙烷气



This road sign indicates
the proximity
of a service station
where you can purchase:

- A) gasoline, diesel fuel and propane gas
- B) propane gas, natural gas and diesel fuel
- C) heating oil, diesel fuel and propane gas
- D) heating oil, propane gas and natural gas

637< Enter - See the answer #

.637 该信号是指接近一个服务站，你可以买 B 丙烷气，天然气和柴油机燃料



The two center lines on the pavement are composed of a solid and a broken line.

The solid center line is closer to you.

The solid line indicates:

A) pass at any time

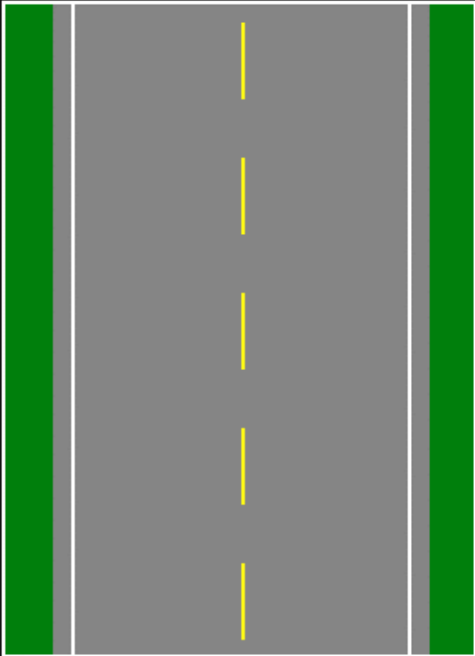
B) it is unsafe to overtake and pass

C) it is safe to overtake and pass

D) pass only when it is safe to do so

701< Enter - See the answer #

.701 道路中线有一条实线和一条虚线组成，实线靠近你，该实线是指：B 超车和越线是不安全的




A broken center line on the pavement means you may:

- A) pass if the way is clear
- B) never pass
- C) pass only during daylight hours
- D) pass at any time

702< Enter - See the answer #

.702 路中心的虚线是指: A 路上没车时可以越线

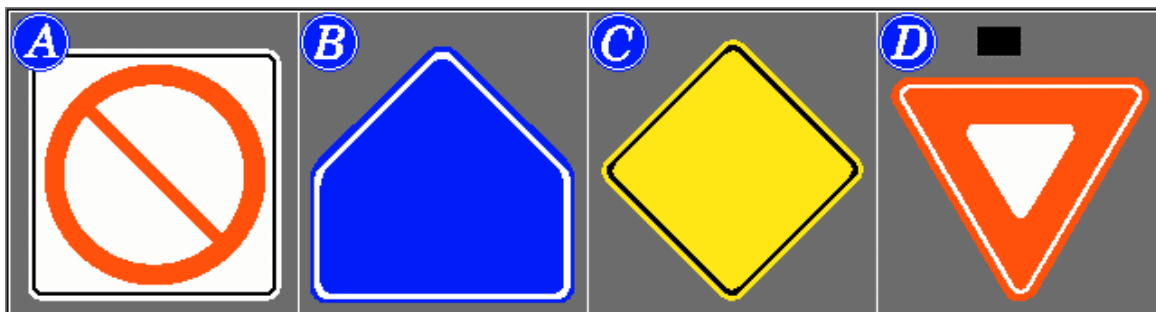


Approaching an intersection where a "Yield" sign is posted, you must:

- A) stop, then enter the intersection quickly
- B) stop, then enter the intersection slowly
- C) slow down and enter the intersection only when the way is clear
- D) proceed at the same speed and check left and right

703< Enter - See the answer #

.703 当接近一个贴有让路信号的交叉路口时, 你必须: C 减速,并只能在路上没车时进入交叉路口

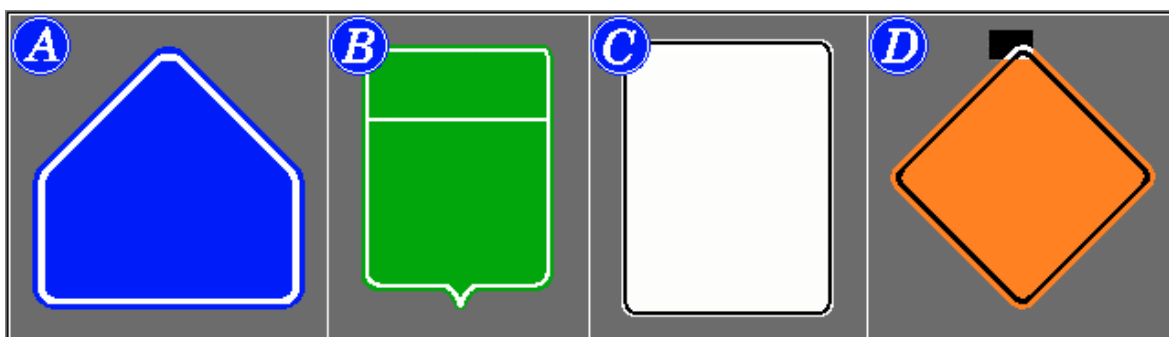


Which of these signs
does not match the identification below?

- A) Obligation
- B) Beginning of school zone
- C) Warning
- D) Yield the right-of-way

704< Enter - See the answer #

.704 这些标志与下列哪一意思不符 A 必须执行




Which of these signs
does not match the definition below?

- A) Beginning of a school zone
- B) Provincial highway
- C) Danger
- D) Construction


705< Enter - See the answer #

.705 这些标志与下列哪一定义不符 C 危险


A




B



C



D



Which shape is used
to indicate a provincial highway?

A) Sign **A**
 B) Sign **B**
 C) Sign **C**
 D) Sign **D**

706 < **Enter** - See the answer #

.706 哪一个形状可用于指示省辖公路 B 信号 B



What color
should
the background be
on this sign?

A) Blue
 B) White
 C) Orange
 D) Yellow

707 < **Enter** - See the answer #

.707 该信号的底色应为: D 黄色



Each road sign color
has a very specific meaning.
Yellow symbolizes:

- A) danger
- B) prescription or regulation
- C) tourist information
- D) road construction

708< Enter - See the answer #

.708 每一种路标颜色都有特别的意义, 黄色代表: A 危险



Each road sign color
has a very specific meaning.
Red symbolizes:

- A) danger
- B) prescription or regulation
- C) tourist information
- D) road construction

709< Enter - See the answer #

.709 每一种路标颜色都有特别的意义, 红色代表 B 命令或规定



Each road sign color
has a very specific meaning.
Orange symbolizes:

A) danger
B) prescription or regulation
C) tourist information
D) road construction

710< Enter - See the answer #

.710 每一种路标颜色都有特别的意义, 橙色代表 D 道路建设



Each road sign color
has a very specific meaning.
Brown symbolizes:

A) danger
B) prescription or regulation
C) tourist information
D) road construction

711< Enter - See the answer #

.711 每一种路标颜色都有特别的意义, 棕色代表 C 旅游者信息

On a school zone sign,
the symbols are:

- A) yellow
- B) red
- C) blue
- D) white

712< Enter - See the answer #

.712 在学校区的信号颜色应为: D 白色




Which sign
does not match
the category
given below?

- A) Prescriptive
- B) Construction
- C) Danger
- D) Indication

713< Enter - See the answer #

.713 哪一个信号不适合下列分类 C 危险



To which category
does the sign
preceding this one
belong?

- A) Warning
- B) Prescriptive
- C) Construction
- D) Indicative

714< Enter - See the answer #

.714 在此信号之前的信号是属于哪一类 A 警告

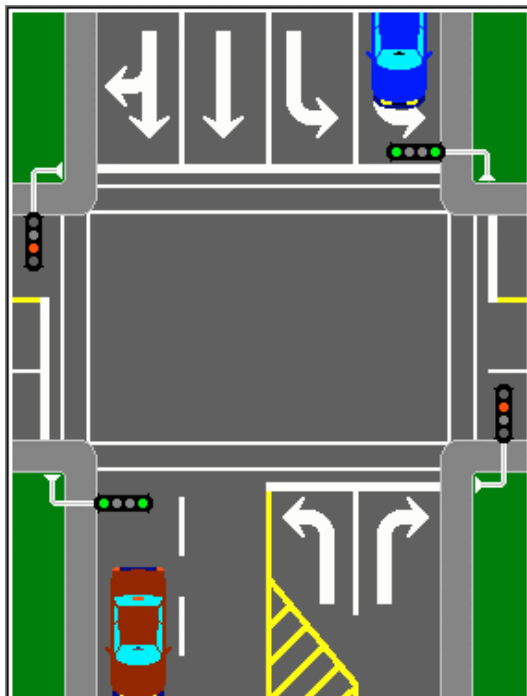


To which category
does the sign
following this one
belong?

- A) Prescriptive
- B) Indicative
- C) Danger
- D) Construction

715< Enter - See the answer #

.715 在此信号之后的信号是属于哪一类 A 说明性的

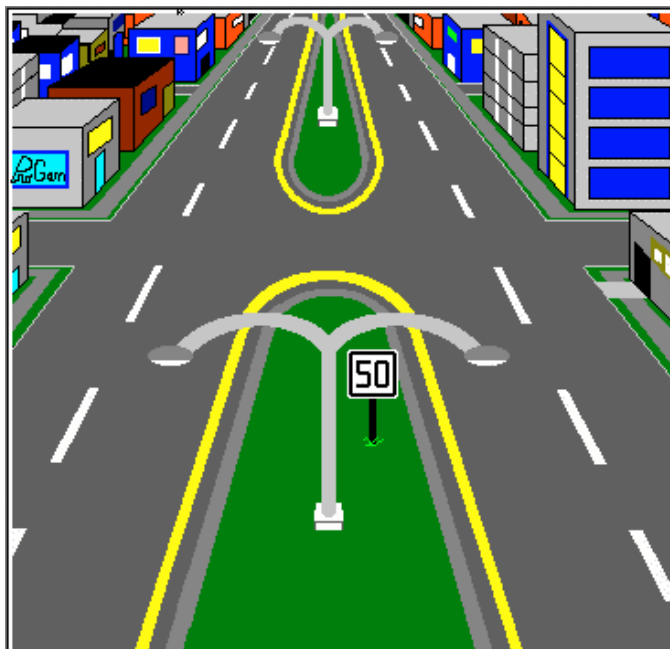


Pavement markings:

- A) may be ignored by drivers
- B) are mandatory if accompanied by signs
- C) are traffic signs; all drivers must obey them
- D) are signals that the driver must obey only in the country side

716< Enter - See the answer #

.716 道路标志是: C 交通信号, 所有的司机必须遵守




Are the median
strip edge
lines
the correct
color?

- A) Yes
- B) They should be white
- C) Unless the speed limit exceeds 50 km/h
- D) The color of the lines does not matter

717< Enter - See the answer #

.717 中间条带边缘线的颜色是否正确? A 是




Unless otherwise indicated,
when facing a green arrow-shaped light,
the driver:

- A) should turn right after the light changes to green
- B) may drive in any direction
- C) should accelerate across the intersection
- D) should turn right only

718< Enter - See the answer #

.718 当司机看到绿箭头灯时司机应该(其他意思除外): D 只能右转



Facing a yellow steady light,
you must:

- A) accelerate across the intersection before the light turns red
- B) stop unless you already entered the intersection or are so close that you cannot stop safely
- C) slow down and check traffic before entering the intersection safely
- D) stop, check in all directions and carefully enter the intersection

719< Enter - See the answer #

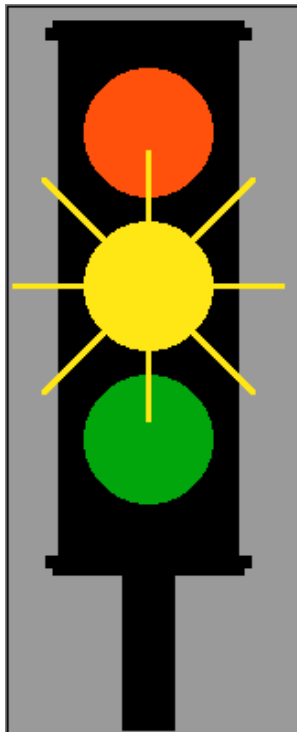
.719 面对稳定的黄灯,你必须: B 停车, 除非你已进入交叉口,或者你已非常接近不能安全停车.

Facing a flashing red light
at an intersection,
you must:

- A) slow down and yield right-of-way to cars approaching from your left or your right
- B) slow down and drive with increased caution
- C) stop and only proceed when the light changes to green
- D) stop and only proceed when it is safe to do so

720< Enter - See the answer #

.720 在交叉口面对闪烁的红灯, 你必须: D 停车, 只有安全的时候才能前行

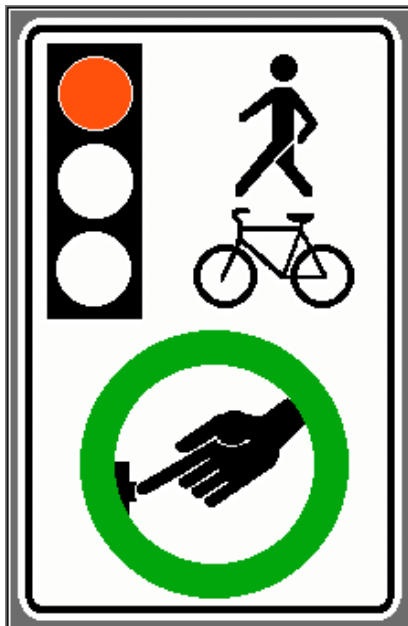


At an intersection,
facing a flashing amber
traffic light,
you must:

- A) stop if you intend to turn left
- B) stop if you intend to turn right
- C) maintain speed
- D) slow down and proceed with caution

721< Enter - See the answer #

.721 在交叉口面对闪烁的黄灯, 你必须: D 减速并谨慎前行

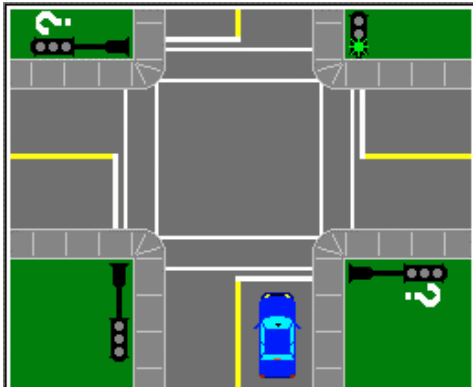


In which category
would
you find
this road sign?

- A) Construction
- B) Prescriptive
- C) Indicative
- D) Warning

722< Enter - See the answer #

.722 该路标是哪一类: B 说明性的



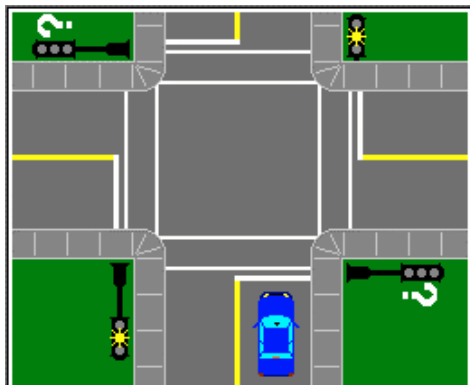
You are facing,
a flashing green light
at an intersection,
as shown
in the diagram.

What traffic signal
is facing the
traffic approaching
on the transverse road?

- A) A green flashing light
- B) A red flashing light
- C) An amber flashing light
- D) A steady red light

723< Enter - See the answer #

.723 如图所示,当你在交叉口面对闪烁的绿灯,附近横向的车辆面对的是何交通信号 D 稳定的红灯



You are facing
a flashing amber light
at an intersection,

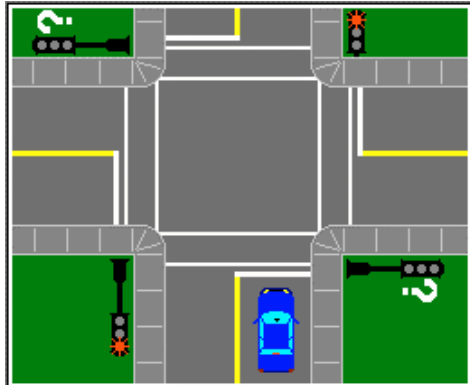
as shown
in this diagram.

What traffic light
is facing
the transverse road?

- A) A green flashing light
- B) A red flashing light
- C) An amber flashing light
- D) A steady red light

724< Enter - See the answer #

.724 如图所示,当你在交叉口面对闪烁的黄灯,附近横向的车辆面对的是何交通信号 B 闪烁的红灯



You are facing
a flashing red light
at an intersection,

as shown
in the diagram.

What traffic signal
is facing the
traffic approaching
on the transverse road?

- A) A green flashing light
- B) A red flashing light
- C) An amber flashing light
- D) Answer B or C

725< Enter - See the answer #

.725 如图所示,当你在交叉口面对闪烁的红灯,附近横向的车辆面对的是何交通信号 D 闪烁的红灯或闪烁的黄灯



This sign
imposes the same
obligation as:

- A) a flashing amber light
- B) a flashing red light
- C) a flashing green light
- D) a steady red light

726< Enter - See the answer #

.726 该信号强调与下列何种信号同样的指示: A 闪烁的黄灯



This road sign
imposes the same
obligation as:

- A) a flashing amber light
- B) a flashing red light
- C) a flashing green light
- D) a steady red light

727< Enter - See the answer #

.727 该信号强调与下列何种信号同样的指示: B 闪烁的红灯



In which category would you find this sign?

- A) Prescriptive
- B) Indicative
- C) Warning
- D) Construction

728< Enter - See the answer #

.728 该路标是哪一类:A 说明性的



What does this sign, attached to the rear of certain vehicles, identify?

- A) A stop sign ahead
- B) A yield the right-of-way sign
- C) A dead end street
- D) A slow-moving vehicle

729< Enter - See the answer #

.729 该信号贴在何种车的后面 D 行驶缓慢的车



A red X,
mounted above a lane,
indicates:

A) do not drive or
stop in this lane

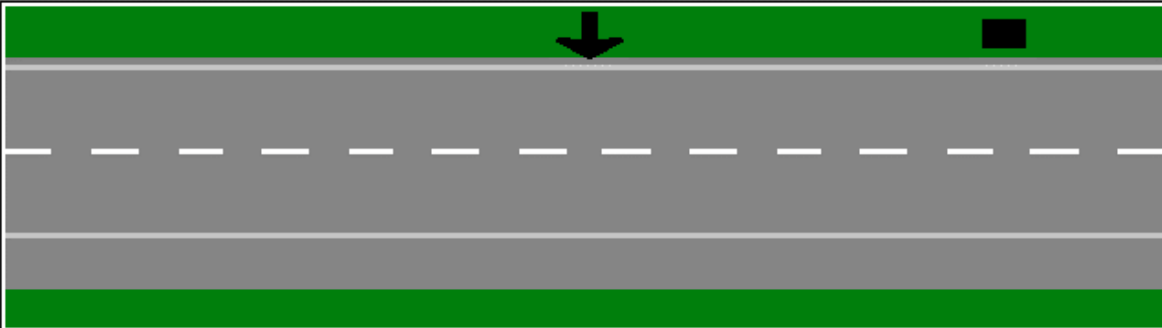
B) the obligation to stop
in this lane

C) that this lane is reserved for
oncoming traffic

D) that this lane is reserved for
left turns from either direction

730< Enter - See the answer #

.730 该红色的 X 安装在一个车道的上方表示: A 不要在该车道行驶或停车



On an expressway (two lane, one-way),
the edge line on the extreme left
should be:

A) a solid white line

B) a solid yellow line

C) an yellow broken line

D) a white broken line

731< Enter - See the answer #

.731 在一个单向双车道的高速公路上, 在最左边的边线应该: B 黄色实线



If this symbol
starts flashing,
pedestrians
already engaged
in the intersection
should:

A) stop
B) turn back to the sidewalk
C) hurry to reach the sidewalk
or the median
D) ignore the signal

732< Enter - See the answer # - - - -

.732 如果该信号开始闪烁, 已在交叉路口的行人应该: C 赶紧到达人行道或是中线



Could the driver of the blue vehicle
travel at 40 km/h?

A) This will not cause any problems
B) No, this impedes the flow of traffic
C) Yes, during daylight hours only
D) Yes, unless the vehicle following
is an emergency vehicle

733< Enter - See the answer # - - - -

.733 那个蓝色车的司机可以以 40km/h 行驶吗 B 不行, 这会妨碍车流.



.734 白色图标应贴在高速公路的 A 右侧

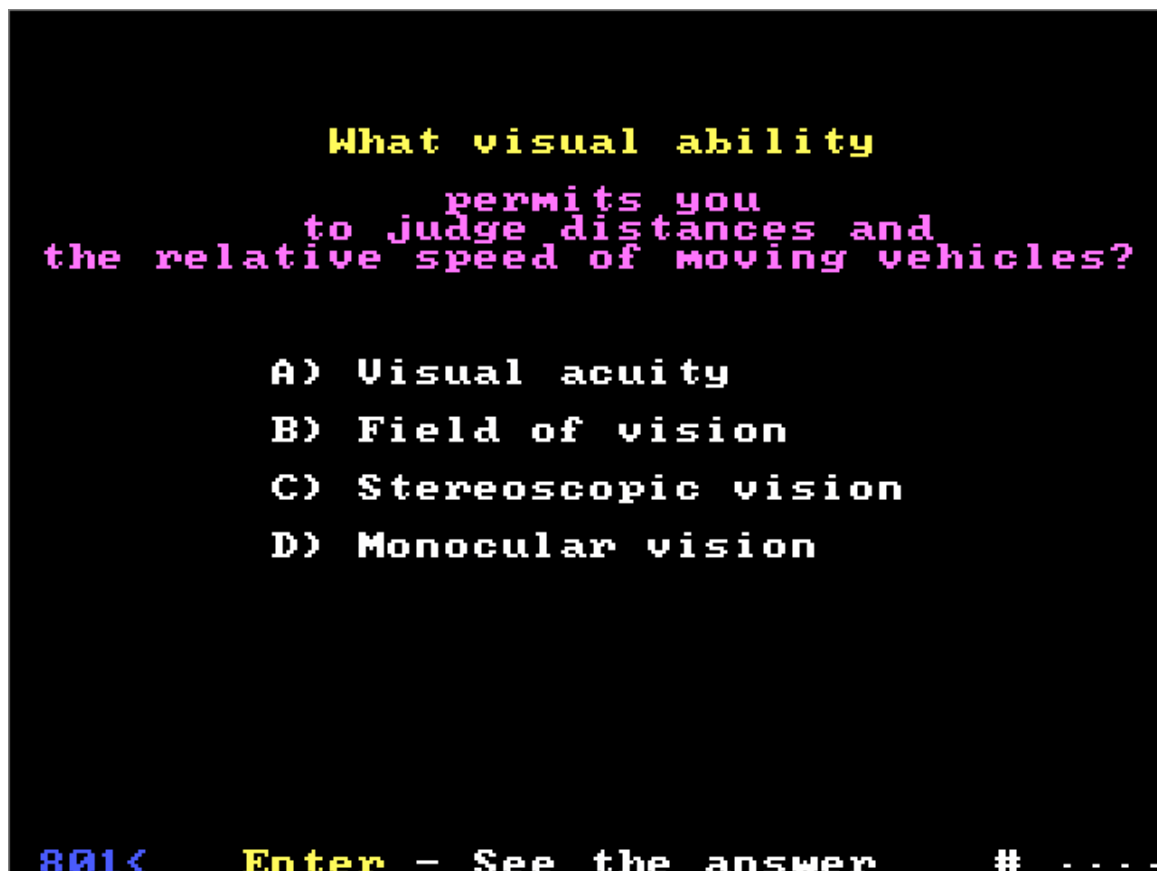


.735 贴在高速公路左边的图标总是 D 黄色





Specialization



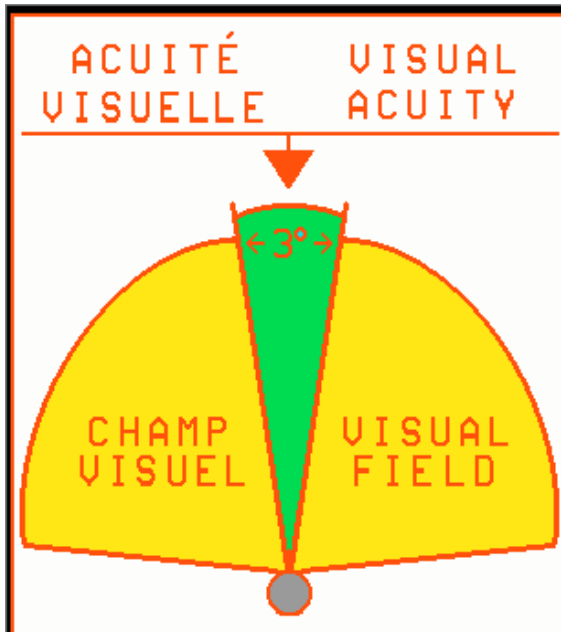
.801 何种视觉能力允许你判断行驶车辆的距离和相对速度 C 立体视觉

Peripheral vision is:

- A) the perception of distances
- B) the ability to see colors
- C) a visual handicap
- D) the perception of shapes and movement

802< Enter - See the answer #

.802 周围视觉是指 D 对形状和运动的感知



Visual acuity is the ability to:

- A) adapt to darkness
- B) identify things clearly
- C) judge distances properly
- D) perceive objects fuzzily

803< Enter - See the answer #

.803 视觉敏锐是何种能力 B 清楚的识别物体

When driving,
even under normal traffic conditions,
you should:

- A) concentrate on the vehicle ahead of yours
- B) move your eyes as seldom as possible
- C) check behind and to the sides, only if you hear strange sounds
- D) move your eyes every 2 seconds in order to be fully aware of your environment

804< Enter - See the answer #

.804 即使行驶在正常的交通状况下,你应该 D 每 2 秒钟动一下眼睛,以便全面了解周围环境

What affect
does increasing speed have
on your field of vision?

- A) It decreases your field of vision
- B) It increases your field of vision by 10°
- C) It almost eliminates blind spots
- D) It has no effect since you are moving forward

805< Enter - See the answer #

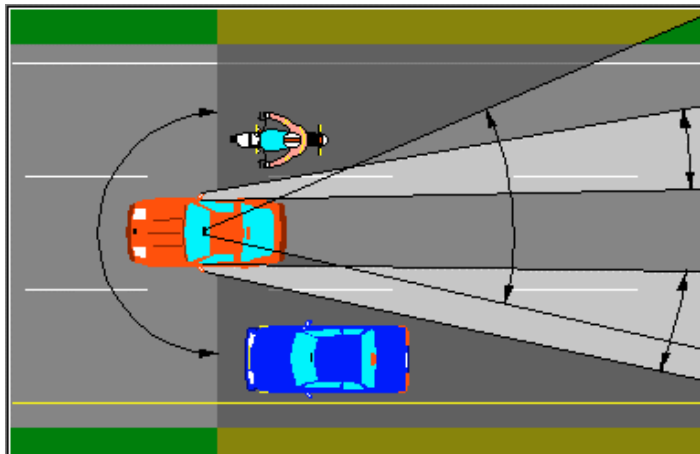
.805 加速会对你的视野有何影响 A 减小你的视野

To steer your vehicle straight ahead,
you should:

- A) use the lane markings as a guide
- B) keep the steering wheel in the same position
- C) use the preceding vehicle as a guide
- D) look far ahead and scan the roadway

806< Enter - See the answer #

.806 在驾驶你的车直行时, 你应该 D 看着前方远处并扫视公路



Blind spots
are:

- A) areas visible in the exterior rear-view mirrors
- B) zones viewed neither by your field of vision nor in the mirrors
- C) areas visible in the interior rear-view mirror
- D) dangerous curves

807< Enter - See the answer #

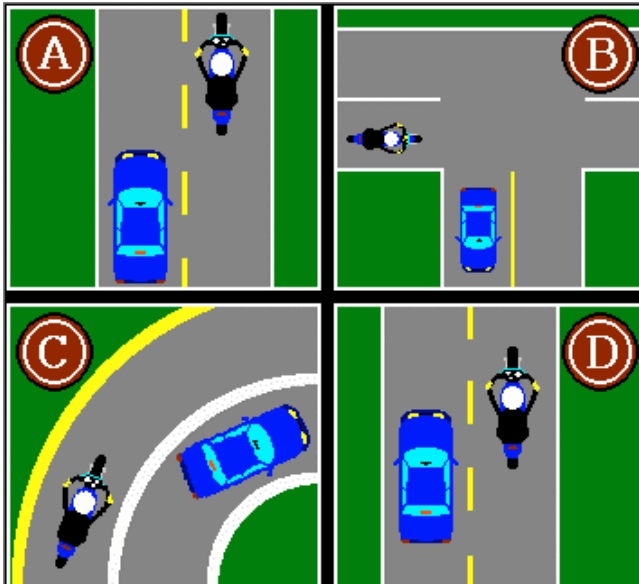
.807 盲点是指:B 你的视野和发光镜都看得不得的区域

What is
the correct way to check
your blind spot while driving?

- A) Check the mirrors
- B) Check as far as possible through the rear window
- C) Turn your head (chin in-line with your shoulder) and glance to the side towards the rear
- D) Glance to both sides of each intersection

808< Enter - See the answer # - - -

.808 在驾驶过程中如何正确检查盲点 C 转动你的头(下巴和肩膀)并扫视后面



In which
illustration
is the
automobile
in the
motorcyclist's
blind spot?

- A) Diagram A
- B) Diagram B
- C) Diagram C
- D) Diagram D

809< Enter - See the answer # - - -

.809 哪一个图表示汽车在摩托车司机的盲点 D 图D



Which diagram shows a motorcycle in the driver's blind spot?

A) Diagram A
B) Diagram B
C) Diagram C
D) Diagram D

810< Enter - See the answer #

.810 哪一个图表示摩托车在汽车司机的盲点 A 图 A

What are, in the correct order, the operations to perform for a safe lane change?

A) Check the mirrors, signal your intention, check the blind spot, then check mirrors again
B) Signal your intention, check the blind spot, and check the mirrors
C) Signal your intention, check the mirrors, and check the blind spot
D) Check the mirrors, check the blind spot, signal your intention and then check the mirrors and blind spot again

811< Enter - See the answer #

.811 哪一个安全换车道的正确操作顺序 D 检查反光镜, 检查盲点, 打信号, 然后再次检查反光镜和盲点

When you intend to change lanes,
the first thing
you should do is...

- A) signal your intention
- B) check the blind spot
- C) check the rear-view mirrors
- D) move closer to the adjacent lane without driving onto it

812< Enter - See the answer #

.812 当你要换车道时,你应做的第一件事是 C 检查后视镜

When you want
to change lane towards the left,
what should you do first?

- A) Move slightly to the left side of your lane
- B) Activate the left turn signal
- C) Slow down slightly
- D) Check the left mirror and blind spot

813< Enter - See the answer #

.813 但你必须要向左换车道时,你首先应该做什么 D 检查左边反光镜和盲点



Approaching a stop sign,
you must stop
as illustrated
by:

A) car A
B) car B
C) car C
D) car D

814< Enter - See the answer #

.814 在接近停车信号时，你必须如哪个图所示停车 D 车 D

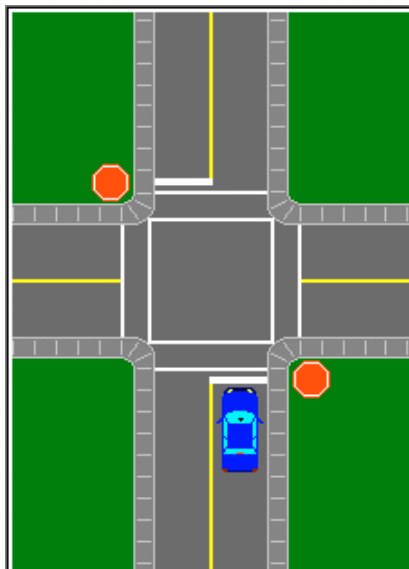


In the diagram,
the driver
must first check:

A) towards the right
B) towards the left
C) in the rear-view mirror
D) far ahead

815< Enter - See the answer #

.815 在图中,司机必须首先检查 B 左边

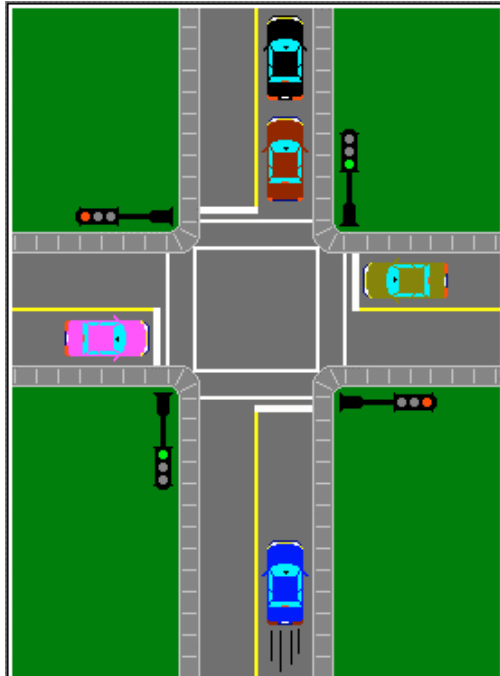


In this situation,
before crossing the
intersection,
you must check:

- A) right then left
- B) left then right
and left again
- C) left then right
- D) right then left
and right again

816< Enter - See the answer #

.816 在此情况下，在过交叉路口之前，你必须检查 B 左边，然后右边，再左边



Approaching an
intersection,
the vehicles ahead
are stopped as shown,
you should:

- A) proceed into the
intersection
- B) slow down, check
traffic and then
drive into the
intersection
- C) wait at the stop
line
- D) stop in the
intersection

817< Enter - See the answer #

.817 在接近一个交叉路口时，前方车辆如图所示停车，你应该 C 等候在停车线上

At an intersection,
where trees, snow banks, etc.
obstruct your view,
you should:

- A) proceed as you would if there were a yield sign
- B) keep to the right side of the road to see as far as possible
- C) tap the horn to warn other drivers
- D) stop at the intersection, then advance slowly, covering the brake pedal

818< Enter - See the answer #

.818 在一个交叉路口, 树, 雪堆妨碍了你的视线, 你应该 D 在交叉路口停车, 然后脚放在刹车踏板上缓慢前行

Under all circumstances,
it is preferable to drive:

- A) without passing other vehicles
- B) 5 km/h below the speed limit
- C) 5 km/h above the speed limit
- D) at a speed adapted to the road and weather conditions

819< Enter - See the answer #

.819 在所有情况下, 如何驾驶更可取 D 以适合路况和天气状况的速度

Your physical and mental health:

- A) have no impact on your driving ability
- B) have very little influence on your driving behavior
- C) have very little influence on your driving skills
- D) are factors that can have considerable influence upon your behavior and skills

820< Enter - See the answer #

.820 你的身体和精神健康 D 可以相当大的影响你的行为和技术

**The most important factor
while driving is:**

- A) the environment
- B) the condition of the vehicle
- C) the density of the traffic
- D) the attitude of the driver

821< Enter - See the answer #

.821 驾驶中最重要的因素是 D 驾驶员的态度/姿势(attitude)

Under all circumstances,
you should always drive at a speed
that will allow you to stop
your vehicle:

- A) immediately on the spot
- B) within 80 meters if the road
is dry
- C) in complete safety, whatever
the condition of the road
- D) within 110 meters if the road
surface is wet

822< Enter - See the answer # - - - -

.822 在所有情况下，你应该一直以可允许你如下述方式停车的速度行驶 C 无论路况如何，你都可以完全安全的停车

Your braking distance increases with
the speed of your vehicle.
If, for example, you double your speed,
the braking distance will be:

- A) the same
- B) doubled
- C) tripled
- D) quadrupled

823< Enter - See the answer # - - - -

.823 你的刹车距离随着你的车速的增加而增加 .例如,如果你的车速变为原来的 2 倍,你的刹车距离将会边为 D 原来的 4 倍

All the factors
mentioned below have an effect
on braking distance.
Which has the greatest effect?

- A) Road conditions
- B) Tire wear
- C) Tire inflation
- D) Speed

824< Enter - See the answer #

.824 下述因素都对刹车距离有影响,哪个是最大的影响 D 速度

All of these factors
affect your braking distance.
Which pair have the greatest effect?

- A) Road conditions and tire wear
- B) Speed and road conditions
- C) Tire inflation and vehicle weight
- D) Speed and vehicle weight

825< Enter - See the answer #

.825 下述因素都对刹车距离有影响,哪两个是最大的影响 B 速度和路况

The total stopping distance of your vehicle is influenced by certain factors.

Which one(s)?

- A) The time required for braking only
- B) Perception and reaction time
- C) Reaction time and braking distance
- D) Perception time, reaction time, and braking distance

826< Enter - See the answer #

.826 你的总停车距离受某些因素的影响, 是下面哪一个 D 感知时间, 反应时间和刹车距离

What is the effect of high speed on traction?

- A) High speed decreases traction
- B) High speed increases traction
- C) Speed has no effect on the traction of steel-belted tires
- D) High speed decreases traction only when it rains

827< Enter - See the answer #

.827 高速对摩擦力有何影响 A 高速减小摩擦力

After driving on an expressway for
a few hours, you exit
and return to urban traffic.

How can you break the spell of high
speed driving
and readjust to the speed limit?

- A) Check the speedometer frequently
- B) Stop for one half hour
- C) Follow the flow of the traffic
- D) Any one of these answers

828< Enter - See the answer #

.828 你在高速公路行驶几个小时后退出,返回到市区, 你如何停止高速行驶,重新调节速度限制 A 频繁检查速度计

If the speed
of your vehicle is tripled,
the force of impact increases:

- A) 2 times
- B) 3 times
- C) 6 times
- D) 9 times

829< Enter - See the answer #

.829 如果你的车速是原来的三倍, 影响力增加 D 9 倍

The more you increase the speed
of your vehicle,
the more it becomes important ...

- A) to check all around you constantly
- B) to check far ahead so as to detect hazardous situations as early as possible
- C) to concentrate your vision on the vehicle ahead of yours
- D) to constantly check traffic behind you

830< Enter - See the answer #

.830 你的车速增加越多, 什么越重要 B 提前检查远方以便尽早察觉危险情况

The best way
to evaluate the distance
between you and the vehicle ahead
of yours is to:

- A) examine the environment using quick glances
- B) look at the vehicle using fixed objects as reference points
- C) look at the vehicle in relation to the lines painted on the road
- D) stare at the vehicle to create a point of reference

831< Enter - See the answer #

.831 估计你和你前方车辆的距离的最佳方法是 B 应用固定物体作为参照点看该车

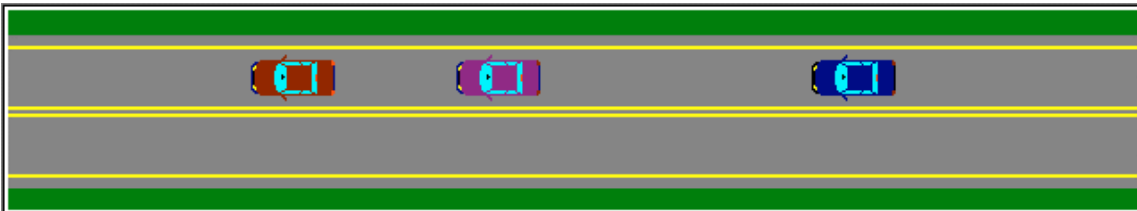
When you follow another vehicle,
you must maintain a safe
and reasonable following distance.

To do this properly, what four
principal factors must be considered?

- A) Traffic density, road conditions,
weather conditions, and speed
- B) The length of the trip, speed,
road and weather conditions
- C) The length of the trip, weather
conditions, speed and the number
of passengers
- D) Speed, the number of passengers,
road conditions, and traffic
density

832< Enter - See the answer # - - - -

.832 当你跟在其他车后面,你必须保持安全和合理车距,为正确做到这一点,你必须注意下面哪四个重要因素? A 车辆密度,道路状况,天气状况和速度

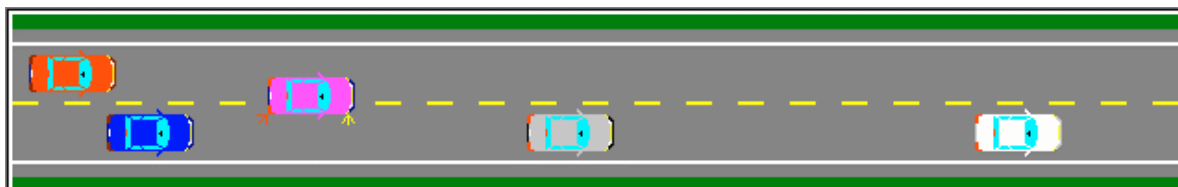


Which of the following is
a safe following distance to maintain
between vehicles in motion
under ideal driving conditions?

- A) 1 second
- B) 2 seconds
- C) 200 meters
- D) 30 meters

833< Enter - See the answer # - - - -

.833 在理想的驾驶条件下,哪一个行进车辆应保持的安全车距 B 2 秒



When the driver of another vehicle
cuts too closely in front of you,
you should:

- A) accelerate, pass and get away
as quickly as possible
- B) follow closely so as not to
miss any opportunity to pass
- C) flash the high beams to remind
the driver of your presence
- D) reduce speed to increase your
following distance

834< Enter - See the answer #

.834 当另一车的司机从很接近你前方的地方切入, 你应该 D 减速以增加车距



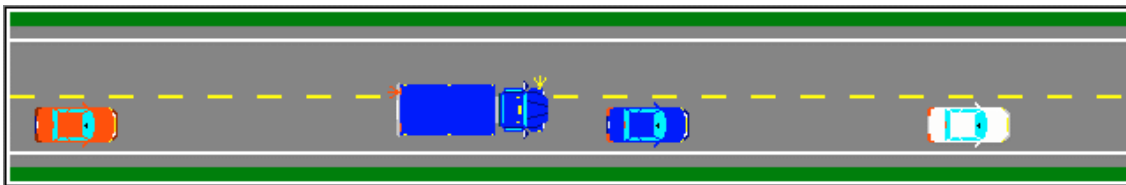
A driver is in the process of
inserting his/her vehicle in the space
that separates you
from the vehicle you are following.

You should:

- A) slow down to regain the correct
following distance
- B) accelerate to prevent the driver
from entering the space
- C) tap the horn to warn the driver
of your presence
- D) get used to following at this
closer distance

835< Enter - See the answer #

.835 一个司机从你的车和你所跟的车中间插入, 把你们分开, 你应该 A 减速以便恢复正确的车距



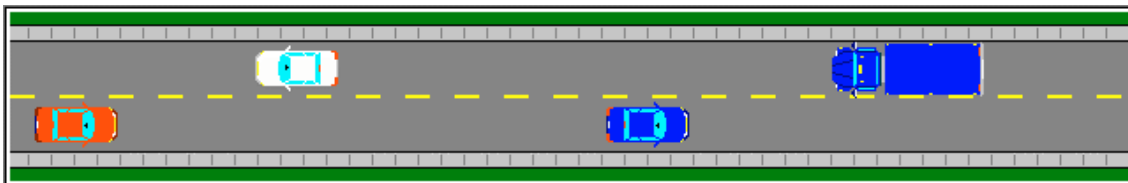
The diagram shows a two-lane road with a dashed yellow center line. A tractor trailer is in the left lane, moving past a car in the right lane. The tractor trailer is blue and white, and the car is blue. A yellow arrow points to the tractor trailer's front.

When a tractor trailer starts overtaking your vehicle,
you should:

- A) speed up so that passing is not necessary
- B) move to the left to prevent passing
- C) signal the truck driver not to pass
- D) move to the right and slow down to facilitate the passing maneuver

836< Enter - See the answer #

.836 当一个拖拉机拖车开始超过你的车时,你应该 D 向右行驶并减速,以利于他的超车



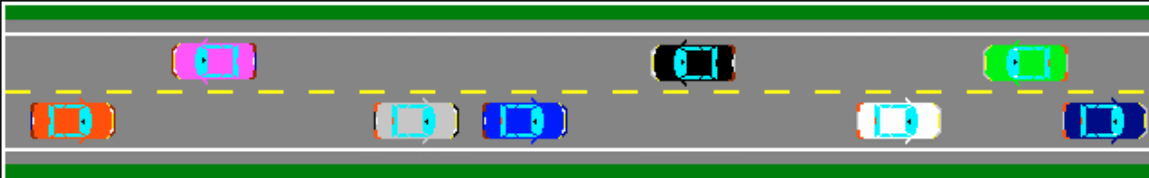
The diagram shows a narrow two-way road with a dashed yellow center line. A car is in the left lane, and a large truck is in the right lane, moving towards the car. The car is blue, and the truck is blue and white.

When you meet an oncoming large vehicle
on a narrow roadway,
(two-way, one lane in each direction)
you should:

- A) move to the right in your lane
- B) drive onto the shoulder
- C) brake sharply to reduce speed
- D) activate the hazard lights

837< Enter - See the answer #

.837 当你在一个狭窄的公路上遇到一个迎面而来的大型车辆,(双向的,每个方向有一个车道),你应该 A 驶向你车道的右侧



What should you do
if another vehicle tailgates you
while you are driving in heavy traffic?

- A) Tap the horn and check the rear view mirrors constantly
- B) Slow down and in so doing encourage the other driver to pass
- C) Leave the road if possible
- D) Pump the brake sharply

838< Enter - See the answer #

.838 当你在交通繁忙时开车,另一辆车紧随你的车后行驶,你应该如何做 B 减速鼓励另一司机超车



When you are following a motorcycle,
you should:

- A) keep to the left-hand side of your lane
- B) follow it a little closer than if it were a car
- C) follow it a greater distance than if it were a car
- D) wait for the motorcyclist to wave you on before passing

839< Enter - See the answer #

.839 当你跟着一辆摩托车时,你应该 C 保持一个比与汽车更大的车距



The diagram shows a top-down view of a two-lane road. A large white truck is in the right lane, moving away from the viewer. A smaller blue car is in the left lane, following the truck. A yellow line separates the two lanes. The road is flanked by green areas representing grass or trees.

What must you do when following a large truck or bus?

- A) Nothing in particular
- B) Increase your following distance to improve your field of vision
- C) Pass immediately
- D) Be careful of air turbulence generated by these large vehicles

841< Enter - See the answer #

841. 当你跟着一个大型的卡车或公共汽车时, B 增加你的车距以便改善你的视野

The most difficult time of day, with respect to the driver's vision, is:

- A) day time
- B) night time
- C) dawn and dusk
- D) from 9 AM to 1 PM

842< Enter - See the answer #

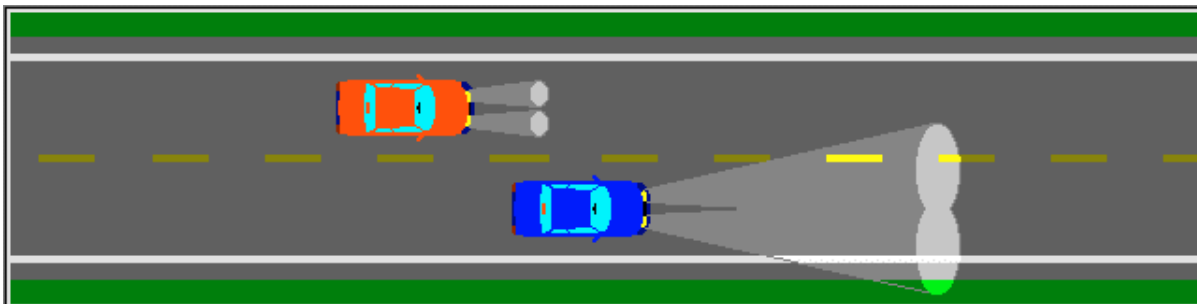
..842 一天里对司机的视觉来说最困难的时候是: C 黎明和黄昏

What is the main reason
for driving slower at night?

- A) The risk of falling asleep is greater at night
- B) You cannot see as far ahead at night
- C) At night, drivers often take unnecessary risks
- D) The braking distance is increased at night

843< Enter - See the answer #

.843 夜间慢速行车的主要原因是: B 在夜间你不能看到前方更远的地方

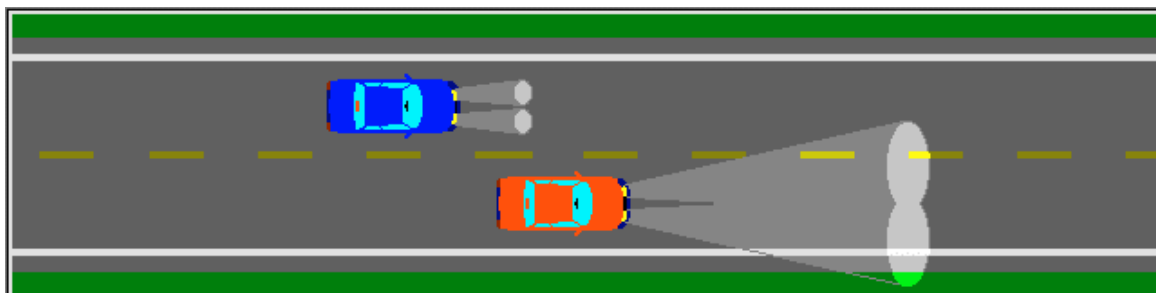


At night, a vehicle is passing you;
you should dim the lights to low beams
when the other vehicle:

- A) changes lanes to start passing
- B) is abreast of your vehicle
- C) is a few car lengths ahead of you in the left lane
- D) begins to reenter your lane ahead

844< Enter - See the answer #

.844 在夜间, 一个车要超过你, 在何种情况下你应该使车灯变暗,变为短焦距光 B 当其他车与你并排时



When passing another vehicle at night;
you should switch to the high beams
when your vehicle:

- A) changes lanes to start passing
- B) is abreast of the other vehicle
- C) is a few car lengths past the other vehicle in the left lane
- D) returns to the right lane

845< Enter - See the answer #

.845 在夜间,当你要超别的车时,在何种情况下你应该切换为远光灯 B 当你的车与他车并排时

To drive safely at night,
you should:

- A) never exceed 50 km/h
- B) never exceed 100 km/h
- C) drive at a speed related to the range of the headlights
- D) wear sunglasses to decrease the glare caused by oncoming headlights

846< Enter - See the answer #

.846 为了在夜间安全行驶,你应该 C 以与前灯照亮范围相关的速度行驶

While driving at night,
the headlights of an oncoming vehicle
are blinding you.

What is the best thing to do?

- A) Look down at the road near
the front of your car
- B) Blink your eyes rapidly
- C) Look far ahead towards the
right side of the roadway
- D) Look straight ahead

847< Enter - See the answer #

.847 当在夜间行驶时,一辆迎面而来的车的前灯使你看不清,你最好如何做 C 向道路的右前方远处看

You are driving at night
using the high beam headlights.
You must dim to the low beams when:

- A) approaching an intersection
- B) you meet or follow another
vehicle relatively closely
- C) approaching a railroad crossing
- D) you drive down a steep hill

848< Enter - See the answer #

.848 当在夜间行驶时,你采用了前灯的远光灯,在何种情况下你必须变暗为短焦距光 B 你遇到或跟随另一辆相对较近的车

When driving at night
or other poor visibility conditions
what following distance should
you maintain from the vehicle ahead?

- A) Greater than normal following distance
- B) Shorter than usual, so as to be closer to the other vehicle
- C) The usual 2 second distance
- D) A distance equal to the range of the headlights or visibility

849< Enter - See the answer #

.849 当在夜间或其他能见度差的情况下行驶，你与前方的车辆应保持怎样的车距 A 比正常情况下的车距大

Which one of the following
statements is false?

- A) Using a lighter or striking a match when driving at night could cause glare
- B) The night position of the rear view mirror allows drivers to avoid glare from the lights of vehicles following them
- C) A driver can avoid glare from the headlights of other vehicles by wearing tinted lenses
- D) With regards to vision, dusk or twilight are the most dangerous times to drive

850< Enter - See the answer #

.850 下面哪一个陈述是错的？ A 在夜间驾驶时，用打火机或者是划火柴会引起耀眼的光
B 后视镜的夜间位置可使驾驶员避免来自后面车灯的耀眼的光
C 司机戴有色镜可以避免来自其他车辆前灯的耀眼的光
D 考虑到视觉因素，黄昏和黎明是最危险的驾驶时间

(C)

In order to make a correct right turn,
you should position your vehicle
in the lane ...

- A) closest to the centre line of
the roadway
- B) closest to the right side of
the roadway
- C) closest to the left side of
the roadway
- D) of your choice, as long as you
properly signal your intention

851< Enter - See the answer # - - - -

.851 为了正确的右转,你的车应该在车道的什么位置 B 最接近道路的右侧

You are driving on a one-way street.
You intend
to turn left at the next intersection.
In which lane should you drive?

- A) The lane closest to the center
of the road
- B) The lane closest to the left
side of the road
- C) The lane closest to the right
side of the road
- D) Any lane, provided you clearly
signal your intentions prior
to turning

852< Enter - See the answer # - - - -

.852 你正行驶在单向道上,你想在下一个路口左转,你应在哪一个车道行驶 B 最靠近道路左侧的车道

You are driving on a two-way street.
You intend to turn left.

In which lane
should you position your vehicle?

- A) The lane closest to the center of the road
- B) The lane closest to the left side of the road
- C) The lane closest to the right side of the road
- D) Any lane, the lane position is not important as long as you signal your intentions

853< Enter - See the answer # - - - -

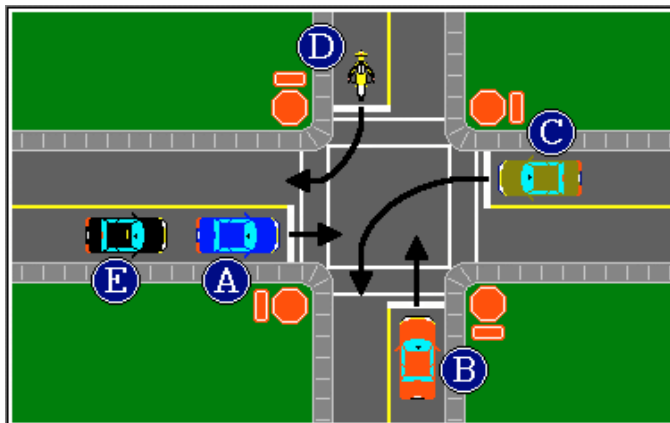
.853 你正行驶在单向道上, 你想在下一个路口左转, 你应在哪一个车道行驶 A 最靠近道路中央的车道

After completing a left turn
at an intersection,
you should:

- A) check the rear-view mirror
- B) turn off the left turn signal
- C) tap the brake pedal
- D) change lanes to the right, if possible

856< Enter - See the answer # - - - -

.856 在交叉路口完成左转后, 你应该 D 如可能的话变为右车道

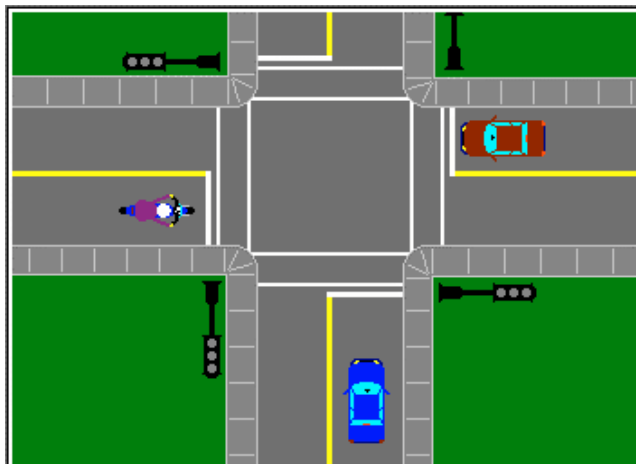


To whom
should
the driver
of vehicle A
pay the most
attention?

- A) Vehicle B
- B) Vehicle C
- C) Motorcycle D
- D) Vehicle E

857< Enter - See the answer #

.857 A 车的司机应该主要注意哪一辆车 B C 车

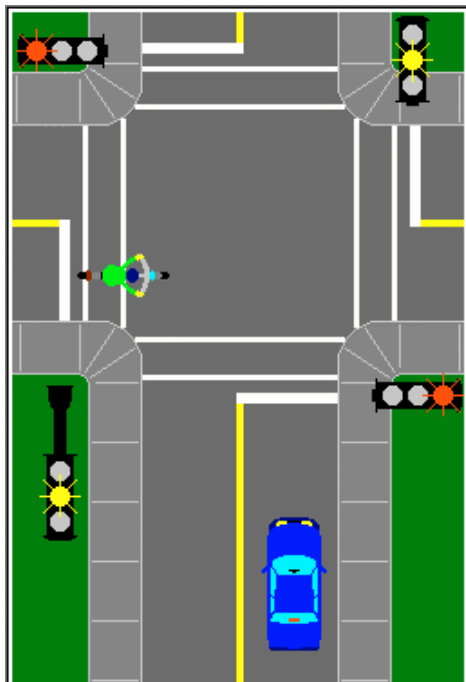


Approaching
an intersection,
the traffic
lights are
not working.
You must
stop and yield
the right-of-way:

- A) to vehicles on your left
- B) to drivers signalling a right turn
- C) to drivers signalling a left turn
- D) to vehicles on your right which
reached the intersection first

858< Enter - See the answer #

.858 在接近一个交叉路口时，交通灯不工作了，你必须停车,并把通行权让给: D 在你右边的比你先到
达交叉路口的车辆

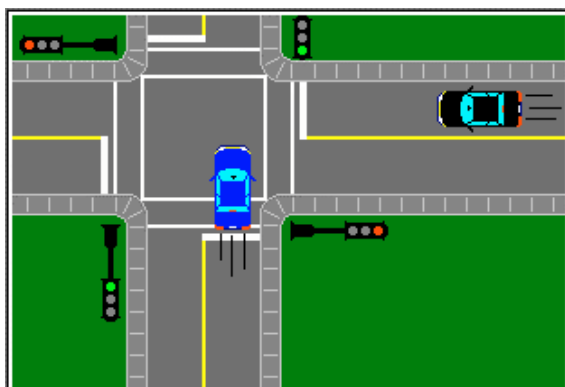


You are approaching
a flashing amber light,
as illustrated,
you must:

- A) slow down, check traffic, proceed if clear
- B) accelerate across the intersection
- C) stop
- D) proceed at the same speed

859< Enter - See the answer #

.859 如图所示,你正接近一个闪烁的黄灯,你必须 C 停车

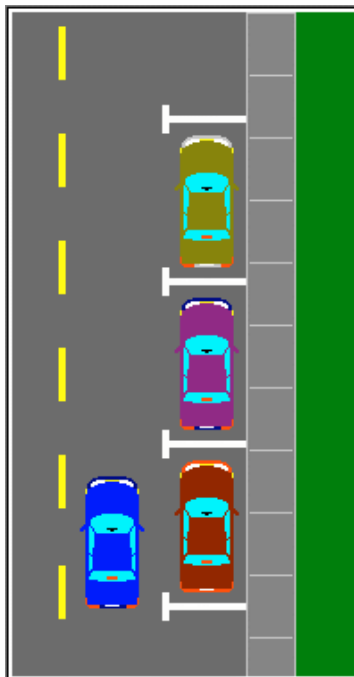


While crossing
an intersection,
you notice a
vehicle
approaching at
high speed
from your right on
the cross street.
You should:

- A) free the intersection as quickly as possible
- B) make an emergency stop
- C) slow down and change lanes
- D) tap the horn and proceed

860< Enter - See the answer #

.860 当你通过一个交叉路口时,你注意到一个车正以高速从你的右侧横向公路驶来,你应该 A 尽快离开交叉路口

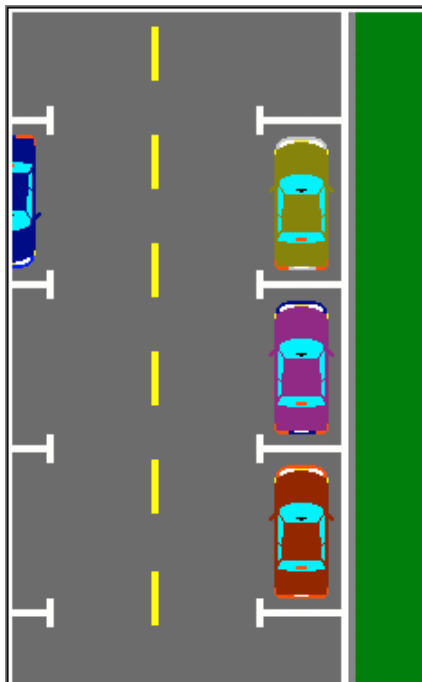


You are driving next to
parked cars,
you should be
on the lookout for:

- A) animals that may run out in front of your vehicle suddenly
- B) doors of parked cars that might swing open in front of you
- C) motorcyclists
- D) cyclists

861< Enter - See the answer #

.861 你正靠近停放的车辆行驶，你应该警惕： B 停放车的车门可能在你前面摆动打开



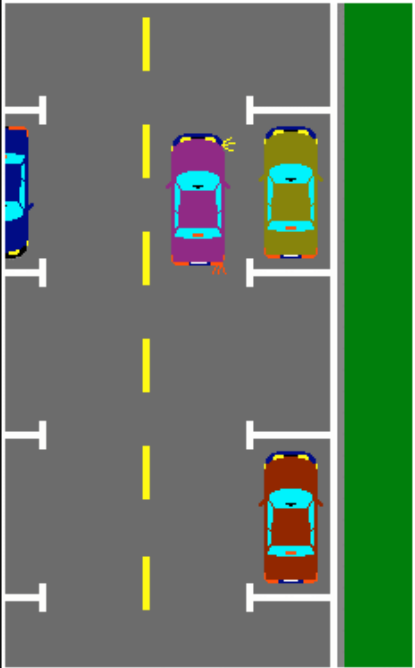
Your vehicle is parked
next to the curb
as illustrated.

Before driving out of
the parking stall,
you should:

- A) check the mirrors and left blind spot, signal, then advance slightly
- B) move slightly to the left and then signal your intentions
- C) advance slightly then check the blind spot
- D) signal, and move slightly left

862< Enter - See the answer #

.862 如图所示,你的车停放在路边,当你驶离停放栏时你应该, A 检查反光镜和左侧盲点,打信号,然后缓慢向前



You intend to parallel park, as illustrated.

To perform the maneuver safely, you should first:

- A) turn to look behind your vehicle
- B) reverse slowly and turn the steering towards the curb
- C) reverse slowly and turn the steering away from the curb
- D) check the rear-view mirrors while you are backing

863< Enter - See the answer #

.863 你想如图所示平行停放, 为操作安全你应该首先 A 转头看看你的车的后面

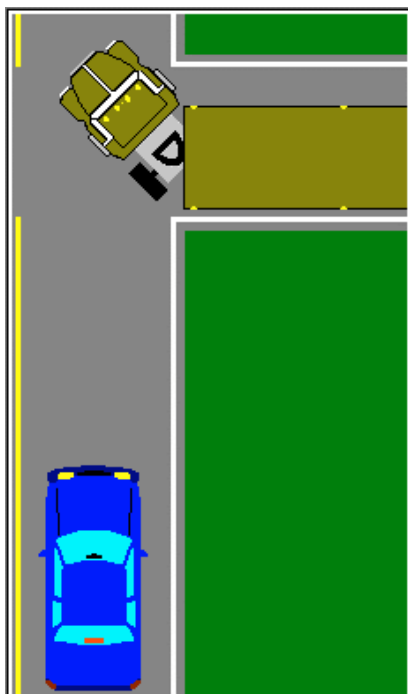


If the truck is backing onto the roadway, you should:

- A) slow down
- B) stop as close to the truck as possible
- C) accelerate and pass the truck as quickly as possible
- D) stop immediately and give the truck the right-of-way

864< Enter - See the answer #

.864 如果这个卡车正要倒车到该路上, 你应该 D 立即停车, 把通行权让给卡车.



If the truck is
entering
the roadway,
as illustrated,
you should:

- A) stop and wait for the truck to proceed
- B) stop as close to the truck as possible
- C) accelerate and pass the truck as quickly as possible
- D) slow down

865< Enter - See the answer #

.865 如图所示如果这辆卡车进入该路,你应该 A 停车并等待卡车通过

On a sharp curve,
at high speed,
your vehicle will tend to move:

- A) towards the outside of the curve
- B) towards the inside of the curve
- C) towards the center of the road
- D) none of the above

866< Enter - See the answer #

.866 在你个急转弯处, 你的车如果高速行驶, 其运动方向取向于 A 朝向弯道的外侧

When roads are properly designed,
the banking,
while rounding the curve,
should slope down toward the:

- A) inside of the curve
- B) outside of the curve
- C) center of the road
- D) both sides of the road
(crowned road)

867< Enter - See the answer #

.867 在道路设计正确的情况下，弯道处的斜坡应该斜向 A 弯道的内侧

Which of these road surfaces
is the most dangerous
when entering a left curve?

- A) A crowned road
- B) A banked road
- C) A flat road
- D) A paved road

868< Enter - See the answer #

.868 当进入一个向左的弯道时，下列哪种路面是最危险的 A 凸面的道路

**What is the correct procedure
for negotiating curves?**

- A) Always slow down to 20 km/h
- B) Slow down before the curve, then maintain speed rounding the curve, and then accelerate when exiting
- C) Accelerate before the curve, then maintain speed in the curve, and slow down when exiting
- D) Brake until the center of the curve and then accelerate when exiting the curve

869< Enter - See the answer #

.869 如何正确的越过一个弯道 B 在弯道前减速,然后维持这一速度转过弯道,在出弯道时加速

**While negotiating a curve,
if the pavement is dry,
you should:**

- A) apply sufficient pressure on the accelerator to maintain speed
- B) continue to slow down until the mid-point of the curve, then accelerate until the end
- C) downshift to control vehicle speed
- D) ease off the accelerator to continue to slow down

870< Enter - See the answer #

.870 在越过一个弯道时,若公路是干燥的,你应该 A 对加速器使用足够的压力以维持速度

To avoid sudden braking on a curve,
you should:

- A) accelerate before the curve
- B) maintain speed approaching
and throughout the curve
- C) slow down before the curve
- D) brake while negotiating the
curve

871< Enter - See the answer #

..871 为了避免在弯道上意外刹车, 你应该 C 在弯道前减速

Where should you focus your vision
while negotiating a curve?

- A) Closer than normal
- B) On the lines painted on the
pavement ahead
- C) As far as possible towards
the inside of the curve
- D) Toward the oncoming lane

872< Enter - See the answer #

.872 在越过弯道时,你的视线应集中在 C 弯道内侧尽可能远的地方

While negotiating a curve,
you feel that you are driving too fast.
To slow down,
you should:

- A) apply the brakes firmly
- B) downshift to use the engine compression to slow down
- C) ease off the accelerator gradually
- D) wait until the end of the curve to slow down

873< Enter - See the answer #

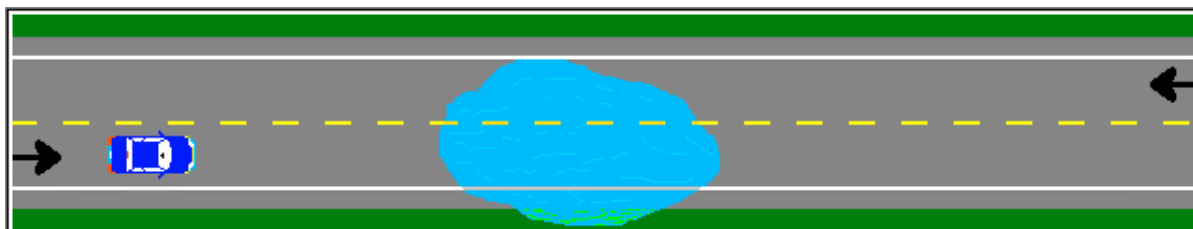
.873 在越过弯道时,你感觉你开得太快了,为了慢下来,你应该 C 逐渐放松加速器

While rounding a curve,
you notice
a large puddle of water ahead
you should:

- A) ease off the accelerator gradually
- B) downshift to use the engine compression to slow down
- C) apply the brakes firmly
- D) accelerate to cross the puddle more quickly

874< Enter - See the answer #

.874 在越过弯道时,你发现前面有一个大水坑 你应该 A 逐渐放松加速器



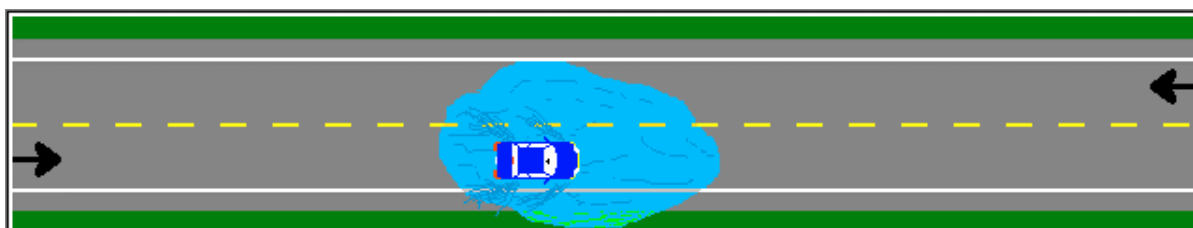
While driving, you notice
a puddle of water on the road ahead.

It is preferable to:

- A) accelerate to feel less impact
- B) cross the puddle without slowing
- C) slow down before the puddle and cross at a slower speed
- D) slow down before the puddle then accelerate while crossing it

875< Enter - See the answer # - - - -

.875 在行驶过程中,你发现道路前方有一个大水坑 你最好 C 在水坑前减速并慢速越过

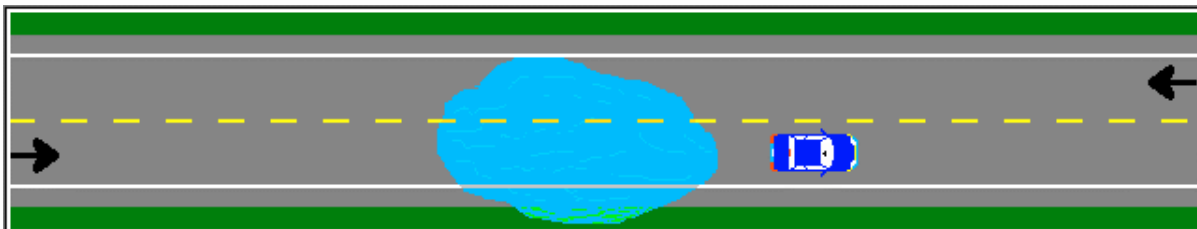


Which automotive system
may be most dangerously affected
after driving
through a deep puddle of water?

- A) The electrical system
- B) The cooling system
- C) The exhaust system
- D) The brake system

876< Enter - See the answer # - - - -

.876 在驶过一个深的水坑之后,汽车的哪个系统受的最危险的影响 D 刹车系统



After driving through a deep puddle,
you should:

- A) test the carburetor for water
- B) test the headlights
- C) test the brakes by applying
the brake pedal
- D) fast idle the engine to check
the ignition system

877< Enter - See the answer #

.877 在驶过一个深的水坑之后，你应该 C 踩刹车踏板测试刹车

What is
the best way to dry the brakes
after driving
through a puddle of water?

- A) Use an absorbant cloth after
removing the wheels
- B) Accelerate so that increased air
circulation will dry them quickly
- C) While driving, press gently and
simultaneously on the brake and
the accelerator
- D) Use the engine compression to stop
as you cannot dry the brakes while
driving

878< Enter - See the answer #

.878 在驶过一个水坑之后，什么是干燥刹车的最好方法 C 在驾驶过程中，同时轻轻的踩刹车和加速器

Rain makes the road surface
even more slippery:

- A) after the rain stops
- B) one hour after it starts raining
- C) during the first minutes of a rainfall
- D) after it has rained for several hours

879< Enter - See the answer #

.879 在何时雨水使路面更滑 C 在下雨的开始几分钟

When driving on a slippery roadway,
you should:

- A) increase your following distance
- B) drive closer to the center of the roadway
- C) vary your speed regularly
- D) drive to the left side of your lane if the car ahead drives on the right side of it and vice versa

880< Enter - See the answer #

.880 当行驶在一个滑的路面, 你应该 A 增大车距

When a layer of water accumulates
between the tires and the pavement,
the vehicle will lose traction.

This phenomenon is known as:

- A) traction
- B) hydroplaning
- C) inertia
- D) centrifugal force

881< Enter - See the answer # - - - -

.881 当在车轮和路面之间积了一层水时,车将失去摩擦力,这一现象叫做 B 湿路滑胎

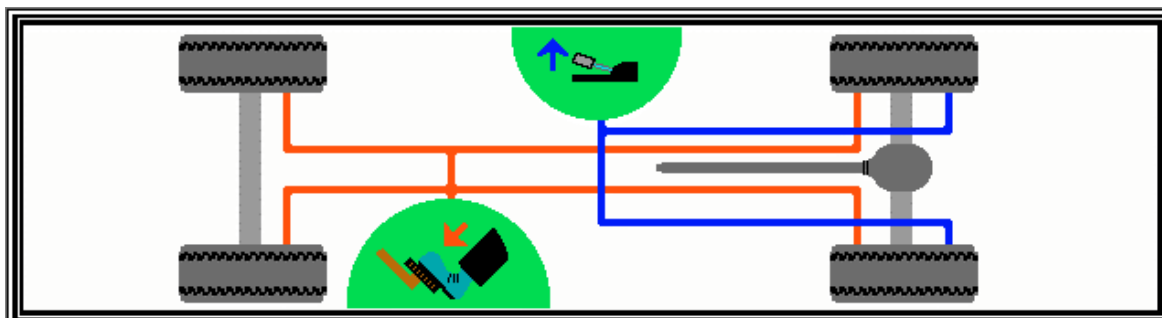
Water between the tires and
the road surface

is even more dangerous
if you are driving:

- A) with bald tires
- B) with under-inflated tires
- C) with over-inflated tires
- D) on very hard pavement

882< Enter - See the answer # - - - -

.882 车轮和路面之间的水对你来说更危险,如果你驾驶中 A 使用的是光秃的轮胎



On most vehicles,
the parking brake acts upon:

- A) all four wheels
- B) the front wheels
- C) the front wheels only in the case of a front wheel drive
- D) the rear wheels only

883< Enter - See the answer #


.883 对多数车辆来说, 停车制动是在 D 只在后轮

When you intend to start the engine,
the first thing you should do is:

- A) check that the parking brake is applied
- B) shift the selector lever to neutral
- C) check that the accelerator pedal operates properly
- D) check the service brake pedal

884< Enter - See the answer #

.884 当你想启动发动机时, 你应做的第一件事是 A 检查应用停车制动



On a vehicle with an automatic transmission, which gear position(s) allow(s) you to start the engine?

- A) Only [P] (park)
- B) [D] (drive) and [R] (reverse)
- C) [P] (park) and [N] (neutral)
- D) Only [N] (neutral)

885< Enter - See the answer # - - - -

.885 在一个有自动变速传动的车上,, 哪个档位允许你启动发动机 C P(停放)档和 N 档(空档)

The radiator cap should be removed:

- A) only when the engine is warm
- B) only by a mechanic
- C) only when the engine is cold
- D) any time it is necessary

886< Enter - See the answer # - - - -

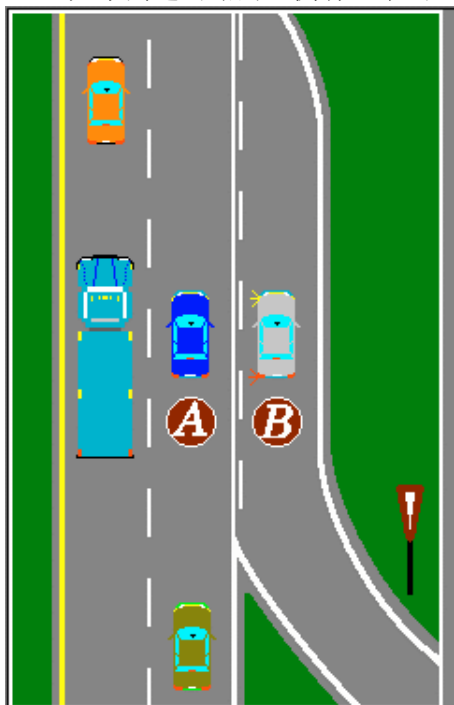
.886 水箱盖可以移开 C 只有当发动机是冷的时候

If there is an exit
on the left-hand side of an expressway,
you must expect that ...

- A) traffic in the right lane will remain at a constant speed
- B) vehicles in the left lane will accelerate
- C) traffic in the left lane will proceed straight ahead
- D) vehicles will change lane prior to the exit

887< Enter - See the answer #

.887 如果高速公路的左侧有一个出口，你必须预料到 D 在出口前有些车辆将要换道



In this expressway
situation,

the driver of
vehicle A should:

- A) change lanes left
- B) brake sharply to yield to vehicle B
- C) accelerate to pass vehicle B
- D) slow down if car B accelerates or accelerate if it slows down

888< Enter - See the answer #

.888 在此高速公路的状况下,A 车的司机应该: D 如果 B 车加速他就要减速, 如果 B 车减速他就要加速

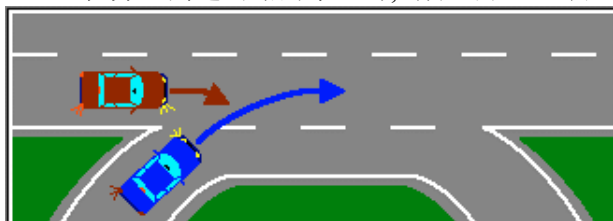


To merge
with expressway traffic
you should:

- A) slow down to allow the expressway traffic to proceed
- B) on the acceleration lane, signal and then match speed with the traffic flow, before merging
- C) drive directly onto the expressway while signalling
- D) drive onto the acceleration lane

889< Enter - See the answer #

.889 在并入高速公路的车流时，你应该 B 上加速车道，打信号，在并入前跟上车流的速度



Entering
an expressway,
A vehicle
signals its
intention to exit.

You should:

- A) allow this vehicle to exit before accelerating to merge
- B) brake sharply to a full stop
- C) accelerate to enter the autoroute in front of the vehicle
- D) ignore the vehicle and accelerate to match the traffic

890< Enter - See the answer #

.890 当进入高速公路时，一辆车打信号表示他要退出，你应该 A 在加速并入前先让这辆车退出

When passing another vehicle,
you should return
to your original lane when you:

- A) are one car length ahead of the vehicle you just passed
- B) no longer see the other vehicle in your blind spot
- C) see the complete front of the vehicle you just passed in the rear-view mirror
- D) are more than 18 car lengths ahead of the other vehicle

892< Enter - See the answer # - - - -

.892 当超越另一辆车时，何时你应该退回到原来的车道 C 从后视镜中你可以完全看到刚才超过的那辆车的前面

You are passing a vehicle on the left.


Another vehicle approaches
very quickly from behind you and
then follows you too closely.

You should:

- A) slow down to warn the other driver that he/she is too close
- B) brake gently several times
- C) maintain speed and return to the right when this can be done safely
- D) move sharply behind or in front of the vehicle you were passing

893< Enter - See the answer # - - - -

.893 你正从左侧超车，另一辆车从你的后面迅速跟进并紧跟着你，你应该 C 维持速度，在安全的时候回到右侧



A vehicle is passing you
on the left.


The driver of the passing
vehicle suddenly
decides not to do so
because of an oncoming
vehicle.

You should:

- A) proceed at the
same speed
- B) accelerate
- C) slow down
- D) move as far as
possible towards
the right

894< Enter - See the answer #

.894 一辆车正从左侧超越你，超车的司机突然发现迎面来车而决定不超车了，你应该 B 加速



While another vehicle
is overtaking your vehicle,

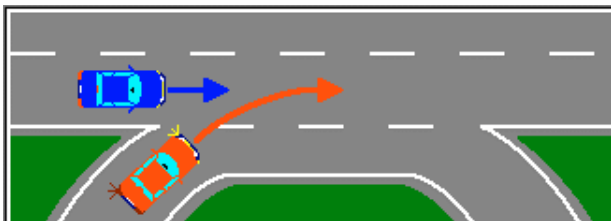
you notice
that it may collide
with an oncoming vehicle,

you should:

- A) veer onto the shoulder
on your right
- B) signal the oncoming
driver
- C) stop completely
- D) accelerate if he/she
slows down, or slow
down if he/she
accelerates

895< Enter - See the answer #

.895 当一辆车正超越你的时候，你发现他会与迎面而来的车相撞，你应该 D 加速如果他减速，或减速如果它加速

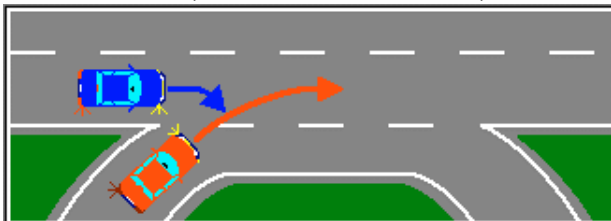


Approaching
an access ramp,
as illustrated,
you should:

- A) change lanes towards the left if possible
- B) accelerate to prevent the vehicle from merging in front of you
- C) tap the horn to warn the other driver of your presence
- D) ignore the other vehicle; you have the right-of-way

896< Enter - See the answer #

.896 如图所示,当接近入口斜坡的时候,你应该 A 如有可能换左侧车道

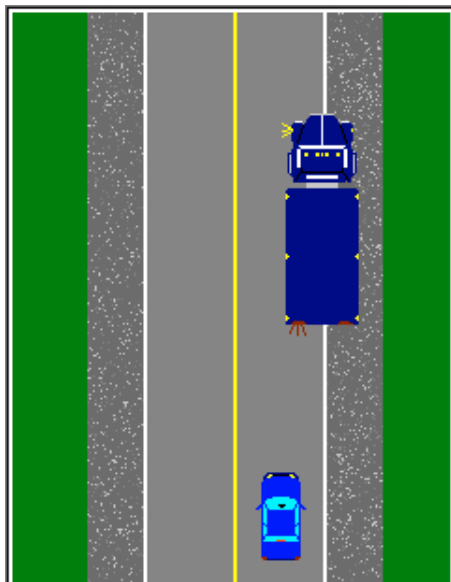


You want to exit
the expressway.
Approaching
the exit
in this situation,
you should:

- A) accelerate and move in front of the other vehicle, then brake just prior to the exit ramp
- B) slow down to permit the other vehicle to enter ahead of you
- C) brake sharply and then move onto the deceleration lane behind the other vehicle
- D) proceed to the next exit

897< Enter - See the answer #

.897 如图所示当你接近出口时,你想退出高速公路,你应该. A 加速并驶到其他车的前面,然后在出口斜坡前刹车



If a truck is
reentering the roadway
after an emergency stop
on the shoulder,
as shown,
you should:

- A) stop and wait for
the truck to proceed
- B) stop on the shoulder
of the roadway
- C) accelerate and pass
the truck as quickly
as possible
- D) slow down

898< Enter - See the answer # - - - -

.898 如图所示, 如果一辆卡车在路旁紧急停车后重新进入公路, 你应该 A 停车, 并等待卡车前行

In winter,
you should drive more smoothly
because one of the following factors
could be different.
Which one?

- A) Traction
- B) Gravity
- C) Force of impact
- D) The presence of
snowmobiles

901< Enter - See the answer # - - - -

901 在冬天, 你应该驾车更平稳, 因为下列因素之一会不同, 是哪一个 A 摩擦力

In winter,
you should maintain a longer following
distance from other vehicles,
because:

- A) reaction time could be longer
- B) braking distance could be longer
- C) perception time could be longer
- D) of all the above reasons

902< Enter - See the answer # - - - -

.902 在冬天,你应该与其他车辆保持更长的车距, 因为 B 刹车距离可能会变长

Before driving after a snowfall,
the most important thing
to do is ...

- A) place additional weight in
the trunk
- B) deflate the tires slightly
- C) fasten your seat belt
- D) remove ice or snow from
the windows and lights

903< Enter - See the answer # - - - -

.903 下雪后, 你驾车前最重要的事是 D 去除车窗和车灯上的冰或雪

To facilitate putting the vehicle
in motion

after a heavy snowfall,
you should:

- A) keep the wheels as straight
as is possible
- B) turn the wheels to the left
- C) turn the wheels to the right
- D) accelerate more than usual

904< Enter - See the answer # - - - -

.904 在一场大雪后,为了便于开动你的车,你应该 A 把住方向盘,尽可能跑直线

Before entering heavy traffic
in cold weather,

you should:

- A) place additional weight
in the trunk
- B) deflate the tires slightly
- C) fasten your seat belt
- D) allow sufficient time for
the engine to warm up

905< Enter - See the answer # - - - -

.905 寒冷天气时,进入繁忙的车流前,你应该 D 让发动机有足够的时间预热

In winter,
it is important to keep the
gas tank as full as possible,
in order to:

- A) avoid an empty gas tank
- B) add weight to the vehicle
- C) prevent condensation and
then gas line freezing
- D) provide better balance to
the vehicle

906< Enter - See the answer # - - - -

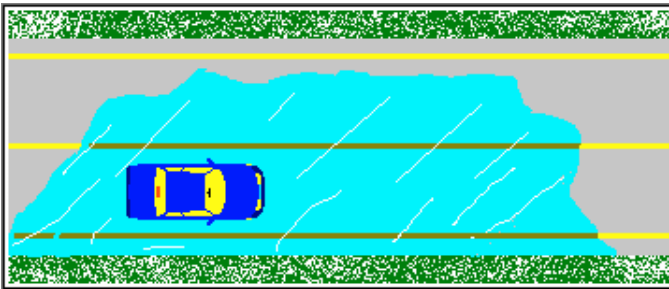
.906 在冬天, 保持油箱尽可能满是很重要的, 这是为了 C 预防凝固和汽油管冻结

Ice on the pavement
is even more slippery
when the temperature is ...

- A) near the freezing point (0° C)
- B) just below freezing (-5° C)
- C) very cold (-15° C)
- D) above the freezing point (10° C)

907< Enter - See the answer # - - - -

.907 在何温度下, 有冰的路面更滑 A 接近冰点 (0 度)

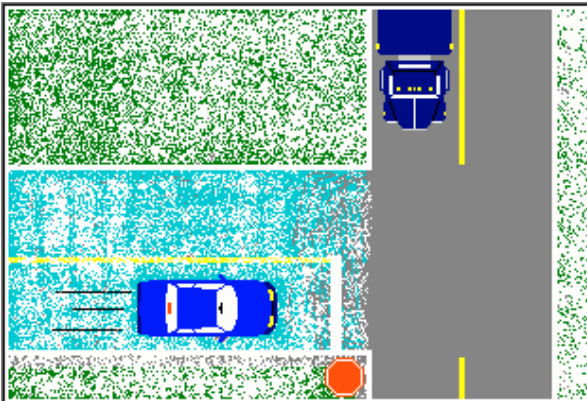


To prevent losing control of your vehicle,
while driving on an icy roadway
you should:

- A) steer with small jerkey motions to prevent a sudden skid
- B) be gentle with the steering, brakes, and accelerator
- C) brake sharply to reduce speed
- D) accelerate to improve traction

908< Enter - See the answer #

.908 在行驶在有冰的路上时, 为了避免你的车失去控制,你应该 B 平缓的转向,刹车和加速

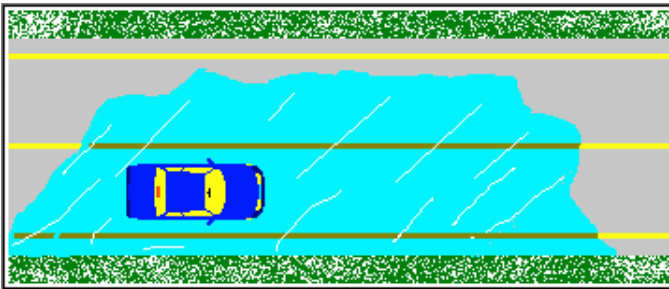


When you brake on an icy surface and your car does not stop,
(no ABS brakes)
you should:

- A) shift to neutral, unlock the parking brake and pump it
- B) press harder on the brake pedal
- C) apply the emergency brake completely
- D) shift to neutral and apply the brake pedal without locking the wheels

909< Enter - See the answer #

.909 当你在冰面上刹车,而你的车没停时,(无 ABS 刹车),你应该 D 转到空档,在不锁车轮的情况下,用刹车踏板



While driving on
a slippery
roadway,
the front tires
will have a
greater tendency
to skid,

if you:

- A) ease off the accelerator and
brake gently in good time
- B) brake sharply
- C) pump the brakes firmly
- D) shift to neutral

910< Enter - See the answer # - - - -

.910 当行驶在滑的路面上时,前面的轮子更易打滑,如果你 B 急刹车

Most vehicle skids are
the result of:

- A) over-inflated tires
- B) driving too fast
- C) under-inflated tires
- D) snow or ice on the road

911< Enter - See the answer # - - - -

.911 多数车的车轮打滑是因为 B 开得太快

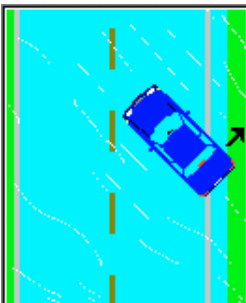


How
should you react
when the rear of your vehicle
begins to skid?

- A) Avoid braking, avoid accelerating
and steer in the opposite
direction of the skid
- B) Avoid braking, avoid accelerating
and steer in the direction you
wish to travel
- C) Accelerate and steer in the
direction opposite the skid
- D) Shift to neutral and brake sharply

912< Enter - See the answer # - - - -

.912 当你的后车轮开始打滑时,你应该如何反应 B 避免刹车,避免加速,掌握住你的行驶方向



In order
to control a skid,
you must:

- A) brake
- B) accelerate
- C) down shift (shift to a
lower gear and use
engine compression)
- D) concentrate on steering

913< Enter - See the answer # - - - -

.913 为了控制车轮打滑,你必须 D 全神贯注掌握方向



The rear of your vehicle is skidding to the right.

To regain control of the vehicle, you should:

- A) steer right
- B) steer left, then right
- C) avoid steering
- D) steer left

914< Enter - See the answer #

.914 你的车的后部正向右打滑,为了恢复对车的控制,你应该 A 向右转向

If the front wheels of your vehicle begin skidding when you apply the brake, you should:

- A) downshift to take advantage of the engine compression
- B) ease up on the brake pedal
- C) press harder on the brake
- D) maintain pressure and hold the steering wheel firmly

915< Enter - See the answer #

.915 当你用刹车的时候你的前轮开始打滑,你应该 B 放松刹车踏板

While driving,
you notice
the brake pedal is spongy.
The probable cause is:

- A) excess brake fluid in the master cylinder
- B) the brake pads are worn out
- C) the power brake unit is defective
- D) air in the brake lines

916< Enter - See the answer # - - - -

.916 在驾车时你发现刹车踏板软绵绵的,可能的原因是 D 刹车线上有空气

Before reversing with
your vehicle,
you must always:

- A) check to the left, to the right, and to the rear
- B) ask someone to guide you
- C) check the traffic density
- D) warn other drivers by tapping the horn

917< Enter - See the answer # - - - -

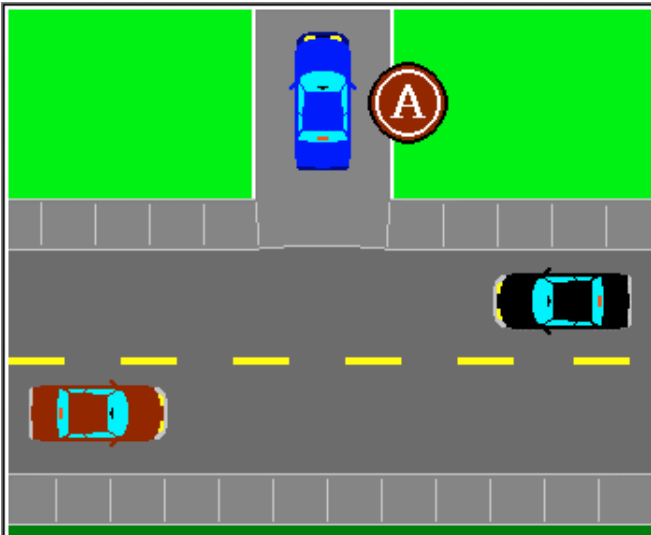
.917 在你倒车前,你必须总是 A 检查左边,右边,和后边

While reversing
a driver must:

- A) check the rear-view mirror
- B) check the side mirror
- C) check both the rear-view and side mirrors
- D) turn around to see behind the vehicle

918< Enter - See the answer # - - - -

.918 在倒车时, 司机必须 D 转头去看车的后面

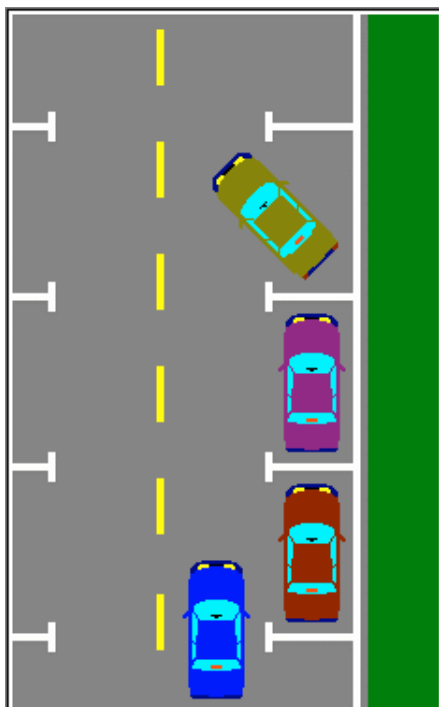


Before backing
into the roadway
the driver
should check:

- A) to the left
- B) to the right
- C) out the rear window
- D) to the left, to the right, and out the rear window

919< Enter - See the answer # - - - -

.919 在倒车进入该公路时, 司机必须检查 D 左边, 右边, 后窗的外面

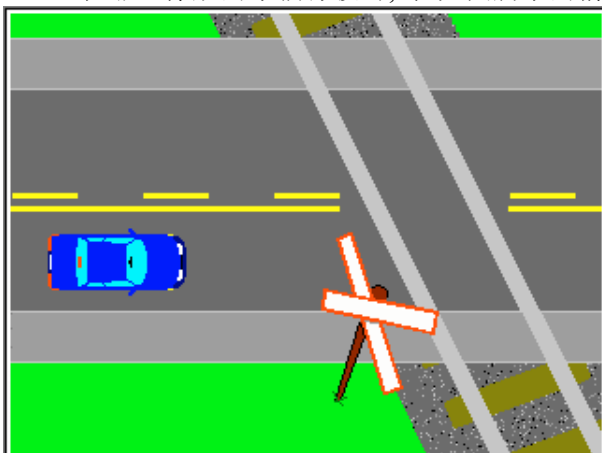


While driving next to
parked cars,
in this situation,
you should:

- A) stop and allow the vehicle to proceed
- B) stop as close to the vehicle as possible
- C) accelerate and pass the vehicle quickly
- D) slow down

920< Enter - See the answer #

.920 在靠近停放的车辆行驶时,在如图所示的情况下,你应该 A 停车,并让那辆车前行




Approaching
a level
railway crossing
without signal
lights,
you should:

- A) stop
- B) slow down
- C) slow down and check in both directions
- D) accelerate to cross more quickly

921< Enter - See the answer #

.921 当接近一个铁路平面交叉路口时,没有信号灯,你应该. C 减速并检查两个方向




Which force
has the
greatest
effect
on a vehicle
when
driving
downhill?

- A) Inertia
- B) Gravity
- C) Traction
- D) Friction

922< Enter - See the answer # - - - -

.922 当下坡行驶时,哪种力对车的影响最大 B 重力



When parking on a
downhill slope,
you should
apply the
parking brake
and:

- A) keep the wheels straight
- B) turn the wheels towards the center of the roadway
- C) turn the wheels towards the sidewalk
- D) rest the front wheels on the nearest shoulder

923< Enter - See the answer # - - - -

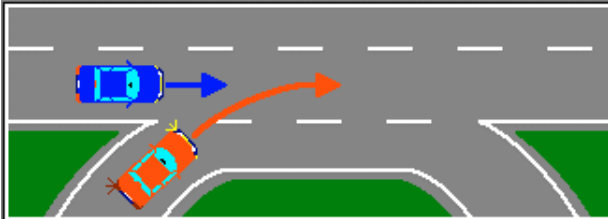
.923 当停放在向下的斜坡上时,你应该采用停放刹车, 并且 C 把车轮朝向路边

What should a driver do
before
driving down a steep hill?

- A) Down shift
- B) Shift to neutral
- C) Up shift
- D) Avoid shifting gears

924< Enter - See the answer #

.924 在从斜坡向下行驶前,司机应该 A 降速变档



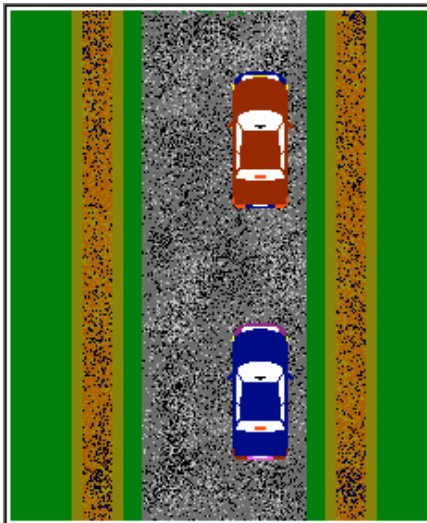
While driving in
the right lane
of an
expressway,
you notice that
a vehicle is
preparing to merge.

You should ...

- A) accelerate to prevent it from merging ahead of you
- B) tap the horn to remind him/her that you have the right-of-way
- C) change lanes to the left, if possible, or adjust speed to help him/her merge easily
- D) ignore it, since you have the right-of-way

925< Enter - See the answer #

.925 当在高速公路的右车道行驶,你发现有辆车准备并入,你应该 C 如可能的话,换到左边车道,或者调整车速以便与他的并入



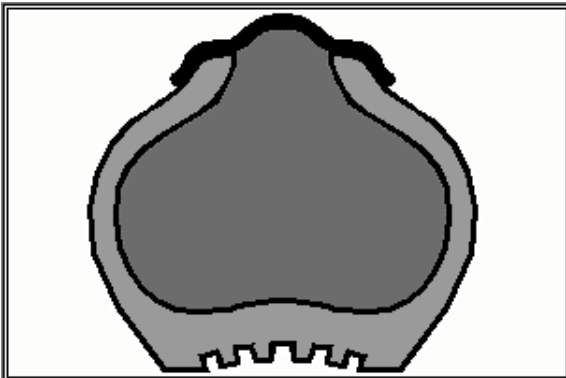
When driving
on a gravel roadway,
as shown,
the vehicle ahead
raises a cloud of dust
and decreases your
visibility

The best thing to do is:

- A) accelerate to pass the vehicle quickly
- B) activate the wipers and windshield washer
- C) move to the right side of the roadway
- D) slow down and allow the vehicle to move further away

926< Enter - See the answer #

.926 如图所示,当行驶在砾石路上,前面的车扬起了沙尘使你的能见度降低,你最好应该 D 减速让那辆车走远



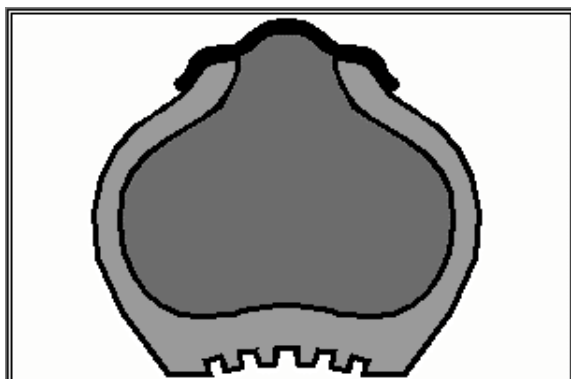
You are driving
a vehicle
with tires
that are slightly
underinflated.

This may lead to:

- A) a shorter braking distance
- B) better road handling
- C) a longer braking distance
- D) improved traction

927< Enter - See the answer #

.927 你驾的车的车胎有点充气不足,这可能会导致 C 更长的刹车距离



You are driving
a vehicle
with an
under-inflated tire.
What is a
probable consequence?

- A) The tire will wear prematurely
- B) Increased road handling
- C) The tire will overheat and as a result might blow-out
- D) Increased traction

928< Enter - See the answer #

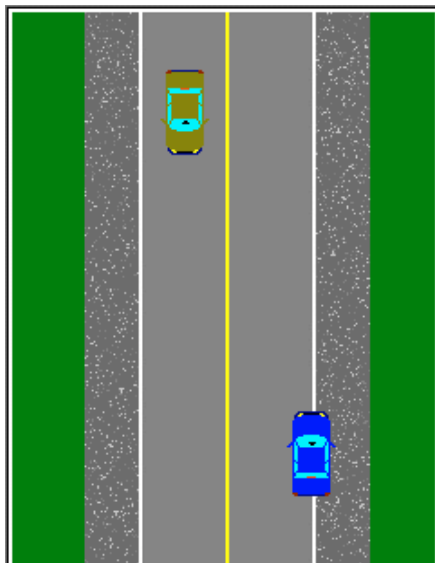
.928 你驾的车的车胎有点充气不足,,可能会有什么后果 C 该车胎可能会过热,结果可能会爆裂

What should you do in the case
of a sudden blowout?

- A) Shift to neutral and pump the brakes sharply until you stop
- B) Shift to neutral, gently pump the brake, hold the steering firmly avoiding quick movements and stop in a safe place
- C) Release the steering wheel and brake to a stop immediately
- D) Accelerate to stabilize, hold the steering firmly, steer straight ahead, then slow down gradually and stop in a safe place

929< Enter - See the answer #

.929 如果突然爆胎你应如何做 D 加速以保持平衡,握紧方向盘,直向行驶,然后逐渐减速,并在安全处停车.



When the right wheels drop off the roadway onto the shoulder, what is the best way to return to the pavement without initiating a skid?

- A) Steer immediately to the left
- B) Slow down without braking and then steer left after checking traffic
- C) Brake sharply then steer left quickly
- D) Accelerate sharply then brake; weight transfer will force the car to return

930< Enter - See the answer #

.930 当你的右侧车胎掉下公路,落到路边(SHOULDER) 上,你最好如何做才可以回到公路上,而不会滑向一边.B 不用刹车减速,检查车辆然后向左驾驶



You are driving in a very windy area. To maintain control of your vehicle, it is preferable to:

- A) slow down
- B) accelerate
- C) grip the steering wheel firmly
- D) drive closer than usual to the other vehicles

931< Enter - See the answer #


.931 你正在一个风很大的区域,为了维持对车的控制,你最好 A 减速

If you notice
that the
brakes are no longer working,
you should:

- A) shift to neutral
- B) shift into reverse
- C) turn off the ignition switch
- D) use compression and pump the parking brake while releasing the lock mechanism

932< Enter - See the answer # - - - -

.932 如果你发现刹车失灵, 你应该 D 加压, 并在释放锁定制动的同时操纵停车制动/



While driving,
you approach a patch of fog;
you should:

- A) stop on the shoulder
- B) accelerate
- C) slow down
- D) maintain speed

933< Enter - See the answer # - - - -

.933 当驾车时,你接近一片雾, 你应该 C 减速



When driving
in foggy weather conditions,
you should:

- A) use the low beam headlights
- B) use the high beam headlights
- C) activate the hazard lights
(emergency 4-way flashers)
- D) alternate from high to low
beam headlights

934< Enter - See the answer #

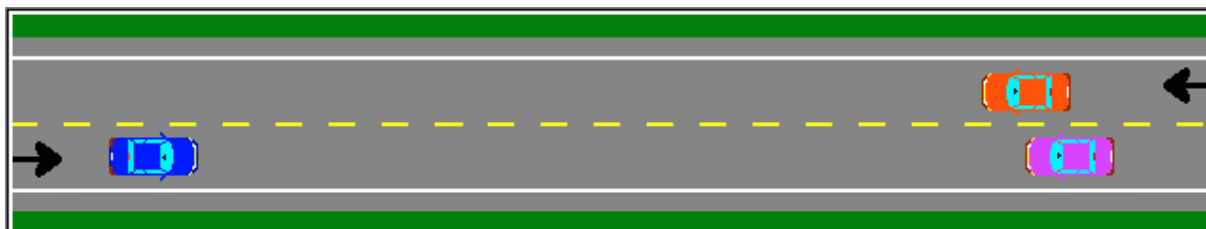
.934 当你在雾天驾车时,你应该 A 用车前灯的短焦距光

When deciding
whether or not to make a U-turn,
your first
consideration should be to check:

- A) the traffic signs
- B) the presence of trees, poles or
fire hydrants near the curb
- C) the turning radius of the vehicle
- D) the height of the curb

935< Enter - See the answer #

.935 当你在决定是否做 U 型转弯时,你第一个考虑的是应检查 A 交通信号



If an oncoming vehicle
has crossed over the center line and
is coming straight towards you,
you should:

- A) move to the left in order to avoid the oncoming vehicle
- B) tap the horn, flash the headlights and move towards the left side of the roadway
- C) tap the horn, flash the headlights and move towards the right side of the roadway
- D) do nothing; the other driver will be held responsible

936< Enter - See the answer #

.936 如果一辆迎面而来的车已越过的中线并直向你开来 C 按喇叭, 闪烁前灯并驶向路的右侧



Your lane is obstructed ahead,
as illustrated;
you should:

- A) accelerate to get there first
- B) drive onto the shoulder to avoid the obstacle
- C) maintain speed and ignore the oncoming car
- D) slow down and allow the other vehicle to pass before proceeding

937< Enter - See the answer #

.937 如图所示你的车道前方有障碍, 你应该 D 减速并且在向前行驶前先让其他车辆通过



You are driving
on a one-way road.

The lane to your right is
obstructed ahead
as illustrated;

you should:

- A) accelerate to pass the obstacle first
- B) maintain speed and proceed, you have the right-of-way
- C) accelerate if the other vehicle slows down, or slow down if it accelerates
- D) perform an emergency stop

938< Enter - See the answer # - - - -

.938 如图所示,你行驶在单向路上,你右边的车道前方有障碍,你应该 C 如果其他车减速你就要加速,或者如果它加速你就减速

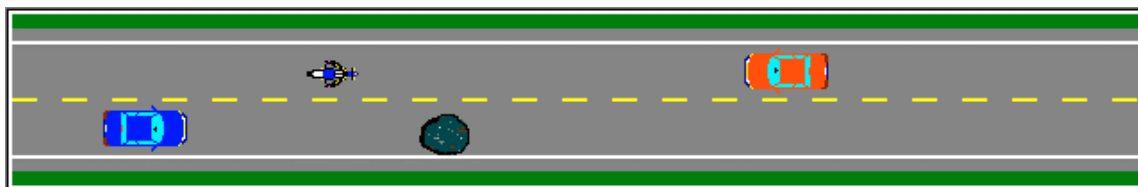
The engine of your vehicle is flooded
and the excess of gasoline
prevents starting.

To facilitate starting the engine,
you should:

- A) pump the accelerator while engaging the starter
- B) engage the starter without pressing on the accelerator
- C) push the accelerator half-way down and hold it there while engaging the starter
- D) press the accelerator to the floor and hold it there while engaging the starter

939< Enter - See the answer # - - - -

.939 你的发动机被淹没,并且多余的汽油妨碍发动,为了便于启动发动机,你应该 D 在启动发动机的同时,将加速器踩到底,并保持



While driving,
you notice a pothole ahead.
You should:

- A) steer sharply to avoid the hole
- B) slow down, release the brake prior to the pothole, cross slowly, and then resume speed
- C) accelerate to drive over the pothole quickly
- D) maintain speed, the suspension is designed to absorb impacts

940< Enter - See the answer #

.940 在驾车时你发现前方有一凹坑,你应该 B 减速,在凹坑前释放刹车,缓慢通过,然后恢复速度

To start moving
on a slippery surface
you should select ...

- A) 1st gear
- B) 2nd gear
- C) 3rd gear
- D) 4th gear

941< Enter - See the answer #

.941 在一滑的路面上开始行驶时,你应该选择 B 第二档

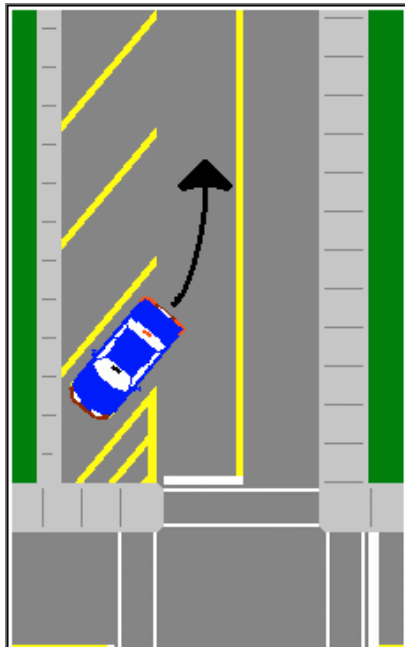
It is not a good idea to leave objects
on the dashboard,
because:

- A) objects will be reflected on the windshield and will obstruct the driver's vision
- B) objects can obstruct air vents
- C) such objects could injure the passengers should the car collide
- D) all of the answers are correct

942< Enter - See the answer #

942 在车的仪表板上放东西可不是一个好主意, 因为 (D)

- A 这些东西会反射到挡风玻璃上,并且会遮挡司机的视线
- B 这些东西会遮挡通风孔
- C 汽车相撞时这些东西会伤害乘客
- D 以上都对



Before backing out
of this parking stall,
you must activate:

- A) the hazard lights (emergency flashers)
- B) the left turn signals
- C) the right turn signals
- D) nothing, since there are no vehicles in the area

943< Enter - See the answer #

943 在倒出此停车位时, 你必须开动 C 右转信号

**Why is carbon monoxide considered
a very dangerous gas?**

- A) Because it is highly inflammable
- B) Because it is toxic, colorless,
odorless, and tasteless
- C) Because it is corrosive and can
damage the metal on vehicles
- D) Because it transforms oxygen
into a P.B.C.

944< Enter - See the answer #

.944 为什么一氧化碳被认为是一种非常危险的气体 B 因为他有毒, 无色无嗅无味



**When parking
in your garage:**

- A) you should enter
moving forward
- B) you should back
into the space
- C) it does not make any difference;
carbon monoxide is colorless,
odorless and tasteless
- D) it does not make any difference
since carbon monoxide is only
dangerous outdoors

945< Enter - See the answer #

.945 当你把车停放到车库时 A 你应该朝前行驶进入

After driving for several hours,
you are feeling tired.
What is the best thing to do?

- A) Open a window to increase fresh air circulation
- B) Stop for a cup of black coffee
- C) Stop and get sufficient rest or change drivers
- D) Talk with passengers or raise the volume of the radio

946< Enter - See the answer # - - - -

.946 当你驾驶了几个小时,感觉累了,你最好做什么 C 停车,并充分休息, 或换司机

What is the main cause
of chain reaction collisions
on expressways?

- A) Vehicles following at unequal distances
- B) Vehicles passing at excessive speeds
- C) Vehicles following too closely
- D) Vehicles with defective brake lights

947< Enter - See the answer # - - - -

.947 在高速公路上引起撞车连锁反应的主要原因是 C 车辆跟得太近了

According to statistics,
where are motorcycles and automobiles
most frequently involved
in collisions?

- A) On expressways
- B) At expressway exits
- C) At intersections
- D) On country roads

948< Enter - See the answer #

.948 据统计, 摩托车和汽车撞车最频繁的地方是 C 交叉路口

When a doctor
prescribes medication for you
and you know you will be driving,
you should:

- A) take the medication, but stop taking it if you notice that it affects your ability to drive
- B) ask the doctor if this medication will affect your ability to drive
- C) take the medication but make sure you also take some other medication that will keep you awake
- D) take the medication, but drive more slowly for the next few hours until the effect wears off

949< Enter - See the answer #

.949 当医生为你开医药处方, 而你知道你还要开车, 你应该 B 问医生该药是否影响你的驾驶能力

If you
drink a few alcoholic beverages
and also take
some depressant drug or medication,
the effects of both will be:

- A) combined
- B) cancelled
- C) as expected
- D) multiplied

950< Enter - See the answer #

.950 如果你喝了一点酒精饮料,而且你还吃了一些镇静药,二者的结果会是 D 增加

If you drink
only 2 or 3 alcoholic beverages
one hour before driving, this ...

- A) will not affect your ability to drive
- B) may very well decrease your judgement and your reflexes
- C) will improve your reflexes
- D) is always illegal

952< Enter - See the answer #

.952 如果你在驾驶 1 小时前只喝了 2 或 3 杯酒精饮料 B 可能适当的降低你的判断力和反应

You drank quite
a number of alcoholic beverages
within a relatively short period
of time.

The best thing to do is to:

- A) drive at 30 km/h or less
- B) drive with someone sitting
next to you
- C) drive after a light meal and
some black coffee
- D) wait one hour for each glass
you drank before driving

953< Enter - See the answer # - - - -

.953 你在较短的时间内喝了许多酒精饮料,你最好 D 在驾驶之前,每喝一杯等待时间为 1 小时

Your driver's licence can be revoked
for various reasons.
In Québec,
the most common reason for revocations
is:

- A) hit and run
- B) driving while impaired by
alcohol
- C) racing for a wager or a bet
- D) driving at excessive speeds

954< Enter - See the answer # - - - -

.954 你的驾照会因为多种理由被撤回,在魁北克,撤回的最普遍的原因是 B 酒后驾车

The rate of elimination
of alcohol and its effects
cannot be accelerated
because:

- A) alcohol is digested by the stomach before going to the liver
- B) the small intestine filters alcohol before it goes to the liver
- C) alcohol is digested by the stomach before it is eliminated in the urine
- D) the liver eliminates 90% of consumed alcohol at its own steady rate

955< Enter - See the answer # - - - -

.955 酒精及其影响的清除率不会被加快, 因为 D 肝脏以其稳定的速度清除吸收酒精的 90%

After drinking alcohol,
the driver will tend to ...

- A) stare at objects straight ahead
- B) scan the roadway ahead and to the sides
- C) stare at objects at the sides of the roadway
- D) scan the sides of the roadway only

956< Enter - See the answer # - - - -

.956 在喝了酒之后, 司机倾向于 A 盯着正前方的物体看

**How does alcohol affect
the habitual drinker?**

- A) Less of a visible effect, but this may lead to overestimating his/her driving ability
- B) The habitual drinker can "handle" alcohol and can avoid becoming impaired
- C) His/her BAC (blood alcohol concentration) will be higher than others
- D) Effects are more visible and he/she will be more impaired

957< Enter - See the answer # - - - -

.957 酒精对经常喝酒的司机有何影响 A 对视觉的影响很小,但它会导致他过高估计自己的驾驶能力

**Which one of the following statements
is false?**

- A) The liver eliminates 90% of the ingested alcohol
- B) Spacing out drinks and consuming non-alcoholic beverages will moderate your B.A.C. level
- C) Eating while drinking delays the effects of alcohol
- D) Larger and heavier people eliminate alcohol more quickly

958< Enter - See the answer # - - - -

.958 下列说法哪个是错的 (D)

- A 肝脏清除吸收酒精的 90%
- B 间或饮酒和喝无酒精饮料将会降低你的 B.A.C 水平
- C 边吃边喝会延迟酒精的影响
- D 身体胖大的人排泄酒精更快

**In what percentage
of fatal crashes
is alcohol considered to be a factor?**

A) 25%

B) 40%

C) 50%

D) 80%

959< Enter - See the answer # - - - -

.959 酒精作为一个因素导致致命撞车的百分比是 C 50%

**Can certain drugs or medication
eliminate fatigue?**

A) Of course

B) Never

C) Sometimes

D) Yes, if prescribed
by a doctor

960< Enter - See the answer # - - - -

.960 药物可以清除疲劳吗 B 永远不会



Auto Evalueur



is

reserves

2636-6104

Québec Inc.